

# K.C.P.E NINTH TRIAL

## STANDARD EIGHT 3RD TERM 2021/2022

SOCIAL STUDIES  
AND  
RELIGIOUS  
EDUCATION

Time: 2 hours 15 minutes

### READ THESE INSTRUCTIONS CAREFULLY

1. You have been given this question booklet and a separate answer sheet. The question booklet contains 90 questions.
2. Do any necessary rough work in this booklet.
3. When you have chosen your answer, mark it on the ANSWER SHEET, not in the question booklet.

### HOW TO USE THE ANSWER SHEET

4. Use an ordinary pencil.
5. Make sure that you have written on the answer sheet:  
**YOUR INDEX NUMBER**  
**YOUR NAME**  
**NAME OF YOUR SCHOOL**
6. By drawing a **dark line** inside the correct numbered boxes mark your full Index Number (i.e. School Code Number and the three-figure Candidate's Number) in the grid near the top of the answer sheet.
7. Do not make any marks outside the boxes.
8. Keep your answer sheet as clean as possible and do not fold it.
9. For each of the questions 1-90, four answers are given. The answers are lettered A, B, C and D. In each case only **ONE** of the four answers is correct. Choose the correct answer.
10. On the answer sheet the correct answer is to be shown by drawing a **dark line** inside the box in which the letter you have chosen is written.

#### Example

In the question booklet:

- 33.** The **MOST** important sea port in Eastern Africa is
- A. Kampala
  - B. Mombasa
  - C. Nairobi
  - D. Dar-es-salaam.

The correct answer is **B** (Mombasa)

On the answer sheet:

**3** | A | B | C | D |    **13** | A | B | C | D |    **23** | A | B | C | D |    **33** | A | B | C | D |    **43** | A | B | C | D |

In the set of boxes numbered **33**, the box with the letter **B** printed in it is marked.

11. Your **dark line** **MUST** be within the box.
12. For each question **ONLY ONE** box is to be marked in each set of four boxes.

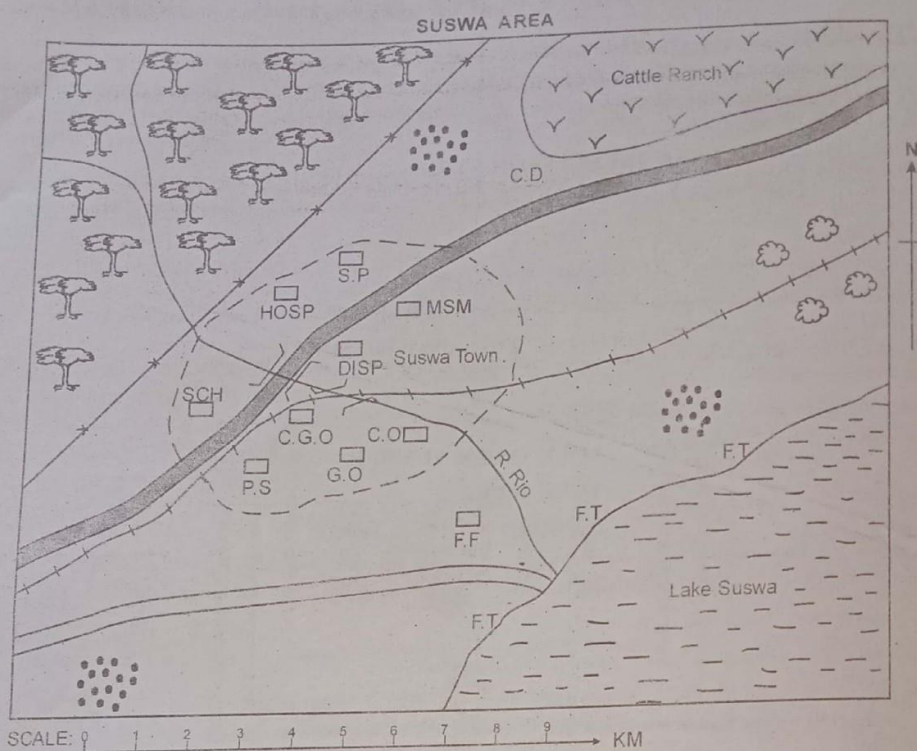
This question paper consists of 12 printed pages.

Candidates should check the question paper to ensure that all the pages are printed as indicated and no questions are missing.

Website: [www.jesmapublishersltd.com](http://www.jesmapublishersltd.com)

E-mail: [info@jesmapublishers.com](mailto:info@jesmapublishers.com)

## PART I: SOCIAL STUDIES



**KEY**

HOSP	Hospital	F.F	Fish Factory
MSM	Museum	(Cluster of dots)	Human settlement
DISP	Dispensary	(Two squares)	Permanent Buildings
SCH	School	(Two cloud shapes)	Limestone quarries
C.G.O	County Government Offices	(Thick wavy line)	Dry weather road
P.S	Police Station	(Thick solid line)	All weather road
G.O	Governor's office	(Line with cross-ticks)	Railway line
C.O	Chief's office	(Dashed line)	Town boundary
F.T	Fish Traps	(Line with star-ticks)	Electric fence
C.D	Cattle Dip	S.P	Swimming pool

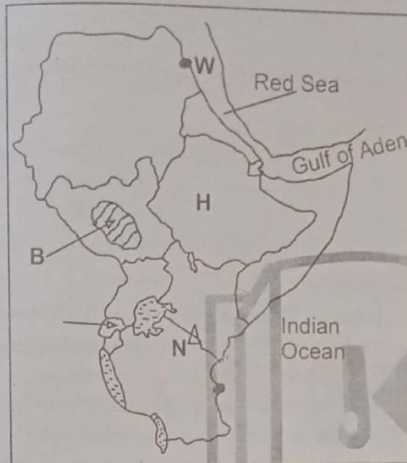
Use the map of SUSWA Area to answer questions 1 to 7.

1. What is the general direction of the cattle ranch from Lake Suswa?  
A. North-West.      B. South.  
C. North East.      D. North.
2. What is the approximate area of the forested area in square kilometres?  
A. 16km<sup>2</sup>      B. 9km<sup>2</sup>  
C. 64km<sup>2</sup>      D. 32km<sup>2</sup>
3. Which one of the following social services is **NOT** available in Suswa town?  
A. Educational service.  
B. Health services.  
C. Religious services.  
D. Recreational services.
4. Three of the following economic activities are carried out in Suswa area. Which one is **NOT**?  
A. Fishing.  
B. Crop farming.  
C. Pastoralism.  
D. Trading.
5. What evidence on the map shows that there is security in Suswa town?  
A. Police station.  
B. County government offices.  
C. Museum.  
D. Governor's office.
6. The **MAIN** factor that may have influenced the setting up of the fish factory in Suswa area is availability of.  
A. good roads.  
B. market in Suswa town.  
C. fish.  
D. River Rio.
7. The **MAIN** means of transport in suswa area is, \_\_\_\_\_ transport  
A. water  
B. railway  
C. cable  
D. road
8. The basic unit in the society is the.  
A. clan.      B. family.  
C. age-set.      D. school.
9. Which one of the following is **TRUE** about the political organisation of the Khoikhoi?  
A. The Khoikhoi chiefs had all the powers in leadership.  
B. Chieftainship was not hereditary.  
C. The Khoikhoi were led by chief and a council of elders.  
D. The Lukiiko helped the Khoikhoi chiefs in ruling.
10. Which one of the following comprises of fresh water lakes in the Rift valley? Lakes  
A. Naivasha, Baringo and Turkana.  
B. Bogoria, Magadi and Nakuru.  
C. Nakuru, Naivasha and Elementaita.  
D. Victoria, Naivasha and Turkana.
11. The coastal Bantus of Kenya are.  
A. Wachagga, Makonde, Yao and Sukuma.  
B. Sanya and Dahalo.  
C. Abaluhya, Abagusii, Abakuria and Abasuba.  
D. Wadawida, Mijikenda, Pokomo and Waswahili.
12. Three of the following are **TRUE** about a civil marriage. Which one is **NOT**?  
A. A marriage certificate is issued.  
B. It is strictly a polygamous type of marriage.  
C. The marriage is conducted by a government official.  
D. Marriage banns are posted in a public place.
13. Which one of the following is **TRUE** about the population structure of Kenya?  
A. High motality rate.  
B. There are more males than females.  
C. People over 65 years are more than the youth.  
D. Life expectancy is very high.

14. Below are descriptions of an early visitor to Eastern Africa.
- He combined missionary work with exploration.*
  - He was the first European to see Mt. Kenya.*
  - He translated the Bible from English to Kiswahili.*
  - He interacted with the Rabai and Kamba people.*
- The early visitor described above is **LIKELY** to be
- Dr. Ludwig Krapf.
  - Dr. David Livingstone.
  - Johann Rebmann.
  - Seyyid Said.
15. Which one of the following groups consists of crops grown in traditional agriculture among Kenyan communities?
- Wheat, rice, sugarcane.
  - Tea, coffee, pyrethrum.
  - Millet, sorghum, cassava.
  - Maize, beans, arrow roots.
16. The **MAIN** form of interaction in traditional Kenyan communities was.
- birthday celebrations.
  - games and sports.
  - wars.
  - trade.
17. Which one of the following weather instruments is **CORRECTLY** matched with the element of weather it measures?
- Hygrometer - direction of wind.
  - Anemometer - strength of wind.
  - Barometer - strength of wind.
  - Windsock - air pressure.
18. Below are descriptions of farming.
- Farming is highly mechanised.*
  - Vegetables, fruits and flowers are grown.*
  - Most of the land used for agriculture has been reclaimed.*
  - Crops are grown mainly for local market.*
  - Farmers sell mainly through middlemen.*
- Which one of the following combinations describes horticultural farming in Kenya **ONLY**?
- (i), (iii), (v).
  - (ii), (iv), (v).
  - (ii), (iii), (iv).
  - (iii), (iv), (v).
19. Mr. Kamau has shared his land among his four sons. A dispute arises amongst the sons arguing over the sizes of land given to them. The **BEST** way for Mr. Kamau to settle the dispute is by
- Discussing the issue with his family.
  - Selling the land to get money.
  - Calling the police to arrest the arguing sons.
  - Taking back the land.
20. Which one of the following is **NOT** a role of pupils in the school?
- Taking part in making the school rules.
  - Being keen on their studies.
  - Selecting their subject teachers.
  - Participating in co-curricular activities.
21. Mwanawina Lewanika and Kabak Mutesa I had one thing in **COMMON**. It is that they,
- resisted European imperialism.
  - Were paramount chiefs in their communities.
  - Led their countries to independence.
  - Welcomed European colonialists into their territories.

22. The initial problem that faced **MOST** of the multi-purpose river projects in Africa was,
- siltation.
  - inadequate funds to establish the projects.
  - displacement of people.
  - water-borne diseases.

Use the map of Eastern Africa provided below to answer questions 23 to 26.



23. The mountain marked N is known as,
- Mt. Kilimanjaro.
  - Ruwenzori mountains.
  - Mt. Kenya.
  - Pare mountains.
24. The National park marked B is called,
- Bwindi.
  - Sibiloi.
  - Southern.
  - Maasai Mara.
25. The town marked W is known as,
- Juba.
  - Khartoum.
  - Masawa.
  - Port Sudan.
26. Which one of the following is **TRUE** about the country marked H?
- It is not a landlocked country.
  - It is the most populated country in Eastern Africa.
  - It was the first country to gain independence in Eastern Africa from the British.
  - Most of her population is made up of Nilotic speakers.

27. Which one of the following was the **MAIN** reason for the formation of the East African Community (EAC)? To
- bring closer economic and social cooperation in East Africa.
  - promote trade in East Africa.
  - improve transport and communication among member states.
  - unite the member countries into one political unit.

28. Below are characteristics of a type of vegetation in Africa.
- Trees have long taproots.
  - Some forests have deciduous trees.
  - The main types of trees include pine, oak, cork and cedar.
  - Trees have thick stems for support.
  - Aromatic shrubs are found in the lower altitudes.
  - Trees are cone shaped.
- The type of vegetation described above is the

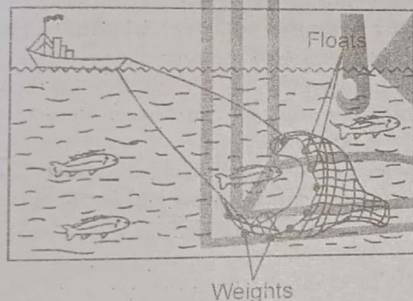
- tropical rainforests.
  - savanna woodlands.
  - alpine vegetation.
  - mediterranean.
29. Three of the following are ways of demonstrating patriotism. Which one is **NOT**?
- Paying our taxes.
  - Participating in national polls.
  - Engaging in corruption.
  - Obedying the laws of our country.
30. The **MAIN** factor that **UNDERMINES** national unity in Kenya is,
- tribalism.
  - nepotism.
  - corruption.
  - unequal distribution of resources.
31. The Northern region of Kenya is sparsely populated **MAINLY** due to,
- unfavourable climatic conditions.
  - poor drainage.
  - insecurity and terrorism.
  - infertile soils.

32. Below are uses of a mineral in Kenya.
- It is used in the manufacture of cement.*
  - It is used in oil refineries.*
  - It is used in making cans and sufurias.*
  - It is used in making sulphuric acid.*
- The mineral with the uses listed above is
- limestone.
  - flourspar.
  - soda ash.
  - diatomite.
33. Three of the following show the importance of a school routine. Which one **DOES NOT**? It
- brings order in the school.
  - enables pupils to manage school-time well.
  - helps to strengthen discipline in schools.
  - ensures that all children go to school.
34. The following are types of rights that citizens in a country should enjoy.
- Right to education.*
  - Freedom of expression.*
  - Freedom of movement.*
  - Right to life.*
  - Freedom of worship.*
  - Right to security.*
- Which one of the following shows social rights **ONLY**?
- (ii) and (iii)
  - (iv) and (vi)
  - (iv) and (v)
  - (i) and (vi)
35. Which one of the following is **NOT TRUE** about the Commonwealth?
- It is headed by the Queen of England.
  - It consists of all former British colonies.
  - It promotes parliamentary democracy in member states.
  - Its headquarters are in London.
36. The Kenya oil pipeline from Mombasa to Nairobi was established in 1978 **MAINLY** in order to,
- reduce the damage of roads by oil tankers.
  - reduce theft of oil products.
  - reduce the cost of transporting oil products.
  - ensure a continuous flow of the commodity being transported.
37. The red colour on the national flag of Kenya shows,
- that we are all African living in Kenya.
  - our common struggle for independence.
  - how the Kenyan land is fertile.
  - the unity that holds Kenyans together.
38. Three of the following are roles played by the Kenyan government in promoting trade. Which one is **NOT**?
- Arranging trade fairs and exhibitions in other countries.
  - Establishing export processing zones.
  - Removing tax relief and subsidies from local manufacturers.
  - Improving transport and communication networks.
39. Which one of the following groups of rivers drain into the Lake Victoria? Rivers.
- Ewaso Nyiro North, Nyando and Nzoia.
  - Sondu Miriu, Migori and Sabaki.
  - Nile, Ruffji and Pangani.
  - Kagera, Sio and Kuja.
40. Below are descriptions of a town in Eastern Africa.
- It is located in a high altitude area.*
  - It is a major industrial centre.*
  - It is also called a New Flower.*
  - It hosts the headquarters of a continental organisation.*
- The town described above is **LIKELY** to be,
- Kampala.
  - Nairobi.
  - Addis Ababa.
  - Arusha.

41. The **MAIN** way of managing slow population growth is,
- improving health and medical services for all citizens.
  - increasing food production to fight drought and famine.
  - encouraging immigration.
  - giving child allowances.

42. The **MAIN** problem facing the Common Market for Eastern and Southern Africa (COMESA) is
- poor transport and communication.
  - production of similar goods.
  - civil wars.
  - political differences among member states.

Use the diagram below to answer question 43



43. The fishing method shown above is known as,
- purse-seining.
  - net drifting.
  - long lining.
  - trawling.

44. The cabinet secretary in the ministry of Health in Kenya would like to send a message to all Kenyans on ways of curbing the spread of COVID-19. The **BEST** way in which the message would reach very many Kenyans would be through the,
- television.
  - facebook.
  - radio.
  - local newspapers.

45. Three of the following are ways of protecting children from child abuse. Which one is **NOT**?
- Encouraging children to work hard in school.
  - Educating children on their rights.
  - Enforcing policies that protect children.
  - Educating the society on the need for child protection.

46. Which one of the following countries in Africa has the **LONGEST** coastline?
- South Africa.
  - Madagascar.
  - Democratic Republic.
  - Mozambique.

47. First aid is given **MAINLY** in order to
- prevent injury.
  - reduce pain and suffering.
  - save life.
  - promote recovery.

48. Which one of the following groups of pre-historic sites contains those that are found in Kenya **ONLY**?
- Olduvai Gorge, Laetoli and Kooda.
  - Magosi, Nzongezi and Sango Bay.
  - Hadar, Lalibela and Omo Valley.
  - Naiokotome, Hyrax Hill and Chesowanja.

49. Tourists visit the coastal parts of Kenya **MAINLY** due to,
- warm sandy beaches.
  - pre-historic sites.
  - beautiful scenery.
  - warm climate.

50. The **MAIN** problem facing Perkerra Irrigation scheme is,
- mismanagement of the project.
  - reduction of water during the dry season.
  - siltation of the canals.
  - inadequate labour during harvesting seasons.

51. Mzee Jomo Kenyatta is remembered by Kenyans **MAINLY** because,
- he united Kenyans through the Harambee Philosophy.
  - his son, Uhuru Kenyatta became Kenya's fourth president.
  - he led Kenya to independence.
  - settled landless Kenyans.

52. Three of the following are causes of lawlessness. Which one is **NOT**?

- A. Religious differences.
- B. Poverty
- C. Lack of employment opportunities.
- D. Equal distribution of resources.

53. The major step that the governments of Kenya and Tanzania took in improving the lives and activities of the Maasai was,

- A. production of group ranches.
- B. provision of veterinary services.
- C. encouraging them to practise sedentary life styles.
- D. putting up boarding schools for their children.

54. The standard eight pupils of Masomo primary school decided as a group to visit places during a class trip. The type of democracy that they practised is known as.

- A. representative democracy.
- B. participatory democracy.
- C. delegative democracy.
- D. indirect democracy.

55. The government of Kenya encourages the establishment of jua kali industries **MAINLY** in order to

- A. improve the standards of living of many Kenyans.
- B. Reduce overdependence of imported goods.
- C. Create self-employment opportunities.
- D. Earn the country foreign exchange.

56. Three of the following are functions of the president of Kenya. Which one is **NOT**? He or she

- A. is the head of state and government.
- B. has the power to demote members of the cabinet.
- C. has the power to forgive convicted criminals.
- D. is the chief legal advisor of the government.

57. Maize growing in Kenya and Tanzania is important **MAINLY** because,

- A. it creates employment for the citizens of Kenya and Tanzania.
- B. maize is the main food for most Kenyans and Tanzanians.
- C. it improves the standards of living in both countries.
- D. maize is exported to earn the two countries foreign exchange.

58. Which one of the following is **NOT TRUE** about the Kenya African National Union (KANU)?

- A. The party was initially called Uhuru Party.
- B. It was formed in Kiambu in March 1960.
- C. It championed for a regional type of government.
- D. It led Kenya to independence.

59. Below are duties of the Kenya Police Service.

- i) Initiating road safety sensitization.
- ii) Controlling crowds at accident scenes.
- iii) Inspecting vehicles to ensure they are roadworthy.
- iv) Maintaining law and order on Kenyan roads.

Which one of the following departments of the Kenya Police Service carries out the above listed duties?

- A. Traffic police.
- B. Road safety police.
- C. Regular police.
- D. General Service Unit.

60. The officer incharge of elections at the constituency level is,

- A. returning officer.
- B. presiding officer.
- C. constituency elections officer.
- D. polling clerk.

**JESMA K.C.P.E PREDICTION WILL BE OUT ON 18<sup>TH</sup> FEBRUARY, 2022  
DON'T MISS!!!**

STD 8 SSTRE 009 3<sup>RD</sup> TERM 2021/2022



**PART II: RELIGIOUS EDUCATION**  
**SECTION A**  
**CHRISTIAN RELIGIOUS EDUCATION**

61. According to the Biblical stories of creation, God created seas and vegetation on which day?  
 A. 2<sup>nd</sup> day.                      B. 4<sup>th</sup> day.  
 C. 3<sup>rd</sup> day.                      D. 5<sup>th</sup> day.
62. "Leave your country, your people and your fathers household and go to the land I will show you" Genesis 12:1 To whom were those words told?  
 A. Abraham.                      B. Lot.  
 C. Moses.                      D. Terah.
63. Which one of the following weather signs represents God's covenant with Noah?  
 A. Wind.                      B. Rainbow  
 C. Clouds.                      D. Rain.
64. On that night I will pass through Egypt and strike down every firstborn both men and animals and I will bring judgement on all the gods of Egypt. I am Lord" Exodus 12:12. On what occasion did God do what he had said above? During  
 A. crossing of the Red sea  
 B. day of pentecost  
 C. feast of the passover.  
 D. baptism of Jesus
65. Which of the following is a lesson that Christians learn about the making of the covenant between God and Israelites at Mt. Sinai? God  
 A. is concerned with human affairs.  
 B. is merciful and forgiving.  
 C. wants us to respond to him by faith.  
 D. takes the initiative in establishing close relationship between himself and his people.
66. Who among the following Kings broke the 2nd commandment?  
 A. Solomon.                      B. Herod.  
 C. David.                      D. Saul
67. Who among the following Judges of Israel was both a prophetess and a judge?  
 A. Barak.                      B. Ruth.  
 C. Deborah                      D. Abigail.
68. The following statement describes a man whose story is told in the Old Testament.  
 i) His wife lulled him into sleep.  
 ii) The enemy gorged his eyes out.  
 iii) The enemy chained him and put him to work on grinding mill.  
 Who are the man and the woman described above?  
 A. Ruth and Boaz.  
 B. Delilah and Samson.  
 C. Deborah and Gideon.  
 D. Delilah and Barak.
69. Who among the following prophets was sent by God to pronounce judgement to King David for carrying out a census against Gods will? II Samuel 24:11  
 A. Nathan.                      B. Isaiah.  
 C. Gad.                      D. Jeremiah.
70. "I will put my law in the minds of the people and write it on their hearts. I will be their God and they will be my people." Who among the following prophets gave the prophecy above?  
 A. Micah.                      B. Isaiah.  
 C. Joel                      D. Jeremiah.
71. "This child is destined to cause the falling and rising of many in Israel and to be a sign that will be spoken against, so that the thoughts of many hearts will be revealed. And a sword will pierce your own soul too. Lk 2:34-35. The above words were spoken concerning Jesus by  
 A. Prophetess Anna                      B. Zachariah.  
 C. Simcon                      D. Angel Gabriel
72. How old was Jesus when he began his ministry?  
 A. 30 years                      B. 41 years  
 C. 27 years                      D. 20 years.
73. Which one of the following statements is a TRUE meaning of the parable of the sower?  
 A. The growth of the kingdom of God.  
 B. How people receive the message of God.  
 C. God will separate the good and the evil.  
 D. We should pray without ceasing.
74. Which one of the following lessons do Christians learn from the incident when Jesus met the adulterous woman who was to be stoned to death?  
 A. God cannot forgive those who commit adultery.  
 B. Adulterous people should be stoned to death.  
 C. All sinners should be punished for their evil deeds.  
 D. All of us are sinners and should seek God's forgiveness.
75. According to Jesus teaching on the sermon on the Mount, who will be called the children of God? The  
 A. pure in heart.                      B. merciful  
 C. peace makers.                      D. humble.
76. Which one of the following is the first miracle that Jesus performed?  
 A. Changing water into wine  
 B. Calming of the storms.  
 C. Feeding of the five thousand men.  
 D. Miraculous catch of fish.

77. During the transfiguration one of the disciples whom Jesus had gone with suggested that they should put up three shelters. One for Jesus, one for Moses and one for Elijah Lk 9:33. Who among the following disciples suggested that?  
A. John. B. Peter.  
C. James. D. Andrew.
78. During the crucifixion and death of Jesus on the cross, all the following took place EXCEPT  
A. the curtain of the temple was torn into two.  
B. there was a great earthquake and the rocks were split.  
C. the Holy spirit came down in form of a dove to comfort Jesus.  
D. The tombs were opened and many bodies of the saints were raised.
79. During the day of the pentecost Peter urged the people to repent and be baptised. How many people were converted and baptized on that day?  
A. 10 000 B. 300  
C. 5 000 D. 3 000
80. Which one of the following statements is NOT found in the Apostles creed?  
A. He will come to judge the living and the dead.  
B. Thy will be done on earth as it is in heaven.  
C. I believe in the Holy Catholic church.  
D. He is seated at the right hand of God.
81. Which one of the following beliefs are NOT similar in Christianity and traditional African religion?  
A. Offering sacrifices to the ancestors.  
B. Respect for human life.  
C. Belief in life after death.  
D. Responding to God through worship.
82. Which one of the following is the MAIN reason why children were highly valued in African traditional society?  
A. They are a source of wealth to their parents.  
B. They would take care of their parents in their old age.  
C. Life is continued through children.  
D. They would be sent by their parents.
83. Three of the following are reasons why circumcision is practised in traditional African communities. Which one is NOT? The initiates  
A. pass from childhood to adulthood.  
B. are allowed to get married.  
C. become full members of their community.  
D. become members of the extended family.
84. According to traditional African religion, what is reconciliation?  
A. Sacrificing to God.  
B. Restoring broken relationships.  
C. Shaking each other's hands.  
D. Charging fines to the offenders.
85. Wawira a std seven girl was told by her grandmother that she would go through circumcision. She refused and gave her a reason for her desire to complete her studies. What skill did she have?  
A. Critical thinking. B. Creative thinking.  
C. Assertiveness. D. Goal setting.
86. Who among the following people spent his sunday afternoon BEST after the church service?  
A. Jacob: He visited an elderly lady and helped her fetch firewood.  
B. Jackson: He went back to church for the choir practice.  
C. James: He preached in a crusade.  
D. Victor: He went for a Bible study.
87. Which one of the following is BEST reason why a Christian should avoid drug abuse?  
A. Drugs affects our health.  
B. Drug abuse wastes a lot of money.  
C. Some drugs makes one drunk.  
D. Our bodies are the temple of the Holy spirit.
88. After getting honte from the shop, Henry realised that the shopkeeper had given him more money than what his balance was. He walked back and gave the shopkeeper had given him more money and explained to him all what had happened. What Christian virtue did Henry display?  
A. Obedience. B. Faithfulness.  
C. Love. D. Gentleness.
89. Which one of the following actions BEST shows how mismanagement of natural resources can be stopped?  
A. Employing more forest rangers.  
B. Arresting those who mismanage the resources.  
C. Educating people on the importance of resources.  
D. Applying heavy fines for those who mismanage the resources.
90. Which one of the following was NOT found in a mission station started by missionaries? A  
A. school B. health centre.  
C. church. D. restaurant.

**SECTION B**  
**ISLAMIC RELIGIOUS EDUCATION**

61. Which one of the following verses is found in Surah Kafirun?  
A. Lam yalid walamyulad.  
B. Minsharri maaKhalaaq.  
C. Maaliki yaumiddin.  
D. La'abudu mata'abudun.
62. Who among these groups of people is **NOT** a loss according to Asr? Those who  
A. renew their faith oftenly.  
B. believe in Allah and the last Day.  
C. belive and do righteous deeds.  
D. perform Swala and pay Zakkat.
63. Which of the following hours is the **MOST** recommended to recite the Muawidhatein chapters in the Holy Qur'an?  
A. Before any function begins.  
B. Immediately a child is born.  
C. Before you start your journey.  
D. Before going to sleep.
64. According to Surah Maun, orphans should  
A. be treated with respect.  
B. be treated with kindness.  
C. not be repulsed.  
D. not be oppressed.
65. Which Surah narrates an event that teach muslims to avoid arrogance in life? Surah  
A. Al-Lahab      B. Al-Qureish  
C. Al-Kafirun      D. Al-Nasr
66. All the following are benefits of Islamic greetings to Muslims according to hadiths **EXCEPT**  
A. greetings take away sins.  
B. creates closeness to Allah.  
C. is a dua and a good wish.  
D. earns thawaabs to muslims.
67. Three of the following are names that refer to the grand mosque in Jerusalem. Which one is **NOT**?  
A. Bait-ul-Attiq      B. Bait-ul-Maqdis  
C. Bait-ul-Muqaddas      D. Masjid Aqsa
68. A sunna act in the performance of Wudhu is  
A. having intention.  
B. performing in the correct order.  
C. starting by reciting Bismillah.  
D. Performing while facing Qibla.
69. The special meal that muslims feast on past mid night before a fasting day is called  
A. Iftaar      B. Twa'am  
C. Suhuar      D. Walima
70. A full rakaat in swalah comprises of these pillars. Which one is **NOT**?  
A. Sujud      B. Ghushuu  
C. Rukuu      D. Julus
71. Which one of the following obligation that Sheikh Abridge did to his child is **NOT** rite among the compulsory rites of a child?  
A. Naming  
B. Adhan in the right ear.  
C. Aqiqa ceremony.  
D. Iqama in the left ear.
72. Muslims in a village came together to build a mosque through Harambee. Uthman promised to bring 1000 bricks. He should say  
A. Jazakallah      B. Maashallah  
C. Innalillah      D. Inshallah
73. The **MAIN** reason why muslims should instill a virtue of punctuality in their children is because it  
A. promotes better performance in school.  
B. make them responsible citizens.  
C. give them enough time for playing.  
D. makes them avoid unnecessary punishment.
74. The government announces a serious outbreak and spread of CORONA Virus in your village. As a muslim, what should you do?  
A. Migrate to another village.  
B. Pray, recite duas and continue with your normal life.  
C. Sit and wait for Qadar.  
D. Take precautions as directed by doctors.
75. The **MAIN** reason why Islam encourages the love and care for HIV/AIDS victims is  
A. we all belong to Allah and to Him will all go back.  
B. to avoid stigmatization.  
C. to be close to Allah.  
D. HIV/AIDS is not a disease from Zinaa.

76. The wealth left behind by a person who dies to be shared among his/her close relatives according to his/her will is called  
 A. Mirath B. Am-waal  
 C. Fulus D. Tarka
77. Allah (s.w) commanded fire, "Be cool and peaceful to \_\_\_\_"  
 A. Yusuf B. Yunus  
 C. Ibrahim D. Ayub
78. The heavy punishments to people who practice wordom, adultery and fornicaiton are meant to control \_\_\_\_ in the Islamic society.  
 A. hypocrisy  
 B. Zinaa  
 C. family break ups  
 D. rites for women
79. It is great Ibaada and most rewarding for muslims to slaughter animals during  
 A. Idd-ul-Hajj B. Idd-ul-Fitr  
 C. Idd-ul-Usubu'u D. Yaumulthame
80. From the prophet's farewell speon during Hijjatul Widaa, muslims learn all the following EXCEPT one. Which one?  
 A. A muslim is a brother to another muslim.  
 B. Muslims must assist neighbours.  
 C. The main sources of knowledge are Qur'an ad Hadith.  
 D. The womens' rites must be respected.
81. Which business practise among these is haraam and has a curse of Allah?  
 A. Giving bribe.  
 B. Selling good on credit.  
 C. Stocking a variety of goods.  
 D. Earning a reasonable profit.
82. In which of the following places did Angel Jibril (A.S) direct the prophet to lead all other prophets in a two rakaat prayer?  
 A. In Masjid Ma'amur  
 B. In Jerusalem city.  
 C. At Sidratul Muntaha  
 D. In Makkat Mukarrama
83. Which one of the following is NOT an Attribute of Allah(s.w)?  
 A. Al-Musawwir  
 B. Al-Mustafa  
 C. Al-Baasir  
 D. As-Saami'i
84. Which one of the following events took place as a result of persecution of new converts in Makkah?  
 A. Migration of muslims to Abbysinia.  
 B. Hijra of the prophet of Madina.  
 C. Destruction of the Holy Kaaba.  
 D. The battle of Badr.
85. Immediately Adam was found guilty of sinning with Hawa he  
 A. was made a vice gerand.  
 B. received a punishment.  
 C. was sent out of paradise.  
 D. asked Allah for forgiveness.
86. The phrase "Samia-allahu Liman Hamidah" is said  
 A. in Adhaan for Fajr prayer.  
 B. among phrases for Tashahud.  
 C. in Ildal.  
 D. to mark the end of Swalah.
87. Which of the following festivals has NO Khutba sermon?  
 A. Aqiqa ceremony  
 B. Jum'a prayer  
 C. Nikah ceremony  
 D. Idd-festival
88. The rituals performed to the dead during funeral are classified under \_\_\_\_ by the sharia.  
 A. Fardh A'in B. Mustahab  
 C. Sunna Muaqada D. Fardh Kifaya
89. Allah (s.w) made four different people very rich. They all decided to appreciate Allah. Who appreciated in the BEST way? One -  
 A. assisted the neighbours when necessary.  
 B. spend some wealth to the poor and distitutes.  
 C. thanked Allah always.  
 D. constructed mosques.
90. During fat-hul Makkah, among the places declared safe to take refuge was in the house of  
 A. AbuLahab  
 B. Abubakkar  
 C. Abu Suffyan  
 D. Abu Talib