

ART AND CRAFT

1. What is the gradual change of colour from dark to light or light to dark?
 - A. Smudging
 - B. Gradation
 - C. Scribbling
 - D. Cross hatching
2. A grade 5 learner was arranging still life objects for drawing. She placed some objects in front of others. What was the importance of overlapping these objects?
 - A. To make some objects appear smaller.
 - B. To make some objects appear larger when drawn.
 - C. For easier drawing of the objects behind.
 - D. To create an illusion of depth.
3. Give the meaning of a secondary colour.
 - A. It is a colour that can be obtained by mixing any two colours.
 - B. It is a pure colour.
 - C. It is a colour obtained by mixing two primary colours in equal proportions.
 - D. It is a colour obtained without mixing primary colours.
4. The following are methods of preparing materials used for coiling technique in basketry. Which one is **not**?
 - A. Plaiting
 - B. Dyeing
 - C. Texturing
 - D. Splitting
5. Which is not a skill that can be applied while exhibiting artworks?
 - A. View point.
 - B. Use of space.
 - C. Placement of the artwork.
 - D. Colour and contrast of background.
6. A learner was adding white paint into red colour while painting so as to create a lighter tone. What is this process called?
 - A. Shading
 - B. Tinting
 - C. Polishing
 - D. Smudging
7. Which element of art is outstanding while using stippling as a shading technique?
 - A. Lines
 - B. Shape
 - C. Colour
 - D. Texture
8. A grade 4 learner wanted to prepare his clay before making a pot. He used the following steps.
 - i) *Kneading.*
 - ii) *Collection of clay.*
 - iii) *Removing impurities.*Arrange the steps correctly from the first to the third.
 - A. ii, iii, i
 - B. i, ii, iii
 - C. iii, i, ii
 - D. ii, i, iii
9. The following are elements of photography. Which one refers to the sharpness and clarity of an image?
 - A. Viewpoint
 - B. Focus quality
 - C. Background
 - D. Centre of interest
10. Which tool is the most suitable for scratching an image in crayon etching?
 - A. Ply wood
 - B. Adhesive
 - C. Toothpick
 - D. Glass

MUSIC

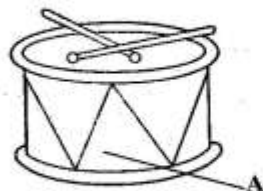
11. Which verse of the East African anthem begins with the words "Viwandani na hata mashambani?"
- Verse 3
 - Verse 1
 - Verse 2
 - Chorus

12. Which of the following is **not** an African stringed instrument?
- Shiriri
 - Litungu
 - Ukelele
 - Wandindi

13. What are the **correct** French rhythm names for the following notes?



- Taa, ta-te, ta-te, taa
 - Taa-aa, taa, taa, taa-aa-aa-aa
 - Taa-aa-aa-aa, taa, taa, taa-aa
 - Taa, taa-aa-aa-aa, ta-te
14. The loudness or softness of a song is commonly referred to as
- tone
 - rhythm
 - dynamics
 - pitch
15. The following is a drum.



- The part labelled A on the drum above is called the
- resonator
 - sling
 - tuning laces
 - thongs

16. "Kenya, my pride and joy, forever I will cherish....." These words seem to come from a type of song we call _____
- sacred song
 - action song
 - lullaby song
 - patriotic song

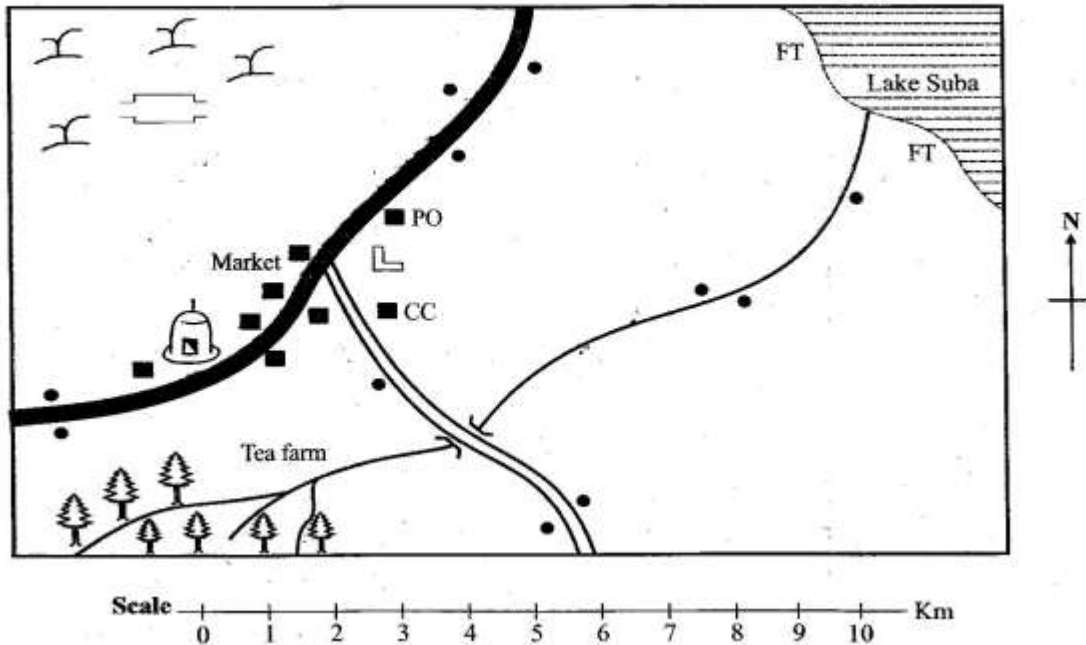
17. When playing a descant recorder, which hand should play notes B, A, G?
- Any hand
 - Left hand
 - Right hand
 - Both hands

18. Which of the following would **not** be an occasion that would make a community sing a folk song?
- Voting for a leaders.
 - A wedding ceremony.
 - A funeral in the community.
 - During initiation ceremonies.

19. The performance where two people sing a two-part song is called a _____
- dual
 - trio
 - collabo
 - duet

20. The part of a folk song that is usually the **most** exciting and intense in performance is called the
- climax
 - structure
 - ornamentation
 - verse

SOCIAL STUDIES
SUDA AREA



KEY

	Forest		Permanent buildings		Mosque
	River and Bridge		Scrubs		Post Office
	Tarmac road		Settlements		Cultural Centre
	Cattle dip		Murrum road		Fish Trap

Study the map of Suda area and answer questions 21-24.

21. What is the general direction of the Lake Suda from the forest?

- A. North West B. South West
C. North East D. South East

22. Ufanisi school had a field study at Suda area. Their Social Studies teacher asked the learners to write economic activities being carried out in the area. Who gave a **wrong** answer?

- A. Karau - Lumbering
B. Keji - Fishing
C. Katrina - Trading
D. Kamau - Farming

23. People in Suda area are **most** likely to belong to which religion?

- A. Christianity B. Islam
C. Traditional D. Hinduism

24. The climate of the South Western part of Suda area can be described as

- A. cool and dry B. cool and wet
C. hot and dry D. hot and wet

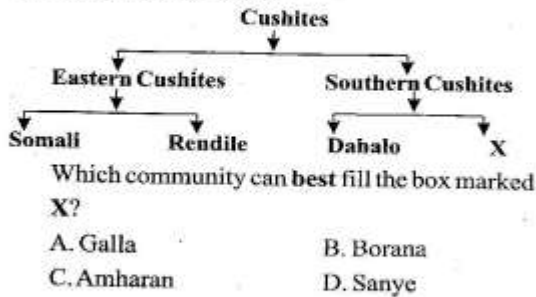
25. The capital city of Somalia is located at a place called

- A. Mogadishu B. Juba
C. Kismayu D. Addis Ababa

26. Physical features that include swamps, dams, rivers, lakes and oceans are commonly known as

- A. manmade features B. highland features
C. drainage features D. irrigation features

27. Study the chart below



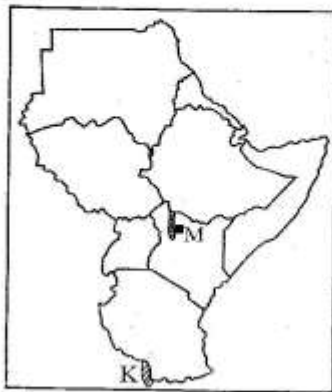
28. Below are characteristics of a certain climatic region in Eastern Africa.

- i) Rainfall ranges between 750mm - 1200mm annually.
ii) High temperatures between 24°C - 31° degrees.
iii) High humidity is experienced throughout the year.

The climatic region described above is

- A. desert climate B. sub-tropical climate
C. mountain climate D. tropical climate

Use the map of Eastern Africa below to answer questions 29 to 30.



29. The game park marked M is known as

- A. Sibiloi B. Serengeti
C. Boni D. Tsavo

30. Which of these statements about the shaded lake marked K is true?

- A. It is a historic built environment.
B. It is the only source of fish in Tanzania.
C. It is the deepest lake in Eastern Africa.
D. It is a Rift Valley lake.

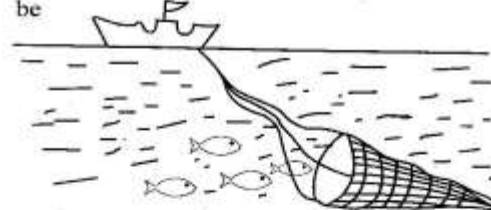
31. The Bantus learnt the practice of circumcision from the

- A. Semites B. Nilotes
C. Arabs D. Cushites

32. Below are reasons why most communities migrated to other places in the past. Which one is not?

- A. Spirit of adventure.
B. Search for pasture and water for their animals
C. Search for places with good climate.
D. Search for employment in plantations.

33. The fishing method described below is likely to be



- A. purse seining B. trawling
C. net drifting D. long lining

34. Which of the following statements is not true on how people living around the school work with the school?

- A. Donate land to expand the school.
B. Conduct school assemblies.
C. Donate teaching and learning materials.
D. Participate in school projects.

35. The Buganda kingdom had a parliament called

- A. Ssaza B. Kabaka
C. Miruka D. Lukiko

SECTION A:

CHRISTIAN RELIGIOUS EDUCATION

36. Learners from your class have different names. Why do you think each of them should have a name?
- A. For identification.
 - B. They are children.
 - C. They are learners.
 - D. They are human beings.
37. During a reading lesson, Edinah tore Tabitha's story book. Tabitha became angry. Select one way in which Tabitha can **best** cope with anger.
- A. Avoid playing with Edinah.
 - B. Go home and cry for a long time.
 - C. Tell Edinah to be careful when handling people's items.
 - D. Unfriend Edinah.
38. Doris and Mediatrix are cousins. Select a list that contains other members of an extended family.
- A. Father, mother and daughter.
 - B. Uncle, aunt and grandparents.
 - C. Mother, father and grandfather.
 - D. Nephew, niece and daughter.
39. Pick a list that contains people that we should trust.
- A. Parents, teachers, drivers.
 - B. Neighbours, priest, friend.
 - C. Police officer, stranger, motorbike rider.
 - D. Parents, church leaders, police officer.
40. Which activity shows how Christians co-work with God?
- A. Killing wild animals.
 - B. Taking care of plants.
 - C. Cutting down trees.
 - D. Throwing rubbish in the surrounding.
41. From the books of the Bible below, pick a book of the old testament?
- A. Habakkuk
 - B. John
 - C. Hebrews
 - D. Corinthians
42. Which Bible story teaches us about repentance?
- A. Balaam's donkey.
 - B. Joseph the dream interpreter.
 - C. Zachaeus the tax collector.
 - D. Lazarus and the two sisters.
43. What lesson do Christians learn from the story of Samson?
- A. God loves weak people.
 - B. God strengthens those who depend on him.
 - C. God is powerless.
 - D. Samson had magic powers that helped him defeat the Philistines.
44. The following are Christian values learnt from the story of Joseph and his brothers. Which one is **not** correct?
- A. Faithfulness
 - B. Love
 - C. Jealousy
 - D. Fairness
45. "I will curse those who curse you." God made this promise to who?
- A. Elisha
 - B. Elijah
 - C. Solomon
 - D. Abraham
46. Grade six learners were asked to state how they spend their leisure time. They gave the following points. Who among the four uses his or her leisure time to serve the community?
- A. Hannah → Sleeps
 - B. Peter → Visits the sick.
 - C. Tonny → Watches cartoon.
 - D. Miriam → Gossips
47. Which one of the following pairs consists of the two sons of Zebedee who were the disciples of Jesus?
- A. John and James
 - B. Simon and Andrew
 - C. Jacob and Tiberius
 - D. John and Andrew

CREATIVE ARTS & SOCIAL STUDIES ASSESSMENT

48. A lesson Christians learn from the miracle of Jesus walking on water is that
- Jesus has power over death.
 - Jesus is a universal saviour.
 - Jesus has power over nature.
 - Jesus is a healer.
49. Jesus performed different miracles. From the list provided below, pick one that shows that Jesus is a source of life?
- Healing a bleeding woman.
 - Raising Jairus daughter.
 - Walking on water.
 - Healing a paralyzed man.
50. Which one of the following is a characteristic of a good citizen?
- One who is patriotic.
 - One who is rich.
 - One who has the highest level of education.
 - One who kills wild animals.
38. "Verily we have granted you a river in paradise." This quotation is from surah
- Humaza
 - Kauthar
 - Takathur
 - Falaq
39. Which one of the following surahs talks about the day of judgement?
- Kauthar
 - Fatiha
 - Naas
 - Qariah
40. Four learners of grade six were asked by their teacher to name the surah that emphasizes on kindness to orphans. Who among them was right?
- | | | |
|------------|---|----------|
| A. Maryam | : | Zilzalah |
| B. Zakia | : | Kauthar |
| C. Ruwayda | : | Fatiha |
| D. Sheikh | : | Maun |

SECTION A:

ISLAMIC RELIGIOUS EDUCATION

36. Abubakr, a grade 6 learner has formed a bad habit of performing prayers late as well as coming to school late. Which surah would you advise him to read?
- Asr
 - Fiil
 - Takathur
 - Fatiha
37. Which surah of the Quran is known as the mother of Quran?
- Fiil
 - Masad
 - Fatiha
 - Kauthar
41. Complete the following hadith, "Allah does not look at your appearance or wealth but rather He looks at your
- prayers and fast.
 - heart and actions.
 - colour and status.
 - brains and intelligence.
42. How many signs does a hypocrite have according to the hadith of the prophet (SAW)?
- Three
 - Four
 - Two
 - Five

43. Which one of the following is the fifth pillar of Iman? Belief in
- angels
 - books
 - prophets
 - day of judgement
44. Radhia a grade 6 learner found her friend stealing from the teacher's desk. What was the right of action for her to take?
- Report her to the class teacher.
 - Leave her alone.
 - Tell her why it is wrong to steal.
 - Tell her to share what she has stolen.
45. Allah (S.W.T) is known as Al-Fattah. This means that He is
- The fashioner.
 - The opener.
 - The most merciful.
 - The most gracious.
46. Who among the following angels is **correctly** matched with his duty?
- Ridhwan** → Incharge of paradise.
 - Mikail** → Incharge of death.
 - Israfil** → Incharge of hell.
 - Jibril** → Incharge of rainfall.
47. Believing in Allah as if you see Him is referred to as
- Taqwa
 - Ihsaan
 - Tawakkul
 - Iman
48. Who among the prophets of Allah was thrown into a blazing fire but did **not** burn?
- Daud
 - Yusuf
 - Ibrahim
 - Yunus
49. The state of ritual impurity is referred to as
- Twaharah
 - Istinjai
 - Tawbah
 - Najasaat
50. Four learners of Grade 6 were asked to mention the examples of Najasaat-ul Mutawasit. Who among them was **wrong**?
- Saum → Pus
 - Zakariah → Urine
 - Yunus → Pig
 - Shabaaz → Alcohol