

TARGETER WINGS
MONITORING LEARNER'S PROGRESS
GRADE 5 - 2022



CREATIVE ARTS AND SOCIAL STUDIES

TIME: 1 Hour 40 Minutes

ART AND CRAFT (10 marks)

1. In drawing a still-life composition all the following are needed except
 - A. a pencil
 - B. drawing paper
 - C. needle
 - D. eraser
2. When you arrange a fruit in front of the other to hide parts of the fruit behind, it creates _____
 - A. proportion
 - B. overlap
 - C. balance
 - D. value
3. The diagram below shows a certain technique used in drawing. It is known as



- A. cross-hatching
- B. tonal value
- C. shading
- D. smudge technique

4. Which objects should be placed behind the others?
 - A. Smaller
 - B. Tiny
 - C. Large
 - D. Medium
5. The following are required while making wax crayons **except**
 - A. powder pain
 - B. modelling clay
 - C. paraffin wax
 - D. sharp object
6. Grade 5 pupils listed the colours below
 - (i) yellow
 - (ii) green
 - (iii) blue
 - (iv) violet
 - (v) red
 - (vi) orange

Which list consists of secondary colours?

- A. (i), (iii), (v)
- B. (ii), (iv), (vi)
- C. (ii), (iv), (v)
- D. (iv), (v), (vi)

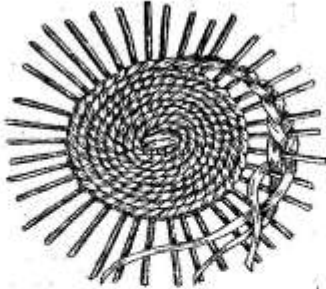
7. The technique of cutting, sorting and pasting different textured materials on a surface is known as

- A. collage
- B. montage
- C. carving
- D. etching

8. A circular chart that helps us identify colours is called _____

- A. colour chart
- B. colour blend
- C. colour wheel
- D. colour circle

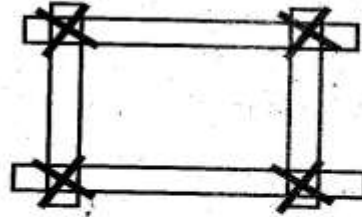
9. Grade 5 pupils made a basket using the method drawn below



Which technique did they use?

- A. Plain technique
- B. Coil technique
- C. Twine technique
- D. Carving technique

10. This is a tool used in weaving. What is it called?



- A. Sticks
- B. Joinery
- C. A dowel loom
- D. Picture frame

MUSIC (10 marks)

11. During a folk dance performance, the participants wear specially designed clothes, hides or skins called

- A. ornaments
- B. costumes
- C. adornment
- D. sisals

12. Grade 5 teacher drew the hand sign shown below




Which sol - fa syllable is represented by the hand sign?

- A. d
- B. r
- C. m
- D. s

13. Grade 5 learner drew the instrument shown below.



Identify the instrument and community that plays it.

- A. Coro - Agikuyu
B. Abu - Luo
C. Chivoti - Digo
D. Nzumari - Duruma
14. Observing good manners and behaviour while making body movements is also known as _____
- A. co-ordination
B. performance
C. etiquette
D. movements
15. Which is the french rhythm name for these symbol? 
- A. Taa B. Ta-te
C. Taa-aa D. Ta
16. A person who leads the rest of the participants in singing the melodies during the performance of the dance is the _____
- A. chorus B. dancer
C. soloist D. instrumentalist

17. Grade 5 learners wanted to make a wind instrument. Which of the following is not a material they would use?

- A. Bamboo stem
B. Plastic bottle
C. Coiled horn
D. Reeds

18. Which of the following shows the second line of verse 1 of the East African community anthem?

- A. Tuwezeshe kuishi kwa amani
B. Tuwajibike tuimarike
C. Viwe msingi wa umoja wetu
D. Jumuiya ya Africa mashariki

19. The diagram below shows a descant recorder



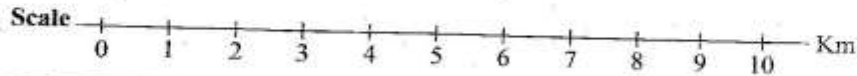
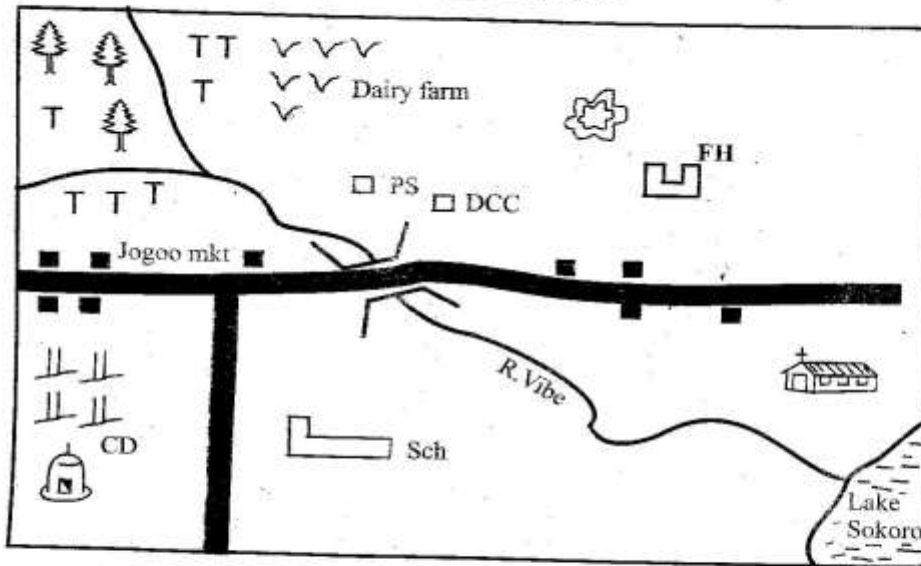
It is played by

- A. blowing
B. hitting
C. plucking
D. shaking
20. The speed at which a song is sung is known as
- A. volume
B. dynamics
C. tempo
D. articulation

SOCIAL STUDIES

Study the map of Jogoo area and answer questions 21 - 24.

JOGOO AREA



KEY

	Forest	v v v	Dairy farm		Quarry
TT	Tea	Mkt	Market		tarmac road
CD	Cattle dip		Bridge		School
	Permanent buildings		Mosque	DCC	Deputy County Commissioner
	scrubs		Church	PS	Police Station
				FH	Fire House

21. The cattle dip is on the _____ of the school
- East
 - South
 - West
 - North West
22. The people of Jogoo area practise the following economic activities **except**
- trading
 - tourism
 - agriculture
 - mining
23. The main product from dairy farming is
- butter
 - skins and hides
 - milk
 - meat
24. What is the main means of transport in Jogoo area?
- Air
 - Road
 - Railway
 - Air
25. The following are the importance of historic built environments **except**
- they are source of employment
 - they do not teach about our culture
 - they attract tourists
 - they are sources of information
26. Which community belongs to the Nilotes?
- Mijikenda
 - Sanye
 - Iteso
 - Indians
27. An area which has few people is said to be _____ populated
- medium
 - highly
 - densely
 - sparsely
28. Dairy farming is practised in _____
- Marsabit
 - Kiambu
 - Turkana
 - Wajir
29. The following are duties of an administrator in school
- In charge of school curriculum*
 - In charge of learners' discipline*
 - Secretary during staff's meeting*
 - Prepares the school timetable*
- Whose duties are described above?
- Senior teacher
 - Deputy Head teacher
 - Teachers
 - Head teacher
30. Which mineral is mined at Athi River?
- | | |
|--------------|--------------|
| A. Fluorspar | B. Salt |
| C. Soda ash | D. Limestone |

31. Which of the following is not a drainage feature?
- A. River
 - B. Swamp
 - C. Lake
 - D. Plain
32. Areas in Northern, North-Eastern and some parts of Eastern Kenya experience _____ climate.
- A. modified equatorial
 - B. semi desert
 - C. Mountain
 - D. Modified tropical
33. Traditional education was done through the following ways except
- A. Riddles
 - B. Learning from teachers
 - C. Songs
 - D. Learning from specialists
34. Which one is **not** an importance of horticultural crops?
- A. Earn foreign exchange
 - B. Source of food to us
 - C. Source of timber
 - D. Used as raw materials in industries
35. Method of fishing where a spear is used is called _____
- A. hook and line
 - B. harpooning
 - C. basket trap
 - D. trawling

C.R.E

36. Who in the Bible saw a burning bush that was on fire but it was not burning up?
- A. Pharaoh
 - B. Moses
 - C. John
 - D. Paul
37. Which of the following was **not** one of the values taught by John the baptist?
- A. Kindness
 - B. Faith
 - C. Injustice
 - D. Caring
38. Grade five pupils were discussing life threatening situations. Which one was **not** correct?
- A. Floods
 - B. Drought
 - C. Fire outbreak
 - D. Good harvest
39. Through baptism, Christians show _____ in God
- A. harmony
 - B. love
 - C. faith
 - D. peace
40. The miracle of the feeding of four thousand men teaches us that _____
- A. God provides for our needs
 - B. God has power over nature
 - C. We should pray once
 - D. We should forgive one another
41. The Christian religious rite that involves immersing in with water as a sign of cleansing sins is
- A. communion
 - B. baptism
 - C. bathing
 - D. compassion

42. Three of the following occurred during the baptism of Jesus except
- heaven opened
 - holy spirit came down in form of a dove
 - disciples spoke in tongues
 - a voice was heard
43. Believers in the early church promoted unity by doing the following **except**
- sharing meals
 - reading the word of God together
 - going to different churches
 - praying together
44. Jesus christ shared with his disciples the last meal before
- ascending to heaven
 - crucifixion
 - burial
 - dedication
45. The _____ represented the body of Jesus christ.
- wine
 - bread
 - spirit
 - blood
46. Which of the following is not a fruit of the holy spirit?
- Joy
 - Love
 - wisdom
 - kindness
47. When King Solomon made the decision of giving the child to his real mother, he practised the **value of**
- peace
 - wisdom
 - love
 - responsibility
48. Paying attention to someone and trying to get the meaning of what we hear is _
- making decision
 - showing respect
 - listening
 - problem solving
49. Which one of the following is not a way of worshipping God?
- Praying
 - Singing
 - Preaching
 - Attending funerals
50. _____ and _____ stood firm in their faith.
- Mary and Joseph
 - Peter and John
 - Peter and Moses
 - Moses and Ezekiel
- I.R.E**
36. Who among the following angel of Allah (SW) will blow the trumpet on the day of judgement?
- | | |
|-------------|-----------|
| A. Izrafeel | B. Jibril |
| C. Izarail | D. Mikail |

37. At what age did prophet Muhammad (S.A.W) marry lady Khadija?
 A. 40 years B. 25 years
 C. 30 years D. 28 years
38. Which was the first surah to be revealed to prophet Muhammad (S.A.W)?
 A. Alaq B. Humaza
 C. Fatiha D. Al-fil
39. Which one of the following surah warns Muslims against backbiting?
 A. Asr B. Fil
 C. Kauthar D. Humaza
40. Surah Al - Asr wants all muslims to practise
 A. patience B. humility
 C. kindness D. generosity
41. The prophet (SAW) said that paradise lies under the feet of
 A. parents B. fathers
 C. mothers D. uncles
42. Where did Nabii Muhammad (SAW) receive his first revelation?
 A. Cave Nur
 B. Cave Hirah
 C. Cave Thaur
 D. Cave Sinai
43. The sayings of prophet (S.A.W) are commonly known as
 A. sunnah
 B. ihsan
 C. stories
 D. hadith
44. Which one of the following animals can put one in a state of heavy Najis?
 A. Cow B. Cat
 C. Elephant D. Dog
45. Which one of the following surahs of the Quran encourages kindness to the orphans?
 A. Falaq B. Fil
 C. Kauthar D. Maun
46. Which one of the following acts can spoil a person's wudhu?
 A. Swimming B. Walking
 C. Sleeping D. Talking
47. Which one of the following surah promises the prophet (S.A.W) a river in paradise?
 A. Kauthar B. Humaza
 C. Maun D. Ikhlas
48. Who was the 1st wife of prophet Mohammad?
 A. Aisha B. Sauda
 C. Khadija D. Maryam
49. How old was the prophet (S.A.W) when he became a prophet?
 A. 65 yrs B. 25 yrs
 C. 55 yrs D. 40 yrs
50. Who among the following does not receive Zakat?
 A. Debtors B. Needy
 C. Poor D. Orphans