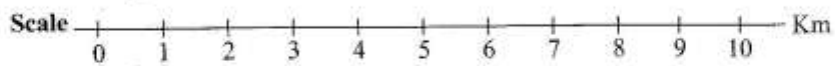
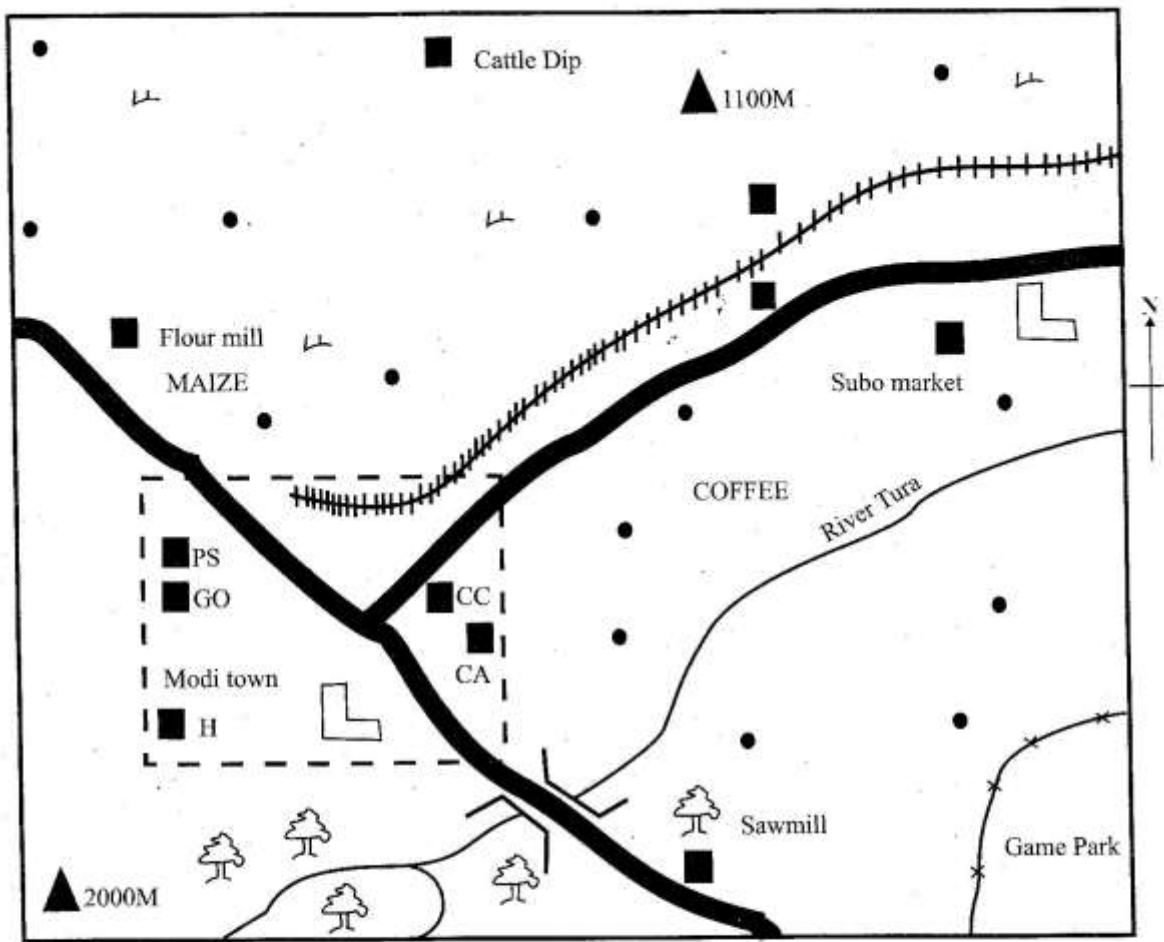



PART I: SOCIAL STUDIES
SEBO AREA



■	Built-up areas	H	Hospital	- - - -	Town boundary
•	Settlement		Planted forest	⌌	Grass
⌒	School	CC	County Commissioner	PS	Police Station
▬	Tarmac road	GO	Governor's Office	▲	Hill
⊥⊥⊥⊥	Railway line	CA	County Assembly		

Study the map of Sebo Area and answer questions 1 - 7

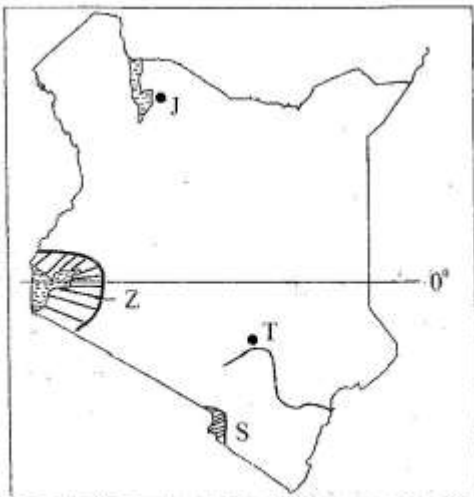
1. The approximate area of Modi town in square kilometres is
A. 15km²
B. 40km²
C. 25km²
D. 36km²
2. Three of the following statements about the forest in Sebo area are true. Which one is **not**?
A. It consists of indigenous trees
B. It is a source of timber
C. It is in a highland region
D. It protects water catchment areas
3. Which of the following social services is **not** provided in Modi town?
A. Administrative services
B. Educational services
C. Health services
D. Religious services
4. Which one of the following economic activities is carried out in the Northern part of Sebo area?
A. Tourism
B. Livestock keeping
C. Coffee growing
D. Mining
5. The location of the flour mill was **mainly** influenced by nearness to
A. a tarmac road
B. large market in Modi town
C. maize farms
D. cheap source of labour
6. The general direction of the school in Subo market from the sawmill is
A. North East
B. North
C. South West
D. South

7. The Southern part of Sebo area has favourable conditions for growing
A. sisal
B. cotton
C. rice
D. tea
8. Initiation ceremonies were held in traditional African communities in order to
A. solve conflicts in the society
B. set the beginning of a new stage in life
C. enable young people to interact
D. teach young people history of the community
9. The **main** reason why the government encourages people to practice family planning methods is to
A. control mortality rate in the country
B. make use of existing resources
C. improve people's standards of living
D. enable the government to plan for development needs of the people
10. Which one of the following minerals is **correctly** matched with the country where it is extracted in large scale?

<u>Mineral</u>		<u>Country</u>
A. Soda Ash	-	South Africa
B. Copper	-	Kenya
C. Petroleum	-	Nigeria
D. Gold	-	Zambia
11. Which among the following is a modern method of electronic media?
A. Internet
B. Newspaper
C. Magazine
D. Letters

12. Who among the following traditional African leaders welcomed European Christian missionaries?
- Kabaka Mutesa I
 - Chief Mkwawa
 - Masaku
 - Mekatilili wa Menza
13. Which one of the following is a social use of soil?
- Making bricks
 - Making glass
 - Building houses
 - Burying the dead
14. Which one of the following countries of Eastern Africa is a member of the Southern African Development Community (SADC)?
- Burundi
 - Rwanda
 - Tanzania
 - Uganda
15. Which one of the following is the **main** problem facing dairy farming in Kenya?
- Decrease in grazing land
 - High cost of controlling pests
 - Competition from imported powder milk
 - Frequent droughts in farming areas

Use the map of Kenya below to answer questions 16 to 19



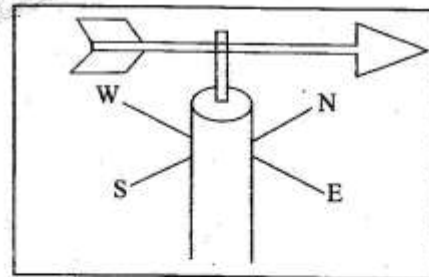
16. The pre-historic site marked **J** is
- Eliye springs
 - Nariokotome
 - Hyrax Hill
 - Koobi Fora
17. The **main** economic activity of the community that settled in the shaded area marked **S** is
- trading
 - nomadic pastoralism
 - crop growing
 - fishing
18. Three of the following statements about the town marked **T** are correct. Which is **not**?
- It is the country's main industrial town
 - It is served by a railway line
 - It is found in a pineapple growing area
 - It is a residential town
19. Which one of the following statements about the relief region marked **Z** is true?
- It has a highland relief
 - It receives high rainfall
 - It experiences low temperatures
 - It has semi-arid conditions
20. Which one of the following factors is the **least** cause of road accidents in Kenya?
- Failure to observe traffic rules
 - Presence of many vehicles on the roads
 - Carelessness by road users
 - Unroadworthy vehicles
21. The **main** reason for the outbreak of the MAUMAU war in Kenya was that
- Africans wanted back their land
 - Africans wanted to join the Legislative Council
 - Africans wanted to be allowed to grow cash crops
 - Africans wanted their leaders to be released from prison

22. Three of the following statements about the population of Germany are true. Which one is **not**?
- Most people live in towns
 - Families have few children
 - Most people live in rural areas
 - People have high standards of living
23. The following were founder members of the Kikuyu Central Association **except**
- James Beauttah
 - Joseph Kang'ethe
 - Jessie Kariuki
 - James Gichuru
24. Three of the following methods of traditional weather observation methods indicate the end of a rainy season. Which one does **not**?
- Appearance of locusts
 - Shedding of leaves by plants
 - Smell of moist in the air
 - Clear cloudless skies
25. Three of the following are responsibilities of persons with special needs. Which one is **not**?
- Respecting other people's rights
 - Conserving the environment
 - Obeying the laws of the country
 - Making their own laws to protect them
26. Kabaka Mwanga resisted European colonial rule in Uganda because
- he wanted his people to remain independent
 - the British were building a railway line
 - the British took away Baganda cattle
 - the British stopped Baganda from trading

27. Ox-bow lakes are formed through
- deposition
 - downwarping
 - faulting
 - lava damming
28. HIV and AIDS infection in Kenya has **mainly** led to
- decrease in population
 - decrease in life-expectancy
 - strain on health facilities
 - reduction of labour in industries

29. People who make up an age group in traditional African communities are
- related by blood
 - initiated around the same time
 - descendants of a common ancestor
 - members of the same clan

30. The diagram below shows a weather instrument



The weather instrument shown above is used to measure

- speed of wind
 - type of wind
 - direction of wind
 - strength of wind
31. A Kenyan Citizen by registration can lose citizenship if the person
- is arrested by the police
 - vies for an elective seat
 - is found to be of unsound mind
 - is found to have presented false documents

32. Which one of the following dams is **correctly** matched with the river where it is built?

Dam	River
A. Akosombo	- Volta
B. Kariba	- Tana
C. Kamburu	- Nile
D. Aswan	- Zambezi

33. Below are descriptions of an early visitor to Eastern Africa

(i) *He was sent by the Royal Geographical Society*

(ii) *He discovered the source of River Nile*

(iii) *He sailed along River Nile*

The person described above is

- A. Henry Morton Stanley
- B. John Speke
- C. David Livingstone
- D. Ludwig Krapf

34. The government encourages people to live in peace **mainly** to

- A. make the population increase
- B. reduce congestion in jails
- C. conserve the environment
- D. enable them to get services

35. A **similarity** between fishing in both Kenya and Japan is that

- A. most of the fish come from inland fishing grounds
- B. all the fish caught are exported
- C. some fish are reared in fish farms
- D. fishing is the main foreign exchange earner

36. Below are descriptions of a mountain in Africa

(i) *It formed when land between faults was uplifted*

(ii) *It is on the boarder of two countries*

(iii) *It has snow at the peak*

The mountain described above is

- A. Mount Kilimanjaro
- B. Mount Elgon
- C. Mount Ruwenzori
- D. Atlas mountains

37. Which one of the following statements about maize farming in both Kenya and Tanzania is correct?

- A. It is only grown under irrigation
- B. It is mainly grown for feeding animals
- C. It is grown in both large and small farms
- D. It is mainly grown for export

38. Which one of the following is a negative effect of deforestation?

- A. Increase of land under cultivation
- B. Carrying away of top soil
- C. Creation of settlements in forests
- D. Establishment of paper making industries

39. Who among the following hominid creatures discovered fire during the evolution of human beings?

- A. Homo Erectus
- B. Homo Habilis
- C. Homo Sapiens
- D. Homo Sapiens Sapiens

40. Which one of the following was the **main** role played by early political associations in Kenya before the second world war?

- A. They demanded for fair treatment of Africans
- B. They fought against destocking
- C. They demanded separate schools for Africans
- D. They wanted arrested African leaders to be released

41. Three of the following are roles of the government in promoting trade. Which one is **not**?

- A. Establishing open air markets
- B. Issuing trading licences
- C. Imposing taxes on imported goods
- D. Banning trade unions

42. The effect of Westerly winds in the Cape region of South Africa is that they
- cause fog and mist
 - bring winter rainfall in the region
 - raise temperatures in the region
 - cause dry effects
43. Kenyan citizens promote patriotism when they
- sing the National Anthem
 - go to live in foreign countries
 - migrate to live in towns
 - work to earn a living
44. Which one of the following is **not** a symbol of National unity?
- Public seal
 - National flag
 - Kenyan currency
 - Coat of Arms
45. Which one of the following groups of countries is made up of members of the Commonwealth?
- Angola, Morocco, Senegal
 - Nigeria, Sierra Leone, Mozambique
 - Madagascar, Egypt, Chad
 - Tunisia, Congo, Cameroon
46. Which one of the following efforts is made by the government to reduce traffic congestion in major urban centres?
- Building roads to bypass the towns
 - Controlling issuing of driving licences
 - Controlling importation of vehicles
 - Increasing the price of fuel
47. Cushitic speaking communities came to settle in Kenya **mainly** in search of
- fertile lands for farming
 - goods for trade
 - pasture for their livestock
 - iron for tool making
48. Below are descriptions of a marriage system
- A marriage certificate is issued
 - It is conducted in a religious center
 - A man can marry more than one wife
- The marriage system described above is
- Christian marriage
 - Islamic marriage
 - Customary marriage
 - Civil marriage
49. The **main** benefit of poultry farming in Kenya is that
- it earns the country foreign exchange
 - roads have been built in farming areas
 - processing industries have been established
 - it provides food and income
50. Waiyaki wa Hinga and Laibon Lenana reacted to the coming of Europeans to Kenya by
- allowing Europeans to settle in their areas
 - waging war against the British
 - signing peace treaties with the British
 - helping in building the Kenya-Uganda railway line
51. Residual mountains are formed through
- faulting
 - deposition
 - volcanicity
 - erosion
52. A problem facing Jua kali industries in the rural areas in Kenya is
- inadequate space
 - lack of skilled labour
 - inadequate supply of electricity
 - lack of raw materials
53. The **best** way of protecting children from abuse is
- arresting people who molest children
 - educating adults on children's right
 - putting up children in boarding schools
 - allowing children to do what they want

54. Which one of the following features is correctly matched with the country it is found?

<u>Feature</u>	<u>Country</u>
A. Cape Ras Hafun	- Somalia
B. Danakil Alps	- Botswana
C. Bie plateau	- Ethiopia
D. Okavango swamp	- Angola

55. Three of the following statements about banana growing in Uganda are true. Which one is not?

- A. They are grown under irrigation
- B. They are grown as staple food
- C. They are grown in small farms
- D. In some farms they are intercropped

56. The main cause of lawlessness during a general election in Kenya is

- A. formation of many political parties
- B. rejection of election results
- C. candidates campaigning in the country
- D. candidates issuing campaigning materials

57. Three of the following are advantages of transporting petroleum products by pipeline. Which one is not?

- A. It reduces the risk of fire
- B. It is fast
- C. It reduces cost of transporting using other means
- D. It spares roads from damage by heavy trucks

58. Three of the following officials are appointed by the president. Which one is not?

- A. Cabinet secretary
- B. Inspector General of police
- C. Speaker of the Senate
- D. Chief justice

59. A lump-sum of money given to a retired government employee is referred to as

- A. pension
- B. grant
- C. loan
- D. gratuity

60. Which one of following duties is performed by the Cabinet in Kenya?

- A. Formulating government policies
- B. Making laws for the country
- C. Supervising general elections
- D. Approving the National budget

SECTION II

CHRISTIAN RELIGIOUS EDUCATION

61. The main lesson that Christians learn from the story of Adam and Eve when they ate the forbidden fruit is that they should

- A. do what is right
- B. repent their sins
- C. take care of the environment
- D. not reveal their feelings

62. Which one of the following was a promise that God made to Noah during the making of their covenant?

- A. 'Your descendants will be slaves in Egypt.'
- B. 'Your own son will be your heir'
- C. 'All animals will live in fear of you'
- D. 'I have decided to put an end to the whole human race'

63. A lesson that a man and woman in marriage learn from the story of Abraham and Sarah is that they should

- A. remain faithful
- B. be patient in marriage
- C. take good care of their children
- D. love one another

64. Joseph demonstrated trust in God while in Egypt when he
 A. gave food to his brothers
 B. refused to have sex with Potiphar's wife
 C. interpreted the king's dreams
 D. stored food during a time of famine
65. The parents of Moses were
 A. Elkanah and Hannah
 B. Jacob and Rachel
 C. Elimelech and Naomi
 D. Amram and Jochebed
66. The eating of bitter herbs by the Israelites symbolized
 A. their hurry to leave Egypt
 B. obedience to God
 C. the days of suffering as slaves
 D. that they were God chosen people
67. King Solomon turned away from God later in his reign when he
 A. allowed his wives to worship idols
 B. forged relations with the foreign kings
 C. decided a case involving a baby
 D. took the wife of Uriah
68. Who among the following prophets was sent by God to condemn King Ahab for taking Naboth's vineyard?
 A. Samuel
 B. Nathan
 C. Elisha
 D. Elijah
69. The old testament prophets were persecuted by the kings mainly because
 A. what they prophesied did not happen
 B. they refused to perform miracles
 C. they prophesied things that did not please the kings
 D. they were popular with the people
70. Zechariah doubted Angel Gabriel's message because
 A. he had no wife
 B. his wife was barren
 C. he was an old man
 D. he was serving the temple
71. King Herod wanted to kill Jesus because
 A. he wanted to continue ruling
 B. Jesus was the expected Messiah
 C. the Jews killed Jesus
 D. Jesus was performing miracles
72. The temptation of Jesus when the devil told him to worship him teaches Christians to
 A. avoid temptations
 B. forgive one another
 C. do the will of God
 D. repent their sins
73. Which one of the following miracles of Jesus shows that he came for all people?
 A. Healing the bleeding woman
 B. Feeding the five thousand people
 C. Miraculous catch of fish
 D. Healing the ten lepers
74. The parable of Jesus that teaches Christians not to value wealth more than God is
 A. the rich young man
 B. the friend at midnight
 C. the unforgiving servant
 D. the shrewd manager
75. The soldiers arrested Jesus while he was
 A. eating the last supper
 B. praying at the Garden of Gethsemane
 C. driving traders from the temple
 D. on the road to Emmaus
76. Jesus forgave one of the thieves crucified with him because
 A. Jesus knew the thief
 B. the thief was repentant
 C. the thief was innocent
 D. Jesus had power to forgive sins

77. Jesus told his disciples to go back to Jerusalem before he ascended to heaven to
- preach in the temple
 - give food to widows
 - heal the sick
 - wait for the coming of the Holy spirit
78. The early believers showed acts of kindness when they
- placed their hands on new converts
 - preached to the Gentiles
 - distributed food to widows
 - met together to pray
79. Ananias and Sapphira were punished by God because they
- lied to the disciples
 - sold their property
 - kept all of the money they got
 - committed adultery
80. Paul advises husbands to love their wives just as
- they love themselves
 - their wives love them
 - they love their enemies
 - Christ loved the church
81. Which one of the following is a book history in the New Testament of the bible?
- Revelation
 - Acts
 - Mark
 - John
82. Which one the following practices in birth ceremonies is common in both Christianity and traditional African communities?
- Baptizing a baby
 - Wearing charms
 - Presentation of gifts
 - Performing libations
83. The main reason for giving a child a name in traditional African communities is to
- give the child identity
 - please the ancestors
 - protect the child from harm
 - accept the child in the community
84. Which one of the following is a moral value in traditional African communities?
- Bravery
 - Wealth
 - Pride
 - Honesty
85. People in some traditional African communities show that some mountains are God's dwelling place by
- burying ancestors on the slopes
 - giving the mountains names
 - praying while facing the mountains
 - settling on the slopes
86. Christians can best use their wealth by
- visiting places of interest
 - keeping their money in banks
 - holding birthday parties
 - supporting the poor
87. Thomas was given extra money as change in a shop. He returned the extra money. This shows that he is
- humble
 - honest
 - patient
 - courageous
88. Pupils demonstrate obedience to lawful authority in school when they
- sweep their classrooms
 - play together
 - share food with their friends
 - pray at school assembly
89. Christians condemn sexual misuse because
- it affects people's health
 - it causes breakup of families
 - it defiles the body as the temple of God
 - it makes people to be disrespected
90. Christians take part in communal work when they
- worship together in church
 - share meals in their homes
 - read the scriptures
 - clean the streets

SECTION II

ISLAMIC RELIGIOUS EDUCATION

61. Which one of the following surahs wants man to worship and sacrifice to Allah(S.W)?
 A. Fiil B. Takathur
 C. Kauthar D. Maun
62. Which attribute of Allah (S.W) is mentioned in surah At-Tiin?
 A. Al- Razzaq B. Al - Hakim
 C. Al -Wahhab D. Al - Malik
63. Which one of the following is a verse from surah Al-Ikhlās?
 A. "La-aabudu maa taabuduum."
 B. "Qul -yaa ayuhali kaafirun."
 C. "wala-aama aabidum maa abadtum."
 D. "Say, He is Allah the one."
64. Who among the following angels is mentioned in surah Al-Qadr?
 A. Jibril B. Mikail
 C. Izrail D. Israfil
65. Which one of the following is a lesson learnt from Surah Al - Asr?
 A. Muslims should worship one God
 B. Muslims should be patient in life
 C. Muslims should not neglect prayers
 D. Muslims should be kind to orphans
66. Which one of the following is **incorrect** concerning greetings in Islam?
 A. The young should greet the old
 B. The sitting to greet the standing
 C. The old should greet the young
 D. The descending to greet the ascending
67. During which occasion is a Muslim recommended to perform wudhu?
 A. When going to school
 B. When visiting the sick
 C. Before putting in a new dress
 D. Before going to bed
68. The act of running between the two hills of Swafa and Marwa during hajj is referred to as
 A. Sa'ay B. Tawaaf
 C. Ihram D. Arafat
69. Which one of the following animals is haram for muslims?
 A. Cow B. Pig
 C. Gazelle D. Buffalo
70. Which one of the following is not a nullifier of Saum?
 A. Eating intentionally
 B. Sexual intercourse
 C. Deliberate vomiting
 D. Swimming
71. Malik was performing salat when he suddenly broke wind. What was the right thing for him to do?
 A. Continue praying as if nothing has happened
 B. Ask for Allah's forgiveness
 C. Stop praying and perform wudhu
 D. Consider the prayer complete
72. Which one of the following pillars of hajj reminds Muslims on the events of the day of judgement?
 A. Arafat B. Tawaaf
 C. Ihram D. Sa'ay
73. The prophet's mosque was never used as a
 A. learning centre
 B. charity distribution centre
 C. business centre
 D. nursing home
74. Musa a standard eight pupil wanted to snatch food from a standard four pupil but stopped on remembering a certain teaching in Islam. This was a teaching on
 A. Taqwa B. Ihsaan
 C. Tawakkul D. Iman
75. Which one of the following is **not** an attribute of the prophets of Allah(SW)?
 A. Kind B. Ihsan
 C. Taqwa D. Iman

76. The fear of Allah is referred to as
 A. *taqwa* B. *ihsan*
 C. *taqwa* D. *iman*
77. Which one of the following is the **main** reason why gambling is haram in Islam?
 A. *It is a command of Allah*
 B. *It is a waste of money*
 C. *It is a waste of time*
 D. *It leads to family breakups*
78. Mariam's friend has been diagnosed with the virus that causes AIDS. What cause of action should Mariam take?
 A. *Stop their friendship*
 B. *Ask her to stop schooling*
 C. *Inform all her friendship*
 D. *Encourage her to go to guidance and counselling*
79. The act of wasting the wealth and general extravagance is referred to as
 A. *Israaf* B. *Ghush*
 C. *Istikhara* D. *Usury*
80. Which one of the following months is Ash-hurul-hurum?
 A. *Ramadhan* B. *Rajab*
 C. *Dzul-Qaada* D. *Safar*
81. Which one of the following is **not** a sunnah fast?
 A. *Ayyamul baidh*
 B. *Yaumul Arafat*
 C. *Isra-wal-miraj*
 D. *Sitat-un-shawwal*
82. Which one of the following business practices is allowed in Islam?
 A. *Charging interest*
 B. *Weighing accurately*
 C. *Mixing good and bad quality goods*
 D. *Selling expired goods*
83. A person who has the habit of lying and betraying trust is referred to as
 A. *mutaqin* B. *muhsimum*
 C. *kafir* D. *munafiq*
84. How many rights does a non-muslim neighbour have?
 A. *One* B. *Three*
 C. *Two* D. *Four*
85. How many sons did prophet Muhammad (SAW) have?
 A. *Four* B. *Three*
 C. *Seven* D. *Six*
86. During which occasion did the prophet (S.A.W) emphasize on Islamic brotherhood?
 A. *Isra-wal-miraj*
 B. *Conquest of Makkah*
 C. *Sul-hul-Hudaibiya*
 D. *Hijjat-ul-widaa*
87. How many Quraish died during battle of Badr?
 A. *313* B. *14*
 C. *70* D. *400*
88. Who were the allies of the Quraish during the treaty of Hudaibiyah?
 A. *Banu Bakr*
 B. *Banu Thaqif*
 C. *Banu Khuza'a*
 D. *Banu Saad*
89. Who among the following was the king during the reign of prophet Ibrahim (A.S)?
 A. *Firaun*
 B. *Qaarun*
 C. *Jahut*
 D. *Namrud*
90. Who among the following prophets was born miraculously without a father?
 A. *Musa* B. *Issa*
 C. *Harun* D. *Ibrahim*