


PART I

1. The diagram below shows an imaginative composition of three overlapped forms.




Which method has been used to shade the above diagram?

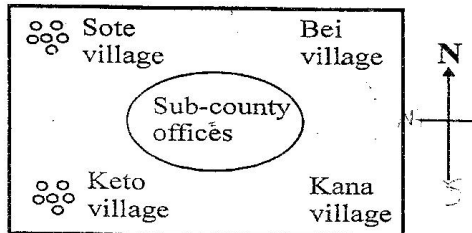
- A. smudge technique B. Montage technique
C. Collage technique D. Stipping technique
2. What is the meaning of the term "painting" in art?
A. the pasting of pictures on a flat surface
B. a line that encloses a piece of art
C. the application of colour on a surface
D. the art of decorating items
3. Grade 6 learners were asked to name three locally available materials that can be used for painting. Which one of the following is not correct?
A. sisal fibres B. pin
C. charcoal D. chewed stick
4. Which one of the following terms refers to the lightness or darkness of a colour?
A. harmony B. tone C. density D. pitch
5. Which one of these is not an aspect of crafts-manship in art and craft?
A. neat application of adhesives
B. neat cutting
C. overlapping of cut out forms
D. lack of balance of forms
6. Which of the following are techniques used in basketry?
A. stitch and plait B. coil and round
C. round and plain D. coil and stitch
7. Three of the following are locally available natural and man-made materials that can be used for weaving a floor mat except?
A. sisal fibres B. grass
C. pieces of wood D. bamboo
8. Which one of the following is not a tertiary colour?
A. Violet B. Red-orange
C. Blue-violet D. Red-violet
9. We get _____ from the hides and skins of animals.
A. fibre B. cotton C. linen D. leather
10. Which of the following is not a type of puppet?
A. Finger puppets B. Leg puppets

- C. Glove puppets D. Hand puppets
11. How can you demonstrate the mood of a song when singing?
A. by frowning openly
B. by using facial expressions
C. by not keeping eye contact
D. by singing loudly
12. Which one of the following is not social-economic importance of songs?
A. they educate people
B. they abuse people
C. they entertain people
D. they encourage people to work
13. Singing in twos is called _____ while singing in threes is called _____
A. choral, trio B. trio, duo
C. solo, duo D. duo, trio
14. The following are occasions during which Kenyan communities sing folk songs except?
A. during courtship and marriage
B. during harvest and rain
C. during field work
D. during birthday parties
15. What are stringed instruments?
A. instruments that produce sound when is blown
B. instruments that produce sound by vibration of stretched strings
C. instruments that are shaken to produce sound
D. instrument that have no strings
16. Which one of the following is not a part of a descant recorder?
A. the head joint B. the body joint
C. the side joint D. the foot joint
17. What is "melody" in music?
A. the succession of pitches in rhythm
B. the speed of piece of music
C. the pattern of sound in time and beats in music
D. the highness or loudness of sound
18. Which one of the following is not a component of a folk dance?
A. turning B. hopping
C. throwing D. skipping

Use the diagram below to answer questions.



19. What is the name of the above musical instrument?
 A. Emborogo B. Abu
 C. Nzumari D. Maturiru
20. Which of the following Kenyan communities plays the musical instrument above?
 A. Luo B. Agiriana C. Abaluhya D. Agikuyu
21. The diagram below shows the positions of four villages in a certain sub-county.



- What is the direction of Kana village from Sote village?
 A. South West B. South East
 C. North East D. North West
22. Which is the largest country and the smallest country in Eastern Africa respectively?
 A. Ethiopia, Eritrea B. Tanzania, Djibouti
 C. Kenya, Uganda D. Sudan, Djibouti
23. What is latitude?
 A. Imaginary lines that run from the North pole to the South pole
 B. Imaginary lines that are found near the hemispheres
 C. Imaginary lines that run from East to West around the Earth
 D. Imaginary lines that are used to tell the time
24. Which one of the following consists of a pair of volcanic mountains in Eastern Africa?
 A. Mt. Ruwenzori, Mt. Kenya
 B. Mt. Longonot, Mt. Pare
 C. Mt. Kilimanjaro, Mt. Pare
 D. Mt. Meru, Mt. Kenya
25. The largest valley in Eastern Africa is the _____
 A. The Nile valley B. The Great Rift valley
 C. The Kerio valley D. Suguta valley
26. The following are characteristics of a climatic region in Eastern Africa.
 - It's hot and wet
 - Temperature are high throughout the year
 - Rainfall averages 1800mm -2000mm per year
 The region described above is _____
 A. Semi-desert B. Equatorial
 C. Mountain D. Mediterranean

27. Identify the types of vegetation mainly found along the East African coast.
 A. Forest B. Mangrove
 C. Swamp D. Papyrus
28. Which one of the following is not a historic building in Kenya?
 A. Fort Jesus
 B. Bomas of Kenya
 C. National museum
 D. State house
29. A grade 6 teacher asked his pupils to define the term "culture". Who among the following was correct?
 A. Carol : type of foods eaten by people
 B. Botek : the people's way of life
 C. Susan : the way of people's dressing
 D. Kemei : the dances and songs played by people
30. During a group discussion, grade 6 learners classified different Kenyan communities into different groups. Which group consists of Cushitic speakers only?
 A. Oromo, Boni, Sebei
 B. Borana, Gabbra, Buji
 C. Saboat, Tugen, Bangomek
 D. Samburu, Maasai, Turkana
31. Which one of the following is not a factors influencing population distribution in Eastern Africa?
 A. Religion B. Rainfall distribution
 C. Soil D. Relief
32. Which one of the following statements is true about age-groups?
 A. consists of people who were born around the same time
 B. members of the same age group cannot marry
 C. members of the same age group cannot be initiated together
 D. members of an age group belong to the same clan
33. Which of the following is not a function of a clan in the society?
 A. providing the members with a sense of belonging
 B. settling disputes between the clan members
 C. giving wealth to the rich families only
 D. helping each other during times of need
34. Schools in Kenya can collaborate with the community in all the following ways except?
 A. Providing resource persons to teach the learners in the school
 B. Providing land to expand the school infrastructure
 C. Quarreling between the school members the community members
 D. Teaching the learners to be responsible citizens

35. African traditional education was effected through different ways. Which method is illustrated in the picture below?



- A. Apprenticeship B. Reading
C. Story telling D. Initiation

PART II

CHRISTIAN RELIGIOUS EDUCATION

36. Grade five learners were asked to name the God's commandment that has a promise. Which answer was correct?
A. obeying the Sabbath and keep it holy
B. obeying your mother and father
C. do not commit murder
D. do not commit adultery
37. Which one of the following is a Christian way through which learners use their talents and abilities?
A. serving God and others
B. showing off to others
C. making money from them
D. being proud of ourselves
38. Which one of the following groups shows the first three books of the New Testament?
A. Mark, Luke, John B. Matthew, Mark, Luke
C. John, Acts, Peter D. Genesis, Exodus, Luke
39. What is the main reason why Christians are discouraging drug abuse in the society?
A. it leads to school drop-outs
B. it leads to wastage of money
C. it leads to poor health
D. it leads to lack of friends
40. A grade six CRE teacher asked his pupils about who wrote the Bible. Which one of the following was a correct response?
A. People inspired by the Holy Spirit
B. People who foretold the future
C. People who were famous

- D. People who had great faith
41. Which one of the following is the best way Christians can do to discourage early marriages in the society?
A. ensuring that all children in the society attend school
B. giving children punishment to people who abuse them
C. teaching children on their rights
D. educating people on the need to uphold Christian values
42. Grade six pupils were asked by their teacher the best way they would spend their leisure time during school holidays. Which of these is the best response?
A. visiting friends B. helping the elderly
C. listening to music D. practising in the choir
43. Which of the following values can Christians achieve from the ten commandments?
A. obedience, hatred B. anger, holiness
C. honesty, respect D. self-control, dislike
44. The blind man who was healed by Jesus was called?
A. Bartermaeus B. Matthew
C. Barthlomew D. Peter
45. In Judges 15:14-17, God helped on of the following people to defeat his enemies. Who was he?
A. David B. Job C. Sarnuel D. Solomon
46. Who among the following prophets recovered an axe-head as a sign of his faith in God.
A. Isaiah B. Elisha C. Jeremiah D. Elijah
47. Who among the following people in the Bible wrested with an angel of God?
A. Joseph B. Jacob C. Abraham D. Esau
48. What should Christians do to overcome temptations?
A. ask God many questions
B. trust and wait upon the Lord
C. give up easily in life
D. run away from everybody
49. Which one of the following is not a problem that might arise from irresponsible boy-girl relationship?
A. dropping out of school
B. good future life
C. unwanted or early pregnancies
D. acquiring irresponsible behaviour
50. Grace your friend likes talking when the pastor is preaching in church. Which one of the following is the best advice you would give her?
A. Tell her to avoid going to church
B. Tell her to sleep instead of talking
C. Tell here to play outside the church
D. Tell her to respect the word of God