

COMPETENCE BASED CURRICULUM

D003

MONITORING LEARNER'S PROGRESS

GRADE 4 - YEAR 2022

4

SOCIAL STUDIES / RELIGIOUS ACTIVITIES

Learner's Name:

Learner's Number :

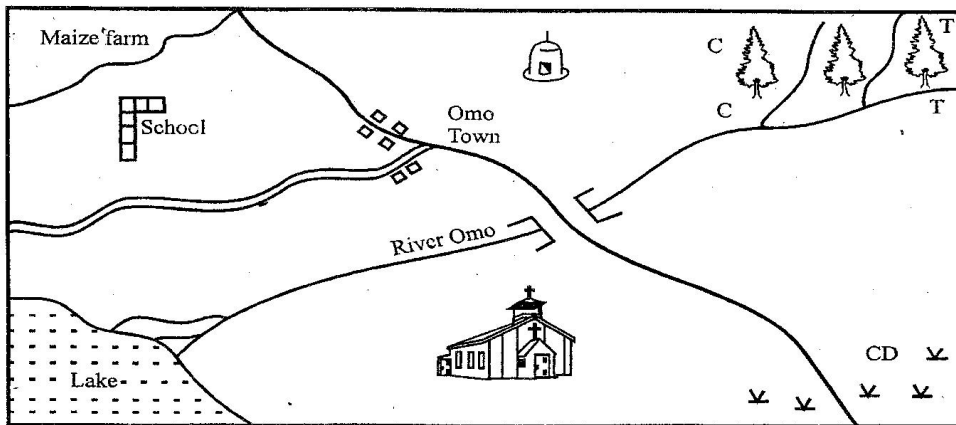
Gender: Boy Girl (tick)

School's Name:

TEACHER'S SCORING GUIDE

Exceeds Exp	Meets Exp	Approaches Exp	Below Exp

OMO AREA



Scale 0 2 4 6 8 10 12 14 16 Km

KEY

Forest	River and bridge	School
CC - Coffee	TT-Tea	Church
Grass	C.D - Cattle dip	Mosque

Study the map of Omo area and use it to answer questions 1-6 (5mks)

1. River Omo drains into _____
2. The two main religions found in Omo area are
(i) _____
(ii) _____
3. The main form of transport in Omo area is _____
4. Name one cash crop grown in Omo area _____
5. What is the direction of the maize farm from the cattle dip? _____
6. The smallest county in Kenya is known as _____ (1mk)
7. List three benefits of physical features in your county. (3mks)
(a) _____
(b) _____
(c) _____
8. List down two seasons that are experienced in your county. (2mks)
(a) _____
(b) _____
9. State two traditional crops grown in your county. (2mks)
(a) _____

(b) _____

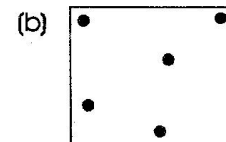
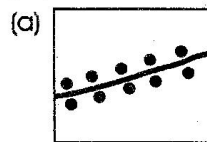
- 10 Draw and colour any historic built environment found in your county. (2mks)

11. Write down three ways of caring for historic built environments. (3mks)
(a) _____
(b) _____
(c) _____


12. Name two ways in which the families can depend on each other. (2mks)
(a) _____
(b) _____

13. Name two tribes that have inhabited your county. (3mks)
(a) _____
(b) _____

14. Identify the following patterns of population distribution. (3mks)



(c)



15. Identify two aspects of traditional culture in your community. (2mks)

- (a) _____
(b) _____

CHRISTIAN RELIGIOUS EDUCATION

1. I am created in the _____ of God. (1mk)
(face, image)

2. Name three things that make you unique. (3mks)

- (a) _____
(b) _____
(c) _____

3. Write down three good thoughts. (3mks)

- (a) _____
(b) _____
(c) _____

4. Draw and colour the Holy Book. (2mks)

5. Write down three good choices you can make. (3mks)

- (a) _____
(b) _____
(c) _____

6. Name three members of a nuclear family (3mks)

- (a) _____
(b) _____
(c) _____

7. Ephesians 6:1-2. "Children it is your Christian duty to _____ your parents, for this is the right thing to do" (1mk)

8. Amnon and Tamar were children of _____ (1mk)

9. List three people you can report to incase someone touches you inappropriately or abuses you sexually. (3mks)

- (a) _____
(b) _____
(c) _____

ISLAMIC RELIGIOUS EDUCATION

1. Match the words with their meaning as found in surah Al-fatiha. (3mks)
- a) Umuul Quran - seven repeated verses
 - b) Sabaul mathani - the opening
 - c) Al-fatiha - mother of Quran
2. Write one lesson a Muslim can learn from surah Al-Ikhlās (1mk)
- _____
3. State any three postures of swalah. (3mks)
- (a) _____
 - (b) _____
 - (c) _____
4. Name two angels of Allah who are called "Kiraman katibin" (2mks)
- (a) _____
 - (b) _____
5. The prophet said "I have been sent for the purpose of perfecting good morals. State any three examples of good morals. (3mks)
- (a) _____
 - (b) _____
 - (c) _____

6. Arrange the words in the list below in the correct box. (4mks)
- urine, saliva, tears, sweat, mud, wet dog, blood, vomit
- | <u>Najis</u> | <u>Not Najis</u> |
|--------------|------------------|
| a) _____ | _____ |
| b) _____ | _____ |
| c) _____ | _____ |
| d) _____ | _____ |
7. Write TRUE or FALSE (3mks)
- a) Wudhu removes our bad deed and minor sins _____
 - b) Adhan is a posture of swalat _____
 - c) There are five daily prayers _____
8. The sunset faradh prayer is _____ (1mk)
9. Name any three characteristics of angels of Allah. (3mks)
- a) _____
 - b) _____
 - c) _____
10. How many times are we advised to wash a plate licked by a dog? (1mk)
- _____
11. Muslims go to Makkah for Hajj in the month of _____ (1mk)