

COMPETENCE BASED CURRICULUM

D003

MONITORING LEARNER'S PROGRESS

GRADE 4 - YEAR 2022

[4]

ART & CRAFT AND MUSIC

Learner's Name:

Learner's Number :

Gender: Boy Girl (tick)

School's Name:

TEACHER'S SCORING GUIDE

Exceeds Exp	Meets Exp	Approaches Exp	Below Exp

ART AND CRAFT

1. a) What is drawing? (1mk)

b) Name two types of paper used in drawing. (2mks)

(a) _____
(b) _____

2. The materials below are used in smudging. Name them. (3mks)

(i)



(ii)



(iii)



3. Name two materials required in painting. (2mks)

(a) _____
(b) _____


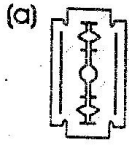
4. List four still-life objects found at home. (4mks)


(a) _____
(b) _____
(c) _____
(d) _____

5. The process of adding different coloured paints to create a picture or to make a decoration is known as _____ (1mk)

6. Adding too much black on another colour when toying can make the whole colour very _____ (1mk)

7. We can use the tools below in cutting and pasting pictures on manilapapers. Name them. (4mks)





8. Name two places we can get pictures when making montage. (2mks)

- (a) _____
 (b) _____

9. Name three plants within your locality that give us fibres for weaving. (3mks)

- (a) _____
 (b) _____
 (c) _____

10. List four items we can make by weaving. (4mks)

- (a) _____
 (b) _____
 (c) _____
 (d) _____

11. Name two ways of decorating clay items. (2mks)

- (a) _____
 (b) _____

MUSIC

1. Name four types of songs. (4mks)

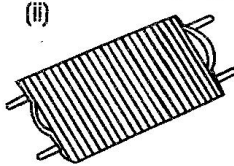

- (a) _____
 (b) _____
 (c) _____
 (d) _____


2. A person who sings and is answered by a group of people is called a _____ (1mk)

3. Name three instruments played with folk songs. (3mks)

- (a) _____
 (b) _____
 (c) _____

4. (a) Name the Kenyan traditional music instruments given below. (3mks)





(b) Write how the instruments above are played. (3mks)

- (i) _____
 (ii) _____
 (ii) _____

5. Give three ways you can ensure safety when performing a folk song. (3mks)

- (a) _____
 (b) _____
 (c) _____

6. List two elements of dance. (2mks)

- (a) _____
 (b) _____

7. Name two dance patterns that are commonly used during dances. (2mks)

- (a) _____
 (b) _____