

SCHOOL BASED EVALUATION TEST

D003

STD. 8 YEAR 2022

[8]

SOCIAL STUDIES/ R.E.

Time: 2Hrs. 15mins.

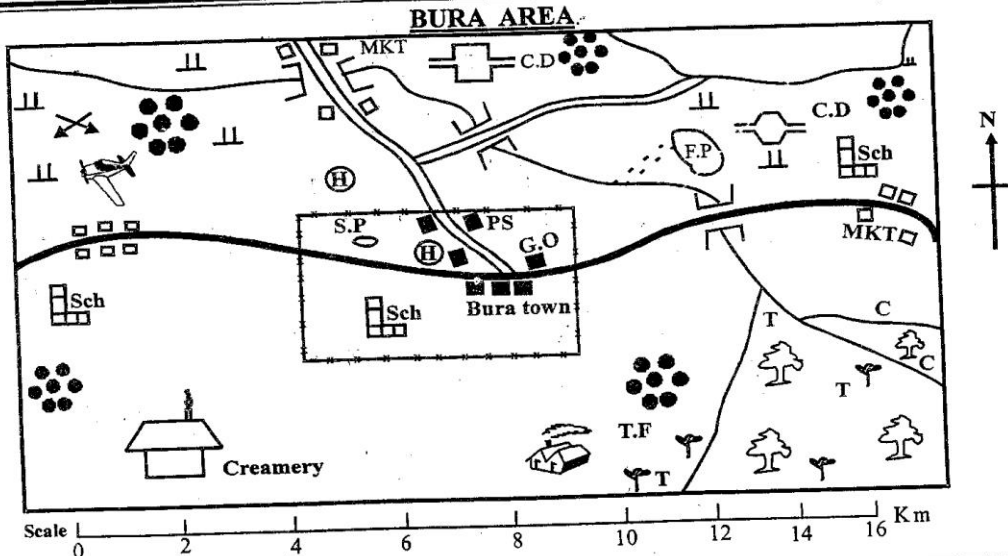
READ THESE INSTRUCTIONS CAREFULLY.

1. You have been given this question paper and a separate answer sheet. The question paper contains 90 questions.
2. Do any necessary rough work in this booklet.
3. Use only an ordinary pencil.

1. YOUR NAME _____

2. NAME OF YOUR SCHOOL _____

3. YOUR INDEX NUMBER _____



KEY

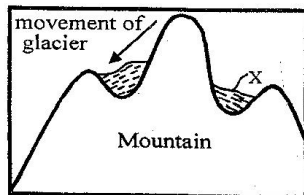
	Forest		Houses		River and bridge		MKT - Market
	Tarmac road		G.O Governors Office		Murrum road		F.P Fish pond
	Tea		Scrubs		T.F Tea factory		N.P National park
	Airstrip		Church		P.S Police station		H Hospital
			Quarry		S.P - Swimming pool		C.D Cattle dip
					Sch		School

Study the map of Bura Area and use it to answer questions 1-7.

1. The land in Bura area rises towards
 - A. North West
 - B. South East
 - C. North East
 - D. South West
2. The climate experienced at the South Eastern part of Bura area is likely to be _____
 - A. cool and dry
 - B. hot and dry
 - C. hot and wet
 - D. cool and wet
3. Which one of the following types of industries is found at the South Western part of Bura area?
 - A. Processing industry
 - B. Manufacturing industry
 - C. Assembling industry
 - D. Service industry
4. Three of the following services are provided in Bura town except?
 - A. recreational services
 - B. transport services
 - C. health services
 - D. religious services
5. The following economic activities are practised at the _____

- Northern part of Bura area. Which one is not?
- A. Livestock keeping B. Fishing
C. Cash crop growing D. Mining
6. The settlement pattern in Bura area has mainly been influenced by
A. road transport B. presence of security
C. economic activities D. availability of water
7. Bura area is likely to be administered by a _____
A. Governor B. County Commissioner
C. Senator D. Chief
8. The following are characteristics of a certain climatic region in Africa;
(i) It lies between latitudes 5°N and 5°S
(ii) Temperatures are high throughout the year
(iii) It borders the Savannah climatic region
(iv) The diurnal range of temperature is below 5°C
The climatic region described above is _____
A. Mediterranean climate
B. Equatorial climate
C. Warm temperate climate
D. Mountain climate
9. Which one of the following groups of people comprise of Afro-Asiatic speakers only?
A. Susu, Bambara, Malinke
B. Hausa, Tuaregs, Andarawa
C. Tukolor, Wolof, Fulani
D. Akyem, Fanti, Shanti
10. The family is an important unit in the society mainly because _____?
A. it gives members a sense of belonging
B. it settles disputes among the community members
C. it is the link between the society and the ancestors
D. it ensures the continuity of the society
11. Which one of the following hominids invented fire?
A. Homo Sapiens B. Homo Habilis
C. Ramapithecus D. Homo Erectus
12. Below are traditional weather observation methods. Which one was not associated with the onset of the rains?
A. Formation of dark clouds
B. Croaking of frogs
C. Trees shedding their leaves
D. Excitement of cattle
13. Which one of the following is the main contribution of traditional artifacts to the economy of Kenya?
A. helps preserve our culture
B. they are source of revenue to the government
C. they promote industrialization
D. they promote national unity

Use the physical feature shown below to answer questions 14 and 15.



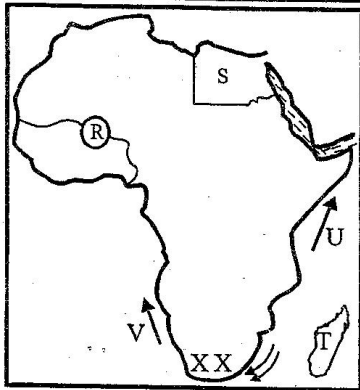
14. The process involved in the formation of the feature marked X is known as _____

- A. erosion B. deposition
C. lava damming D. volcanicity
15. Which one of the following lakes is not an example of the above feature?
A. L. Teleki B. L. Catherine
C. L. Tana D. L. Speke
16. Which one of the following statements is true about the political organization of the San people?
A. The chief was assisted to govern by a powerful group of clan elders
B. The leadership was hereditary
C. They had a decentralized system of government
D. They regarded the praying mantis as sacred and a sign of good fortunes
17. What is the main reason why the Organization of African Unity (OAU) was changed to African Union (AU) in 2002?
A. The African leaders had different political ideologies
B. The OAU had achieved most of its objectives and had become irrelevant
C. The OAU had failed to promote security in the region
D. The OAU did not get support from European nations
18. Who among the following African leaders did **not** lead his community to fight against the British in Africa?
A. Koitalel arap Samoei B. Mekatilili wa Menza
C. Mukite wa Nameme D. Kabaka Mutesa I
19. Three of the following are effects of the revolution of the earth. Which one is **not**?
A. Differences in length of day and night
B. Changing in position of the mid day sun
C. The four seasons
D. Differences in time along different longitudes
20. Three of the following are factors promoting national unity. Which one is **not**?
A. National language B. National flag
C. Constitution D. National curriculum of education
21. Which one of the following is the **main** role of the school management committee?
A. Recruiting support staff
B. Admitting new pupils in school
C. Planning for physical development in school
D. Maintaining the traditions of the school
22. Which one of the following nations comprises of the former colonies of Portuguese?
A. Angola, Mozambique, Cape Verde
B. Eritrea, Libya, Somalia
C. Nigeria, Ghana, Uganda
D. Cameroon, Togo, Tanganyika
23. Three of the following are objectives of the Inter-Governmental Authority on Development. Which one is **not**?
A. To increase the volume of trade in the region
B. To promote security in the region
C. To eradicate poverty in the region
D. To promote food security
24. The following are ways of demonstrating patriotism. Which one is **not**?
A. Paying taxes to the government
B. Participating in electoral multi-practices
C. Keeping the secrets of your country
D. Paying taxes to the government

25. The following statements are true about members of an age-group. Which one is not?
 A. They come from the same clan
 B. They were initiated together
 C. They became warriors together
 D. They married almost at the same time
26. The Nile Valley is densely populated mainly due to ____
 A. high trading activities in the area
 B. availability of water for farming
 C. presence of many urban centres
 D. heavy and reliable rainfall
27. Below are statements about a certain mineral mined in Africa:
 It is mined using both shaft and open cast methods
 Huge machines and excavators are used to remove the rock
 It is used in making cans, electric cables and motor vehicle parts
 The mineral described above is _____
 A. Gold B. Fluorspar C. Oil D. Copper
28. Which one of the following is a similarity between the systems of government of Kenya and Swaziland?
 A. General elections are held after every five years
 B. The heads of states are the commanders-in-chief of the armed forces
 C. Members of the parliament in both countries are appointed the heads of states
 D. The heads of state rule for a maximum of ten years
29. Which one of the following is not a collective responsibility of Kenyans?
 A. smuggling goods into the country
 B. Fighting corruption in the society
 C. Developing social facilities in the community
 D. Taking part in environmental conservation
30. Which of the following pre-historic sites is wrongly matched with the country its found in?

Pre-historic site	Country
A. Koobi Fora	Kenya
B. Isimilia	Tanzania
C. Dire Dawa	Eritrea
D. Merowe	Sudan

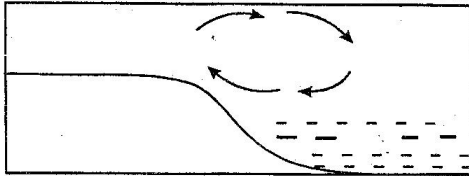
Use the map of Africa below to answer questions 31-34



31. Which of the following countries colonized the island marked T?
 A. Germany B. France C. Italy D. Portugal
32. Which one of the following statements is true about the country marked S?
 A. Sandy beaches are the main tourist attraction in the country
 B. The head of state in the country is the king
 C. It is the most populated country in Africa
 D. It is the first country to get independence in Africa
33. The kingdom that was situated at the area marked R was founded by the _____
 A. Zulu people B. Ndebele people
 C. Soninke people D. Lozi people
34. The ocean currents marked U and V respectively are known as _____
 A. warm Somali and cold Benguella
 B. warm Agulhas and cold Canary
 C. cold Somali and warm Benguella
 D. Warm Guinea and warm Somali
35. The following are positive effects of white settler farmer in Kenya. Which one is not?
 A. Creation of African native reserves
 B. introduction of new methods of farming
 C. Growth of urban centres
 D. introduction of new breeds of cattle
36. Which one of the following is the best way of curbing rural-urban migration?
 A. Providing business loans to the unemployed in urban centres
 B. Forcing idlers in urban centres to go back home
 C. Arresting those who are not employed in urban centres
 D. Decentralizing industries in rural areas
37. The main reason for the scramble and partition of Africa was _____
 A. settle excess population in Africa
 B. the need to exploit resources in Africa
 C. to spread Christianity in Africa
 D. for prestige reasons
38. Which one of the following tourist destinations are found in Egypt?
 A. Snow-capped mountains, Rift Valley, hot springs
 B. Marrakech town, Majonelle Garden, sandy beaches
 C. Valley of Kings, Great pyramids, Qattara depression
 D. Hot springs, fold mountains, sandy beaches
39. Which one of the following methods of conflict resolution was used to end post election violence in Kenya in 2008?
 A. Arbitration B. Mediation
 C. Enquiry D. Litigation
40. Three of the following urban centres in Africa started and developed as mining centres. Which one did not?
 A. Ndola B. Magadi
 C. Dodoma D. Johannesburg
41. Which one of the following factors has greatly influenced the climate of Somalia and Accra town?
 A. Prevailing winds
 B. Nature of coastline
 C. Distance from the water body
 D. Altitude
42. Which among the following countries is not a member of COMESA?
 A. Zambia B. Egypt C. D.R. Congo D. Lesotho
43. Which one of the following is an importance of respecting human rights?

- A. It leads to selective application of the law
 B. It promotes bad governance
 C. It enables people to get wealth first
 D. It ensures equal and fair treatment for all
44. The system of colonial administration that was applied by the British in Northern Nigeria was _____
 A. Indirect rule B. Assimilation
 C. Direct rule D. Paternalism

Use the diagram below to answer questions 45 and 46.



45. The physical feature above occurs during the _____
 A. day B. dry season
 C. rainy season D. night
46. Three of the following towns experience the above feature **except**?
 A. Kisumu B. Addis Ababa
 C. Kismayu D. Lagos
47. The **best** method of controlling soil erosion where gully erosion has taken place is by _____
 A. planting cover crops B. applying mulch
 C. building porous dams D. use of bench terraces
48. The **main** function of the Independent Electoral and Boundaries Commission (IEBC) is to _____
 A. register voters
 B. announce election winners
 C. create electoral boundaries
 D. conduct and supervise elections
49. Which one of the following rivers supply water to Perkera irrigation scheme?
 A. River Perkera B. River Nyamindi
 C. River Thiaba D. River Nyando
50. The body of the government that formulates its policies is the _____
 A. parliament B. police C. judiciary D. cabinet
51. Leopold Sedar Senghor will be remembered for along time by the people of Senegal for one of the following. Which one?
 A. being the first African to be elected in French chambers
 B. writing poems about African culture
 C. Leading Senegal to independence
 D. Writing the first constitution for Senegal
52. On which day did Kenya become a republic?
 A. 1st June 1963
 B. 12th December 1964
 C. 20th October 1952
 D. 12th December 1963
53. Three of the following are National Philosophies **except**?
 A. African Socialism B. Nyayoism
 C. Harambee Spirit D. Bottom up approach
54. Who among the following is **not** appointed by the president?
 A. Attorney General
 B. Speaker of the National assembly
 C. Cabinet secretary
 D. Chief Justice

55. Three of the following are ways of becoming a Kenyan citizen by registration. Which one is **not**?
 A. A foreigner who marries a Kenyan for 7 years and above
 B. A child adopted by a Kenyan citizen
 C. A child below 8 years whose nationality and parents are not known
 D. A foreigner who has lived in Kenya for seven consecutive years and above.
56. The National Assembly in Kenya consists of the following **except**?
 A. 210 elected members of parliament
 B. 12 nominated members by political parties
 C. 47 women representatives
 D. The Speaker
57. The most senior civil servant in a ministry is the _____
 A. Chief minister B. Principal secretary
 C. Cabinet secretary D. Head of public service
58. Three of the following were founder members of KANU. Who among the them is not?
 A. Ronald Ngala B. Oginga Odinga
 C. James Gichuru D. Tom Mboya
59. Civil cases among the Muslim community are heard in
 A. Juvenile courts B. Martial courts
 C. Industrial courts D. Kadhi courts
60. Which one of the following is **not** an importance of a constitution?
 A. It gives the rights and responsibilities of Kenyans
 B. It gives the citizens a chance to elect the leaders of their own choice
 C. It gives citizens excessive freedom
 D. It promotes peace and unity

CHRISTIAN RELIGIOUS EDUCATION

61. Which one of the following statements from the Genesis stories of creation, shows that human beings are the most special of God's creation?
 A. God created them by a word of mouth
 B. They were given power to control God's creation
 C. They share in God's breath
 D. They were allowed to eat fruits from the tree of life
62. When God called Noah, He wanted to _____
 A. send him to a foreign land
 B. rescue him from the destruction of Sodom
 C. send him to the king of Egypt
 D. save him from death
63. What did Jacob demand from the man whom he wrestled with at Peniel?
 A. Wealth B. Name to be changed
 C. Apology D. Blessings
64. Which one of the following did Moses do while he was living in Jethro's house in Midian?
 A. He killed an Egyptian
 B. He received the ten commandments
 C. He married Zipporah
 D. He spoke to Pharaoh
65. At which place did Samuel anoint David as a king of Israel?
 A. Bethlehem B. Shiloh C. Hebron D. Jerusalem
66. The wisdom of king Solomon was clearly seen when he
 A. judged a difficult case involving two women

- B. married many foreign wives
C. built a temple for the Lord in Jerusalem
D. brought the ark of covenant in Jerusalem
67. Which one of the following events in the life of prophet Elijah shows that God was working through him?
A. When he went to warn king Ahab
B. When he ran all the way from Jezreel
C. When fire came down and burned the sacrifice
D. When he went out into the wilderness
68. Which one of the following old testament books teaches about the new covenant?
A. Isaiah B. Jeremiah C. Micah D. Ezekiel
69. The shepherds went to Bethlehem at the time of the birth of Jesus because;
A. they wanted to see baby Jesus
B. they were escaping from King Herod
C. they went to be registered
D. they wanted to see the parents of Jesus
70. The temptation of Jesus to bow down and worship the devil mainly teaches Christians that _____
A. They should set a good example in society
B. They should avoid being greedy
C. They should be wise
D. They should not acquire material possession
71. The parable of Jesus that teaches people to be good to those who wrong them is the parable of _____
A. the lost sheep B. the weeds
C. the prodigal son D. the unforgiving servants
72. Which statement in the Lord's prayer shows that God is the provider?
A. Thy will be done on earth as it is in heaven
B. Deliver us from evil
C. Give us this day our daily bread
D. Lead us not into temptation
73. Which one of the following happened when Mary greeted her relative, Elizabeth?
A. An angel appeared to Zachariah
B. The baby Elizabeth was carrying jumped with joy
C. The Holy spirit descended in form of a dove
D. Zachariah began to speak
74. The Roman officer's servant was healed by Jesus in
A. Bethany B. Capernaum
C. Jericho D. Bethsaida
75. Which of the following miracles did Jesus perform while in a boat?
A. Calming a violent storm
B. Feeding a large crowd
C. Healing a paralysed man
D. Casting out demons from a man
76. Which one of the following events took place when Jesus prayed at Gethsemane on the night of His arrest?
A. The Holy spirit landed on Him
B. A cloud covered Him
C. An angel come down to Him
D. Moses and Elijah appeared
77. After the resurrection of Jesus, He first appeared to _____
A. Mary Mother of Jesus B. Tabitha
C. Mary Magdalene D. Salome
78. On the day the Holy spirit came, the disciples were _____
A. inside a house in Jerusalem
B. eating the Passover meal
C. on the way to Emmaus
D. fishing in lake Galilee
79. Who among the following early believers was among the seven helpers?
A. Andrew B. John
C. Timothy D. Parmenas
80. Three of the following books of the Bible are Epistles except?
A. Colossians B. Acts
C. Galatians D. Ephesians
81. Ancestors were best remembered in traditional African society by _____
A. naming children after them
B. mentioning them in folk stories
C. inviting them to ceremonies
D. taking care of their graves
82. Which one of the following practices is common in both traditional African society and Christianity?
A. Pouring libation B. Offering prayers
C. Reading the scripture D. Offering animal sacrifice
83. When Christians have self-control, they are able to _____
A. earn an honest living
B. preach the word of God
C. help the poor
D. control their emotions
84. Who among the following specialists was not allowed in the traditional African society?
A. Seers B. Rain makers
C. Medicinemen D. Sorcerers
85. Yohanna was on his way to school when he witnessed mob-justice. As a Christian, what is the best action to take?
A. Walk past the people quickly
B. Try to stop the people from beating up the person
C. Run and report the matter to the police
D. Run and report the matter to the teacher on duty
86. HIV/AIDS cannot be transmitted from one person to another through the _____
A. sharing of syringes B. sharing of toothbrushes
C. sharing of toilet seats D. sharing of razor blades
87. Pauline a std. 8 pupil, was insulted by her classmate. As a Christian, which is the best action for her to take?
A. Forgive her B. Insult her also
C. Refuse to talk to her D. Report to the teacher
88. Christians show respect to the leaders of the country by
A. going to them for advice
B. discussing matters affecting the country with them
C. removing their hats when greeting them
D. standing still when they are passing nearby
89. Which one of the following candidates spent their leisure time well after completing their K.C.P.E examination?
A. Keniz → visited her former classmate
B. Isaac → listened to Christian music
C. Ndekei → visited the sick
D. Shife → read story books
90. To enable Africans spread Christianity, the European missionaries taught them how to _____
A. treat the sick
B. adopt the western way of life
C. use guns
D. read and write

ISLAMIC RELIGIOUS EDUCATION

- Which of the following surah's assured the prophet that Wahy would continue to come to him?
A. Maun B. Dhuha
C. Inshirah D. Kauthar
- The verse of the throne is found in the Holy Quran from surah _____?
A. Baqaara verse 155 B. Baqaara verse 255
C. Yasin verse 255 D. Yasin verse 155
- "WHAT IS THE MATTER WITH IT?" This verse of the Quran tells us about the _____
A. Revelation of the Quran
B. Zakatul Fitr
C. Earthquake
D. Eid celebrations
- The surah in the Quran that talks about man to be at a loss is _____
A. Al-Alaq B. As-Asr
C. An-Nasr D. An-Nas
- Complete the following verse, "Faswalilrabika _____"
A. Abtar B. Akbar C. Kauthar D. Wanihar
- Yunus has had many problems on himself. However, Surah Inshirah tells him that _____
A. Allah is the creator of human beings
B. time heals broken souls
C. after every hardship, there is relief
D. there is not compromise on matters of faith
- The course of Allah befalls both the giver and recipient of a bribe. This hadith talks about _____
A. trade B. corruption C. zakat D. usury
- The prophet said that the world is a cultivation ground of the _____
A. Muslims B. Mumin
C. Hereafter D. Paradise
- Which one is TRUE about saum? It develops _____
A. equality B. generosity
C. self control D. punctuality
- Which attribute of Allah is wrongly matched with its meaning?
A. Al-Musawwir - the designer
B. Al-Baari - the forgiver
C. Al-Qahha - the Almighty
D. Ar-Razzaq - the provider
- The country which used to be known as Abyssinia is currently called _____
A. Ethiopia B. Makkah C. Algeria D. Egypt
- Which one of the following is the best meaning of Tahara?
A. Taking proper ablution
B. What the prophet did
C. What the prophet said
D. A state of ritual purity
- Which one of the following is the correct dua to be recited after receiving gifts from people?
A. Mashaallah B. Jazaakallah
C. Subhanallah D. Inshaallah
- When going home after attending Isha prayer at the mosque, your classmate Musa tells you that he puts on somebody's shoes by mistake. What is the best advice you would give Musa?
A. to sell the shoes and buy new ones
B. to donate the shoes to the poor
C. to take the shoes back to the mosque
D. to keep the shoes to replace his lost ones
- Saum wants to perform an Asr prayer but she is not sure of the time. What advice can you give her?
A. to look at the direction of the sun
B. check the length of the shadow
C. wait for Adhan from the mosque
D. ask from the nearest house
- The night of Qadr occurs in the month of _____
A. Muharram B. Dhul Hijjah
C. Dhur Qaada D. Ramdhan
- Which of the following many not be the same for both Salat Juma and Salat Idd?
A. are prayed on Friday B. have Khutba
C. are Jumaa prayers D. have two rakaat
- Which one of the following intoxicants is referred to as the mother of all evils according to the Islam?
A. cocaine B. alcohol C. opium D. bhng
- Who among the prophets of Allah was referred to as Khalilullah?
A. Yunus B. Nuĥ C. Musa D. Ibrahim
- Mughaladha is a class of _____
A. Swalah B. Kalima C. Najis D. Swaum
- The practise of circumcising baby boys is known as _____
A. Aqqa B. Khitar C. Tahnik D. Eddah
- The following are agents which led to the spread of Islam along the Coastal Kenya except?
A. force B. marriage C. madrassah D. trade
- Who among the following prophets is not correctly matched with his father?
A. Yahya - Zakariya B. Suleiman - Daud
C. Is'haq - Ya'qub D. Ismail - Ibrahim
- During the battle of Uhud, Muslims were defeated mainly because of _____?
A. fear
B. poor weapons
C. reduced number of warriors
D. disobedience
- The posture Swalat at which one must recite the Quran verses is _____
A. Sujud B. Qiyam C. Rukuh D. Itidal
- Aisha harvested wheat worth 10000 shillings. If she had planted the crop and raised it under natural rain, how much will she pay as zakat?
A. 250 B. 5000 C. 1000 D. 500
- Mariam passed her examination very well. She is thankful to Allah. She could show this by offering _____
A. daily prayers B. sacrifices
C. sijdatul sahw D. sijdatul shakur
- Which of the following acts can nullify ones saum?
A. sleeping during the day
B. vomiting deliberately
C. taking bath during the day
D. turning away from the Qibla
- The first mosque to be built in the history of Islam was?
A. Masjidul Qubaa B. Masjidul Haraam
C. Masjidul Aqsa D. Masjidul Nabawy
- Which one of the following events is related to Hijira?
A. Hudaibiyah treaty B. Pledge of Aqabah
C. Battle of Uhud D. Cave Hirah