

GRADE 6 MID TERM 2 MAY 2022

SOCIAL STUDIES & R.E

TARGETER WINGS  
MONITORING LEARNER'S PROGRESS

GRADE 6 - 2022



SOCIAL STUDIES & R.E

Name .....

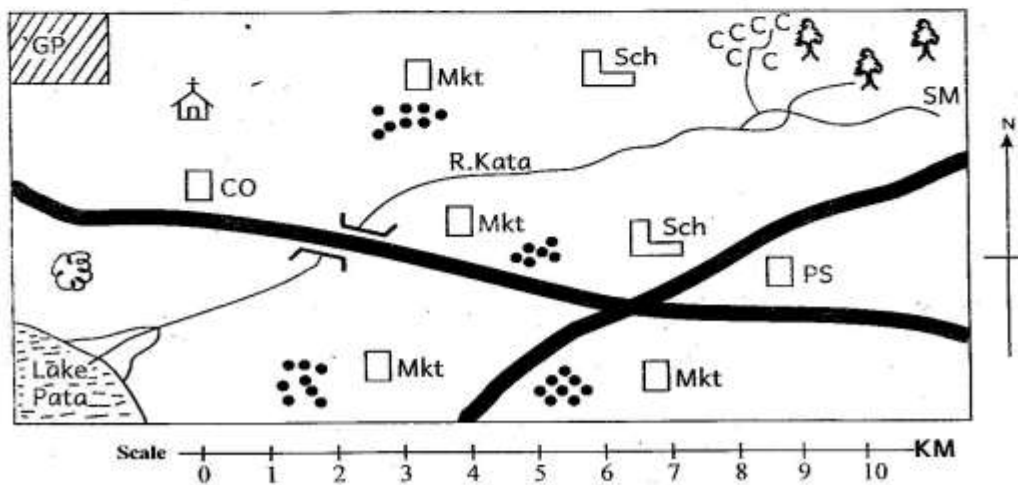
School name .....

The teacher to fill the grid below after marking the learner's work.

Assessment rubric				
SUBJECT	Exceeds Expectations (40 - 50)	Meets Expectations (25 - 39)	Approaches Expectations (15 - 24)	Below Expectations (0 - 14)
SOCIAL STUDIES				

Assessment rubric				
SUBJECT	Exceeds Expectations (19 - 20)	Meets Expectations (13 - 18)	Approaches Expectations (6 - 12)	Below Expectations (0 - 5)
R.E				

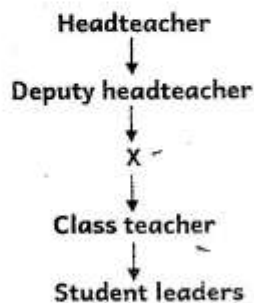
SOCIAL STUDIES  
MANGA AREA



KEY					
G.P Game park	Church	Quarry	Settlement	SM Sawmill	Mkt Market
P.S. Police Station	Forest	CCC Coffee	CO County Office	Sch School	Tarmac Road

**Use the map of Manga area to answer questions 1 - 7.**

1. What is the direction of the Game Park from the forest? \_\_\_\_\_ (1mk)
2. Name four economic activities practised in Manga area (4mks)
  - a) \_\_\_\_\_
  - b) \_\_\_\_\_
  - c) \_\_\_\_\_
  - d) \_\_\_\_\_
3. Manga area is administered by a \_\_\_\_\_ (1mk)
4. Which type of climate is experienced to the North East of the map? \_\_\_\_\_ (1mk)
5. The presence of the church in the area shows that the people in the area are \_\_\_\_\_ (1mk)
6. Most people in the area have settled near the \_\_\_\_\_ (1mk)
7. The main means of transport in Manga area is \_\_\_\_\_ (1mk)
8. Complete the school administrative structure below



Name the administrator marked X \_\_\_\_\_ (1mk)

9. Name five tourist attractions in Kenya (5mks)
  - a) \_\_\_\_\_
  - b) \_\_\_\_\_
  - c) \_\_\_\_\_
  - d) \_\_\_\_\_
  - e) \_\_\_\_\_

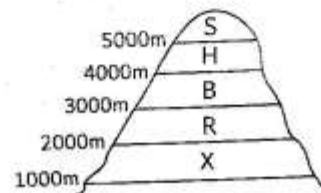
10. Name the places where these minerals are mined in Kenya (5mk)
  - a) Diatomite \_\_\_\_\_
  - b) Soda ash \_\_\_\_\_
  - c) Crude oil \_\_\_\_\_
  - d) Limestone \_\_\_\_\_
  - e) Salt \_\_\_\_\_

**Use the diagram below to answer the questions that follow**



11. The lake marked X was formed through the process called \_\_\_\_\_ (1mk)
12. Name four lakes that were formed through the process above (4mks)
  - a) \_\_\_\_\_
  - b) \_\_\_\_\_
  - c) \_\_\_\_\_
  - d) \_\_\_\_\_
13. Identify the climate that best suits the following economic activities. (5mks)
  - a) Dairy farming \_\_\_\_\_
  - b) Coffee farming \_\_\_\_\_
  - c) Cotton growing \_\_\_\_\_
  - d) Ranching \_\_\_\_\_
  - e) Pastoralism \_\_\_\_\_

**Use the diagram below to answer number 14.**



14. The part marked X consists of which vegetation? \_\_\_\_\_ (1mk)

15. Name five bantu communities in Uganda (5mks)

- a) \_\_\_\_\_
- b) \_\_\_\_\_
- c) \_\_\_\_\_
- d) \_\_\_\_\_
- e) \_\_\_\_\_

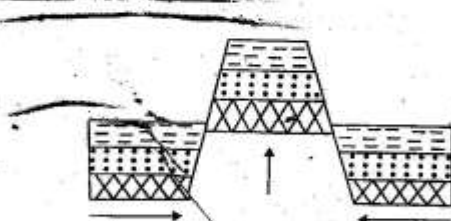
16. Name four aspects of traditional culture that ought to be preserved (4mks)

- a) \_\_\_\_\_
- b) \_\_\_\_\_
- c) \_\_\_\_\_
- d) \_\_\_\_\_

17. Name five factors that influence population distribution in Eastern Africa (5mks)

- a) \_\_\_\_\_
- b) \_\_\_\_\_
- c) \_\_\_\_\_
- d) \_\_\_\_\_
- e) \_\_\_\_\_

Use the diagram below to answer questions 18-19



18. The feature above was formed through which process? \_\_\_\_\_ (1mk)

19. Name three mountains that were formed through the process above in Eastern Africa (3mks)

- a) \_\_\_\_\_
- b) \_\_\_\_\_
- c) \_\_\_\_\_

(Total 50 marks)

### CHRISTIAN RELIGIOUS EDUCATION

#### ASSESSMENT

1. "What have I done to you? Why have you beaten me these three times?" The animal said the words to Balaam. Which animal said these words? \_\_\_\_\_

(1mk)

2. Identify any one uniqueness of the birth of Jesus and write down \_\_\_\_\_

(1mk)

3. Which miracle of Jesus shows that He has power over death? \_\_\_\_\_

(1mk)

4. The parable of the mustard seed teaches us about the growth of the kingdom of God. How can a christian help in the growth of the church? \_\_\_\_\_

(1mk)

5. What is a talent? \_\_\_\_\_

(1mk)

6. Jane is talented in knitting. Everyday, Jane completes her school work and practises knitting. Which value is demonstrated by Jane? \_\_\_\_\_

(1mk)

7. Define the term ability (1mk)

\_\_\_\_\_

8. What is your ability?(1mk)

\_\_\_\_\_

9. How can you use the ability mentioned in question 8 above to help the community? \_\_\_\_\_

(1mk)

10. Boline your best friend avoids going home early because she does not like fetching water. What is the best advise for her? \_\_\_\_\_

(1mk)

11. Why should we make the right choices everyday? \_\_\_\_\_ (1mk)
12. Name the two types of leisure (2mks)
  - a) \_\_\_\_\_
  - b) \_\_\_\_\_
13. Identify three social media platforms that can be used by christians to spread the word of God (3mks)
  - a) \_\_\_\_\_
  - b) \_\_\_\_\_
  - c) \_\_\_\_\_
14. Fill in the blank spaces correctly according to 1 Corinthians 6:19. Don't you know that your \_\_\_\_\_ is the temple of the \_\_\_\_\_, who lives in you and who was \_\_\_\_\_ to you by God? You do not \_\_\_\_\_ to yourself but to God. (4mks)  
(holy spirit, belong, body, given)

(Total 20marks)

#### ISLAMIC RELIGIOUS ACTIVITIES

1. Mumtaz a Grade 6 pupil found her classmates backbiting their teacher. Which surah should Mumtaz advise them to read? \_\_\_\_\_
2. Which surah must be recited in all prayers? \_\_\_\_\_
3. Piling up of wealth is discouraged in surah \_\_\_\_\_
4. Hassan, a grade 6 learner has no patience in anything that he does. Which surah should he study in order to be patient? \_\_\_\_\_
5. How many verses are there in surah Al-Fatiha? \_\_\_\_\_

6. Complete this hadith; A muslim is a brother to another \_\_\_\_\_
7. Which two parts of a female body are nakedness? \_\_\_\_\_
8. The second pillar of Iman is the belief in \_\_\_\_\_
9. The act of fearing Allah is referred to as \_\_\_\_\_
10. Mention any two acts that can lead to the fear of Allah (S.W.T)
  - i) \_\_\_\_\_
  - ii) \_\_\_\_\_
11. Which angel of Allah (S.W.T) removes souls from human beings? \_\_\_\_\_
12. The practices and actions of the prophet (S.A.W) are referred to as \_\_\_\_\_
13. Who was the grandfather of the prophet (S.A.W)? \_\_\_\_\_
14. The attribute of Allah Ar-Rahman means \_\_\_\_\_
15. Which prophet of Allah made a bird from clay and made it to fly? \_\_\_\_\_
16. Mention any two acts that can nullify swalat
  - i) \_\_\_\_\_
  - ii) \_\_\_\_\_
17. The sunnah prayer performed after a fardh swalat is known as \_\_\_\_\_
18. Which fardh swalat is performed at 0<sup>00</sup> o'clock? \_\_\_\_\_

(20 marks)