

GRADE 6 MID TERM 2 MAY 2022

SCIENCE AND TECHNOLOGY



TARGETER WINGS
MONITORING LEARNER'S PROGRESS
GRADE 6 - 2022



SCIENCE AND TECHNOLOGY

Name

School name

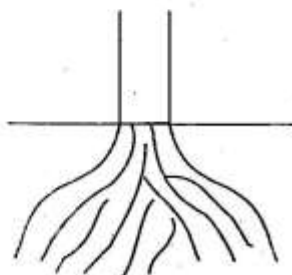
The teacher to fill the grid below after marking the learner's work.

Exceeds expectations (48 - 50)	Meets Expectations (25 - 47)	Approaching Expectations (11 - 24)	Below Expectations (0 - 10)

1. State four characteristics of spiders. (4mks)

- a) _____
- b) _____
- c) _____
- d) _____

2. The diagram below shows a certain type of root.



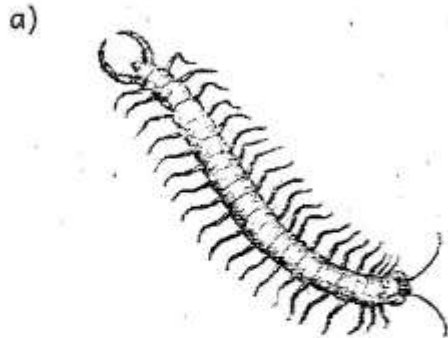
Give three examples of plants that have the above type of root system. (3mks)

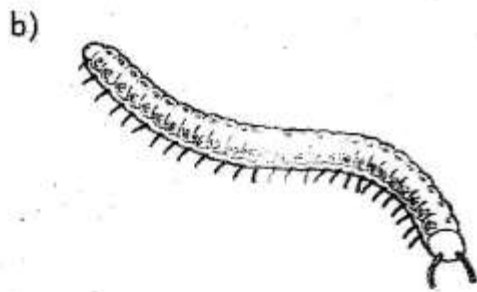
- a) _____
- b) _____
- c) _____

3. Write three functions of leaves in plants. (3mks)

- a) _____
- b) _____
- c) _____

4. Identify the animals drawn below
(2mks)





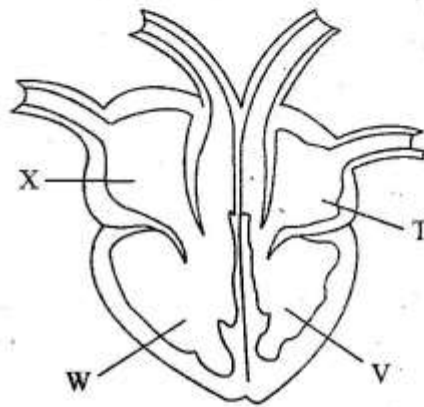
5. Name three main parts of the circulatory system. (3mks)

- a) _____
- b) _____
- c) _____

6. Write four characteristics of fish
(4mks)

- a) _____
- b) _____
- c) _____
- d) _____

7. The diagram below shows the human heart



Name the parts labelled X, T, W and V. (4mks)

- X- _____
- T- _____
- W- _____
- V- _____

8. List three parts of the human skeleton. (3mks)

- a) _____
- b) _____
- c) _____

9. Name two diseases that affect the breathing system. (2mks)

a) _____

b) _____

10. Write three signs and symptoms of typhoid (3mks)

a) _____

b) _____

c) _____

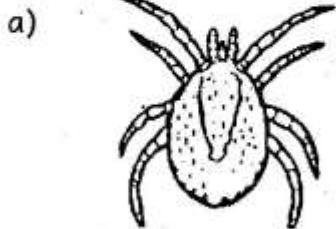
11. Write three importance of fungi (3mks)

a) _____

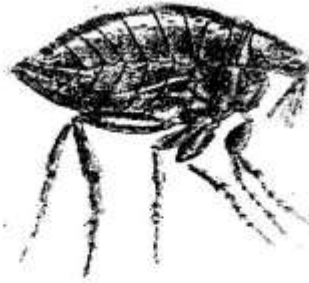
b) _____

c) _____

12. Identify the following parasites. (3mks)



b)



c)



13. Give three examples of wastes that decompose. (3mks)

a) _____

b) _____

c) _____

14. Write three ways of managing solid wastes (3mks)

- a) _____
- b) _____
- c) _____

15. Give names of the following parts of the digital device. (3mks)

a)



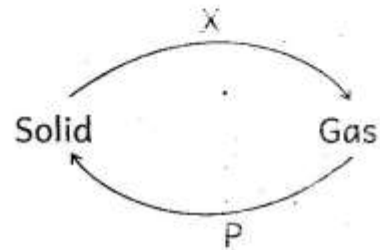
b)



c)



16. Name the process labelled X and P. (2mks)



X _____

P _____

17. Draw the following phases of the moon (2mks)

a) Gibbous	b) Crescent