

GRADE 6 MID TERM 2 MAY 2022

ART AND CRAFT & MUSIC

TARGETER WINGS
MONITORING LEARNER'S PROGRESS
GRADE 6 - 2022



ART AND CRAFT & MUSIC

Name


School name

The teacher to fill the grid below after marking the learner's work.

Assessment rubric				
SUBJECT	Exceeds Expectations (24 - 25)	Meets Expectations (16 - 23)	Approaches Expectations (8 - 15)	Below Expectations (0 - 7)
ART AND CRAFT				
MUSIC				


ART AND CRAFT

- Write **three** factors to consider when drawing forms. (3mks)
 - _____
 - _____
 - _____
- Look at the picture.



- Which technique has been used to create light and dark effect in the picture above?
_____ (1mk)
- Identify **four** materials that could have been used when drawing the items above. (4mks)
 - _____
 - _____
 - _____
 - _____

3. On the space below draw a jug and use dots to create a rough texture on it. (3mks)



4. What is painting? (1mk)

5. List three materials used when painting. (3mks)

a) _____

b) _____

c) _____

6. Give two examples of 2D works that can be mounted. (2mks)

a) _____

b) _____

7. Name two elements of photography. (2mks)

a) _____

b) _____

8. Write three materials used in making sculpture. (3mks)

a) _____

b) _____

c) _____

9. Thonging technique is a technique used in _____ work. (1mk)

10. List two techniques that can be used to decorate a wooden cooking stick. (2mks)

a) _____

b) _____

(Total = 25marks)

MUSIC

1. Name **two** types of art songs. (2mks)

a) _____

b) _____

2. **Complete the following.** (2mks)

_____ involves gradual

increase in volume while

_____ involves gradual

decrease in volume when singing.

3. Give **three** examples of voice parts used when singing in a duet. (3mks)

a) _____

b) _____

c) _____

4. Write **four** social importance of songs. (4mks)

a) _____

b) _____


c) _____

d) _____


5. Write the last verse of the East African Community Anthem in Kiswahili. (3mks)

6. Draw the following musical instruments. (4mks)

a) Abu




b) Chivoti




7. Name **one** material that can be used to make a wind instrument. (1mk)

8. Draw the symbols for the following French rhythm names. (2mks)


a) crotchet



b) quavers



9. Draw a hand sign for solfa syllable 's' (1mk)



10. Outline **three** ways of taking care of a descant recorder. (3mks)

- a) _____
- b) _____
- c) _____

(Total 25 marks)