

GRADE 5 MID TERM 2 MAY 2022

SCIENCE AND TECHNOLOGY



TARGETER WINGS  
MONITORING LEARNER'S PROGRESS  
GRADE 5 - 2022



SCIENCE AND TECHNOLOGY

Name .....

School name .....

The teacher to fill the grid below after marking the learner's work.

Exceeds expectations (48 - 50)	Meet Expectations (25 - 47)	Approaching Expectations (11 - 24)	Below Expectations (0 - 10)

1. Define the following terms.  
(2mks)

a) Flowering plants

\_\_\_\_\_

b) Non flowering plants

\_\_\_\_\_

2. Give **three** examples of the following plants: (6mks)

**Flowering plants**

i) \_\_\_\_\_

ii) \_\_\_\_\_

iii) \_\_\_\_\_

**Non Flowering plants**

i) \_\_\_\_\_

ii) \_\_\_\_\_

iii) \_\_\_\_\_

3. List **two** examples of fungi.  
(2mks)

a) \_\_\_\_\_

b) \_\_\_\_\_

4. Animals with backbones are called \_\_\_\_\_ while animals without backbones are called \_\_\_\_\_ (2mks)

5. What is air pollution? (1mk)

\_\_\_\_\_

\_\_\_\_\_

6. Undigested food in the digestive system are temporarily stored in the \_\_\_\_\_ (1mk)

7. Give **three** types of clouds. (3mks)

a) \_\_\_\_\_

b) \_\_\_\_\_

c) \_\_\_\_\_

8. List **two** characteristics of solids. (2mks)


a) \_\_\_\_\_

b) \_\_\_\_\_

9. Write the name of the animal and the group of vertebrates it belongs to. (5mks)

Animal


Name Group of vertebrates.



b)



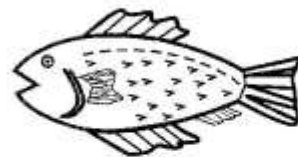
c)



d)



e)

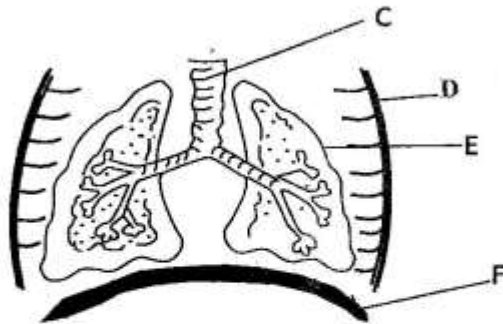


10. Name **two** examples of reptiles. (2mks)

a) \_\_\_\_\_

b) \_\_\_\_\_

11. Use the picture below to answer questions that follow.



a) The picture shown above shows parts of the (1mk)

\_\_\_\_\_

b) Name the parts labelled (4mks)

C \_\_\_\_\_

D \_\_\_\_\_

E \_\_\_\_\_

F \_\_\_\_\_

12. Air is cleaned, warmed and moistened in the part labelled (1mk)

\_\_\_\_\_

13. Match the parts of a human skeleton with their functions.

(4mks)

Part	Function
a) Skull	Supports parts of the body when walking, standing or sitting
b) Ribcage	Helps the body parts in movement
c) Backbone	Encloses the inner organs and protects them
d) Limb bone	Protects the brain from injuries

14. Name the five senses of a human being. (5mks)

a) \_\_\_\_\_

b) \_\_\_\_\_

c) \_\_\_\_\_

d) \_\_\_\_\_

e) \_\_\_\_\_

15. All things in our environment are grouped into \_\_\_\_\_ and \_\_\_\_\_ things. (2mks)

16. Name the following types of teeth. (4mks)

a)



\_\_\_\_\_

b)



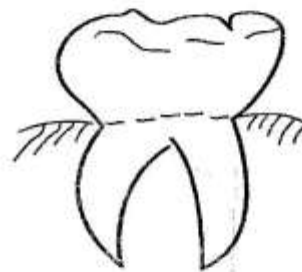
\_\_\_\_\_

c)



\_\_\_\_\_

d)



\_\_\_\_\_

17. Give two air pollutants in the environment. (2mks)

a) \_\_\_\_\_

b) \_\_\_\_\_