

GRADE 5 MID TERM 2 MAY 2022

HOME SCIENCE & AGRICULTURE



TARGETER WINGS
MONITORING LEARNER'S PROGRESS
GRADE 5 - 2022



HOME SCIENCE & AGRICULTURE

Name:

School name:

The teacher to fill the grid below after marking the learner's work.

Assessment rubric				
LEARNING AREA	Exceeds Expectations (26 - 30)	Meets Expectations (18 - 25)	Approaches Expectations (9 - 17)	Below Expectations (0 - 8)
HOMESCIENCE				
AGRICULTURE				

HOME SCIENCE

1. What is pre - adolescence?

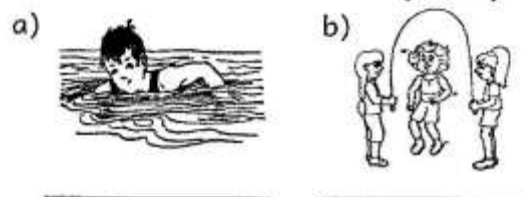
(1mk)

2. Write down three physical changes that take place in pre-adolescent girls. (3mks)

- a) _____
- b) _____
- c) _____

3. Study the picture below and Identify the exercises shown.

(2mks)



4. List two ways of maintaining personal hygiene as a way of good grooming. (2mks)

- a) _____
- b) _____

5. Write 'true' or 'false' about the safety precautions that should be observed by pre-adolescents within their environment.(5mks)

- a) I should not alert my parents when I want to go somewhere. _____
- b) I should not walk in the dark and in lonely places. _____

- c) I should not agree to meet or give information to anyone I meet on social media. _____
- d) I should accept if someone treats me in a way that makes me feel uncomfortable. _____
- e) I should dress decently. _____

6. Define the following terms. (2mks)

- a) Leisure time

- b) Time management

7. Write down any **one** method of cooking that is appropriate in preparing the following foods. (2mks)

<u>Food</u>	<u>Method of cooking</u>
a) eggs	_____
b) chapati	_____

8. Why is it advisable not to iron inner wears when laundering them? (1 mk)


9. List **three** fragile kitchen utensils that are used at home. (3mks)

- a) _____
- b) _____
- c) _____

10. You visit your friend's home and find the following equipment. Your friend tells you that you can use the equipment to preserve milk. Which method of milk preservation is it? (1mk)



11. Draw a thimble and write its use. (2mks)



12. Name the following stitches. (2mks)

- a) _____
- b) _____

13. Write down two effects of time wastage. (2mks)

- a) _____
- b) _____

14. What is good grooming? (1mk)

15. The word below is a factor to consider when choosing shoes and clothes for pre-adolescents. The letters have been jumbled. Arrange them to get the correct word. (1mk)

mofroct _____

AGRICULTURE

1. Write down the planting materials for the following climbing fruits. (3mks)

- a) Passion fruit _____
- b) Grapes _____
- c) Black berries _____

2. Name the following small wild animals that can damage crops in the farm. (2mks)



3. Write down three ways of controlling the small wild animals above from destroying crops without killing them. (3mks)

- a) _____
- b) _____
- c) _____

4. Fill in the gaps with the appropriate word to complete the statements. (6mks)

- a) The excess water that is not absorbed by the soil but flows on the ground surface after rains is called _____
- b) A _____ is constructed and put in the farm to scare away small wild animals.
- c) _____ is the removal of the unwanted plants from the farm.
- d) The removal of seedlings from a nursery bed is known as _____
- e) _____ crops are plants whose seeds are found in a pod or case.
- f) _____ is the process of collecting soil from soil deposition sites and using it to replace the lost top soil.

the

5. Study the picture below and use it to answer the questions




- a) Identify the gardening practice shown in the picture above (1mk)

- b) What do you call the gardening tool shown in the picture above (1mk)

6. Draw and colour the following item that can be used as compost bin in your school or home. (2mks)

Wood pallet



7. Write 'true' or 'false' after the following statements. (5mks)
- a) Applying manure provides nutrients to the soil. _____
- b) Thinning destroys growing fruit trees. _____

c) Selling surplus fruit tree seedlings is a bad practice.

d) Fencing a growing fruit tree protects it. _____

e) Mulching conserves water.

8. The practice of growing a crop that covers the soil to reduce evaporation of water is referred to as _____ (1mk)

9. List **three** farming practices that help in water conservation in plants. (3mks)

- a) _____
- b) _____
- c) _____

10. Why should people conserve water in the soil? (1mk)

11. Name **two** activities that can be carried out in order to manage the growing climbing fruit plants until they are harvested. (2mks)

- a) _____
- b) _____