

GRADE 5 MID TERM 2 MAY 2022

ART AND CRAFT & MUSIC

TARGETER WINGS
MONITORING LEARNER'S PROGRESS



GRADE 5 - 2022

ART AND CRAFT & MUSIC

Name

School name

The teacher to fill the grid below after marking the learner's work.

Assessment rubric				
LEARNING AREA	Exceeds Expectations (19 - 20)	Meets Expectations (13 - 18)	Approaches Expectations (6 - 12)	Below Expectations (0 - 5)
ART AND CRAFT				
MUSIC				

ART AND CRAFT

1. What do you call the type of drawing that involves drawing an arrangement of man-made or natural things? (1mk)

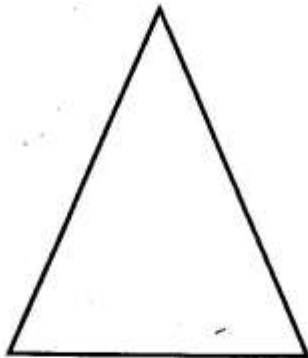
2. List three principles of art that guide a person when placing the objects in a still life composition. (3mks)
 - a) _____
 - b) _____
 - c) _____

3. _____ and _____ techniques help in creating tonal effects when drawing objects. (2mks)
4. Fill in the gaps with the appropriate words to complete the sentences. (3 mks)
 - a) Scratching off the black Indian ink or black powder paint from a layer of brightly coloured crayons is known as _____

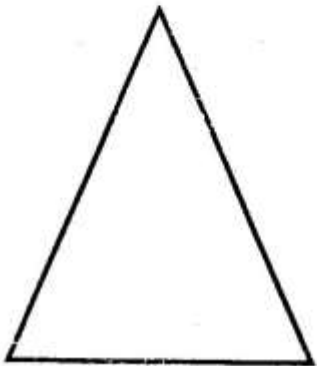
- b) _____ is the use of lines that cross over each other.
- c) A circular chart that helps you to identify colours and to see how they relate with each other is called _____

5. Colour the following shapes with the category of colour indicated. (2mks)

a) Primary colour



b) Secondary colour



6. Use black colour to create blended tonal variation strip in the rectangle given below. (2mks)



7. Name the cutting and pasting techniques that help in creating pictorial composition. (2mks)

- a) _____
- b) _____

8. Match the following techniques with the indigenous Kenyan crafts where they are used. (3mks)

Indigenous Kenyan craft	Technique
a) Pottery	Thonging
b) Leatherwork	Twining
c) Basketry	Pinch

9. Name one type of puppet
_____ (1mk)

10. A folded paper pocket made for storing loose papers or artwork is known as a _____ (1mk)

MUSIC

1. Define the following types of songs. (3mks)

a) Patriotic song _____

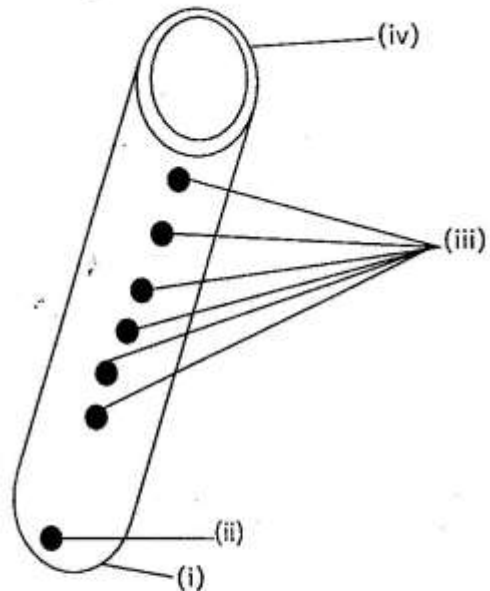
b) Lullabies _____

c) Popular songs _____

2. Write down the chorus of the East African community Anthem. (2 mks)

3. How many voices are there in a three part song? (1 mk)

4. Use the diagram below to answer the questions.



a) Which category of musical instruments do you group the musical instrument shown above? (1mk)

b) What is the name of the musical instrument shown above? (1mk)

c) How is the musical instrument shown above played? (1mk)

d) Name the parts of the musical instrument labelled. (4mks)

(i) _____

(ii) _____

(iii) _____

(iv) _____

5. Write down the roles of the following participants in a folk song. (3mks)

a) Singers

b) Instrumentalists

c) Soloist

6. The uniform pace or speed at which all dancers move in a folk dance is known as _____ of a dance. (1mk)

7. What do you use to name music notes in music? (1mk)

8. A regularly repeated sound is known as _____ while the highness or lowness of sound in music is known as _____ (2mks)
