

GRADE 4 MID TERM 2 MAY 2022

HOMESCIENCE & AGRICULTURE



TARGETER WINGS
MONITORING LEARNER'S PROGRESS
GRADE 4 - 2022



HOMESCIENCE & AGRICULTURE

Name:

School name:

The teacher to fill the grid below after marking the learner's work.

Assessment rubric				
LEARNING AREA	Exceeds Expectations (26 - 30)	Meets Expectations (18 - 25)	Approaches Expectations (9 - 17)	Below Expectations (0 - 8)
HOMESCIENCE				
AGRICULTURE				

HOME SCIENCE

1. Name the following play items. (4mks)

a)



b)



c)



d)



2. The things that a child requires so as to grow well and stay healthy are called (1mk)

3. Name the needs of a child shown in the pictures below. (3mks)

a)



b)



c)



4. Define the term play item.(1mk)

5. Write 'true' or 'false' about the causes of common illnesses in the statements given below.(5mks)

- a) Eating dirty food. _____
- b) Drinking boiled water. _____
- c) Staying in clean places. _____

d) Wearing warm clothes in cold weather. _____

e) Playing in the rain. _____

6. List two common illnesses that affect people in your locality. (2mks)

a) _____

b) _____

7. Write the uses of the following cleaning tools used when cleaning our homes. (3mks)

a)



b)



c)



8. List three common accidents at school. (3 mks)

a) _____

b) _____

c) _____

4. Put a tick(✓) to agree or a cross (X) to disagree with the following statements. (5mks)

- a) Sand is smooth when wet and cracks when dry. _____
- b) Compost manure improves the quality of soil. _____
- c) Soil stores water which is used by animals and plants. _____
- d) Drip irrigation wastes a lot of water. _____
- e) Cooking is the use of water in the farm. _____

5. Write the practices that are carried out in a compost heap or pit to ensure there is the following: (3mks)

- a) Addition of mineral salts

- b) Cooling and allowing the materials in the heap or pit to rot. _____
- c) Allowing in air _____

6. List four uses of water in the farm. (4mks)

- a) _____
- b) _____
- c) _____
- d) _____

7. Draw a picture showing drip irrigation on plants. (1mk)



8. Using the picture you have drawn in question 7 above define drip irrigation (1mk)

9. Write down one advantage of drip irrigation. (1mk)


10. Name 4 small wild animals that destroy crops and animals. (4mks)

- a) _____
- b) _____
- c) _____
- d) _____

11. Write 4 materials used to make a compost pit. (4mks)

- a) _____
- b) _____
- c) _____
- d) _____


9. Study the picture below and then write down the safety precaution to observe during play. (1mk)



10. Name three protective items you can wear to ensure safety when cleaning your classroom. (3mks)

- a) _____
 b) _____
 c) _____

11. Draw and colour a dustbin. (1mk)



12. Judy wanted to clean her parent's house. She needed cleaning tools but she did not have them. She decided to improvise them. Match the materials and tools with the improvised ones correctly. (3mks)

Materials and tools **Improved items**

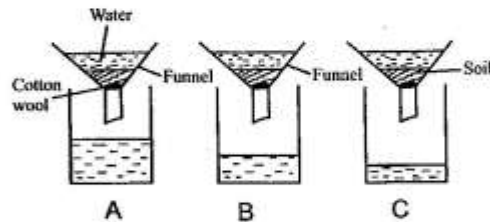
- a) Handbrush Piece of old cloth
 b) Mop Cutout of jerrycan
 c) Dustpan Maize cob

AGRICULTURE

1. Match the type of soil to its particle sizes. (3mks)

- a) Clay Medium soil particles
 b) Loam Large soil particles
 c) Sand Small soil particles

2. Study the set-ups below. (3mks)



Name the soil samples shown in

- A _____
 B _____
 C _____

3. _____ manure is made up of animal and plant wastes. (1mk)