

GRADE 4 MID TERM 2 MAY 2022

ART AND CRAFT & MUSIC

TARGETER WINGS
MONITORING LEARNER'S PROGRESS

GRADE 4 - 2022



ART AND CRAFT & MUSIC

Name

School name

The teacher to fill the grid below after marking the learner's work.

Assessment rubric				
LEARNING AREA	Exceeds Expectations (19 - 20)	Meets Expectations (13 - 18)	Approaches Expectations (6 - 12)	Below Expectations (0 - 5)
ART AND CRAFT				
MUSIC				

ART AND CRAFT

1. List three types of prints you learnt in Grade three.(3mks)

- a) _____
- b) _____
- c) _____

2. Name four materials you can use to shade a diagram when drawing using smudge technique. (4 mks)

- a) _____
- b) _____
- c) _____
- d) _____

3. List five types of songs (5mks)

a) _____

b) _____

c) _____

d) _____

e) _____

4. Write 'true' or 'false' on the roles of folk songs in a community. (6mks)

a) To break relationships

b) To educate people


c) To promote culture

d) To entertain people

e) To make people sad


f) To rebuke people

5. Draw a drum in the space below (1mk)




3. Create the value gradation strips in the shapes shown below using any colour of your choice.

a) Staggered gradation strip. (2mks)



b) Blended gradation strip. (2mks)



4. Grade 4 learners were told by their Art and Craft teacher to draw the arrangement of non-living objects.

a) What do you call this type of drawing? (1mk)

b) Write down three materials the learners were likely to have before drawing the objects. (3mks)

i) _____

ii) _____

iii) _____

5. Mr. Kisai, an Art and Craft teacher at Matopeni Academy placed some items on a table in front of the learners to draw them as they looked at them. What do you call this type of drawing?

(1mk)

6. Why is soap used when applying the dark coat over the crayon rubbings in crayon etching?(1mk)

7. Fill in the gaps to complete the statements below. (3mks)

a) _____ is the art of creating pictures or images by applying colour on a surface.

b) The lightness or darkness of colour is known as _____

c) A _____ composition is a picture that tells a story.

MUSIC

1. Name following musical instruments and write how they are played to produce sound.

(6mks)

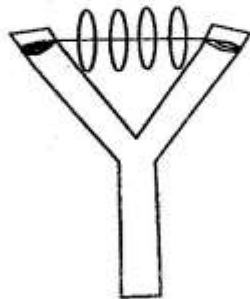
a)



Name: _____

How it is played: _____

b)



Name: _____

How it is played: _____

c)



Name: _____

How it is played: _____

2. Write the first stanza of the national anthem in English.

(2mks)
