

FORM FOUR CLUSTER KCSE MODEL12

BIOLOGY PAPER 1 QUESTIONS

Answer all questions

1. Name the organelle that performs each of the following functions in a cell.

Proteins synthesis.....

Transport of cell secretions.....

2. Explain what would happen to red blood cells if they are placed in a concentrated salt solution.

.....
.....
.....

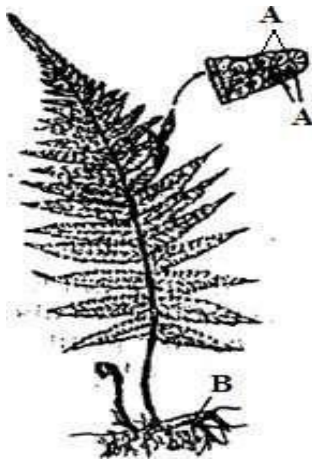
3. a) State the role of light in photosynthesis.

.....
.....

b) Name one end product of dark reaction in photosynthesis.

.....

4. The diagram below represents a fern.



Name

a) The parts labelled

A.....

B.....

b) The division to which the plant belongs.

.....
.....

5. State two functions of cell sap.

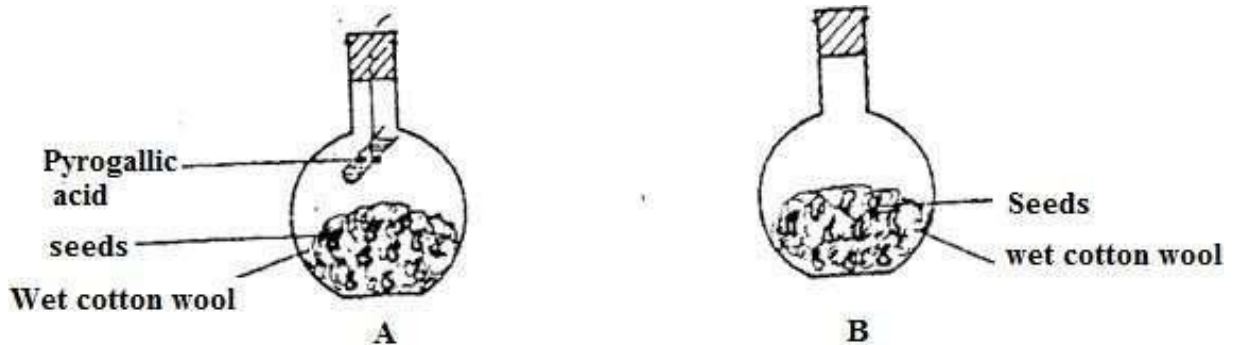
.....

.....
.....
.....

6. State three characteristics that ensure cross – pollination takes place in flowering plants.

.....
.....
.....

7. A student set up an experiment as shown in the diagrams below



The set up was at room temperature for a week. a) What was the aim of the experiment?

.....
.....

b) What would be the expected results at the end of the experiment?

.....
.....
.....

8. Give two reasons why primary productivity in an aquatic ecosystem decreases with depth.

.....
.....

9. State two ways by which the human immune deficiency (H.I.V) is transmitted other than through sexual intercourse?

.....
.....
.....

10. Give two reasons why sexual reproduction is important in organisms.

.....
.....
.....

11. State two advantages of metamorphosis to the life of insects.

.....
.....

12. Other than having many features in common, state the other characteristics of a species.

.....
.....

.....
13. Why are green plants referred to as primary producers in an ecosystem?
.....
.....

14. A person whose blood groups are AB requires a blood transfusion. Name the blood groups of the donors.
.....
.....

15. Name the parts of the flower that are responsible for the production of gametes.
.....
.....
.....

16. A student caught an animal which had the following characteristics:

Body divides into two parts

Simple eyes

Eight legs

The animal belongs to the class

.....

17. What are the three end products of anaerobic respiration in plants.
.....
.....

18. State two ways in which xylem vessels are adapted to their function.
.....
.....
.....

19. A person was found to pass out large volumes of dilute urine frequently. Name the

a) Disease the person was suffering from
.....
.....

b) Hormone that was deficient
.....
.....

20. State one effect of magnesium deficiency in green plants.
.....
.....

21. a) State the function for co-factors in cell metabolism
.....
.....

b) Give one example of a metallic co- factor

.....
.....

22. State the importance of osmosis in plants.

.....
.....
.....

23. What is the formula for calculating linear magnification of a specimen when using a hand lens?

.....
.....

24. Give a reason why staining is necessary when preparing specimens for observation under the microscope.

.....

25. a) State two environmental conditions that can cause seed dormancy.

.....
.....

b) Name the part of a bean that elongates to bring about epigeal germination.

.....
.....

26. State the importance of the following processes that take place in the nephrons of a human kidney.

a) Ultra filtration

.....
.....

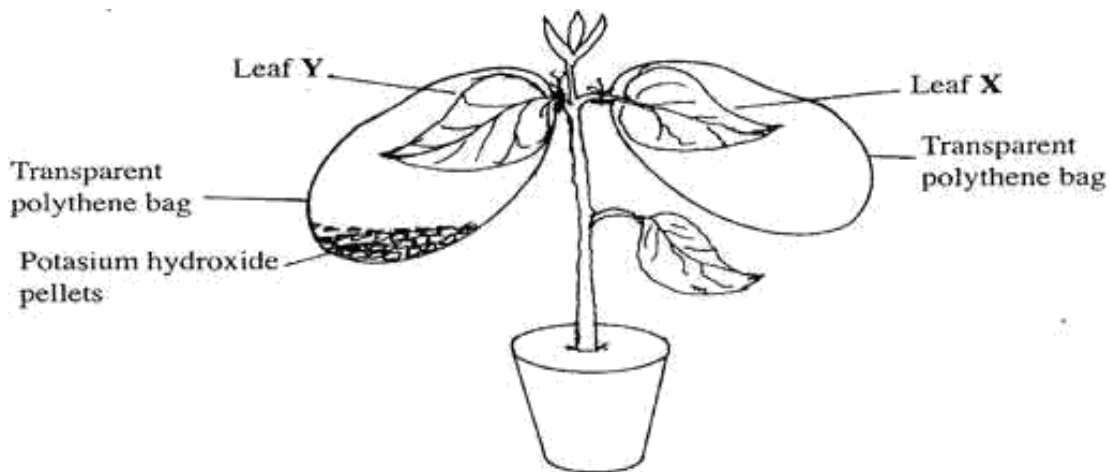
b) Selective reabsorption

.....
.....

c) Name a disease of the liver whose symptom is jaundice

.....
.....

27. A potted plant was kept in the dark for 48 hours. Two leaves X and Y were treated as shown in the diagram below.



The experiment set - up was kept in sunlight for 6 hours after which a starch test was carried out on the two leaves.

a) What were the results of the starch test on leaves X and Y?

.....

b) Give reasons for your answers in (a) above.

.....

28. What is the role of bile salts in digestion in humans?

.....

29. What do you understand by the following terms?

a) Reproduction.

.....

b) Irritability

.....

30. Name two plant and two animal processes in which diffusion plays an important role.

a) Plant

.....

b) Animal

.....

31. Explain why large animals require an elaborate transport system.

.....

.....
32. State the function of the following structures in a bony fish.

a) Gill rakers.

.....
.....

b) Gill filaments.

.....
.....

c) Gill bar

.....
.....

33. What is the importance of the following in germination?

a) Oxygen

.....
.....

b) Water

.....
.....

34. A certain animal used 15cm³ of oxygen to oxidize a certain food substrate whose respiratory quotient was 0.705.

a) Calculate the volume of carbon (IV) oxide produced.

.....
.....
.....

b) Give the name of the food substrate.

.....
.....