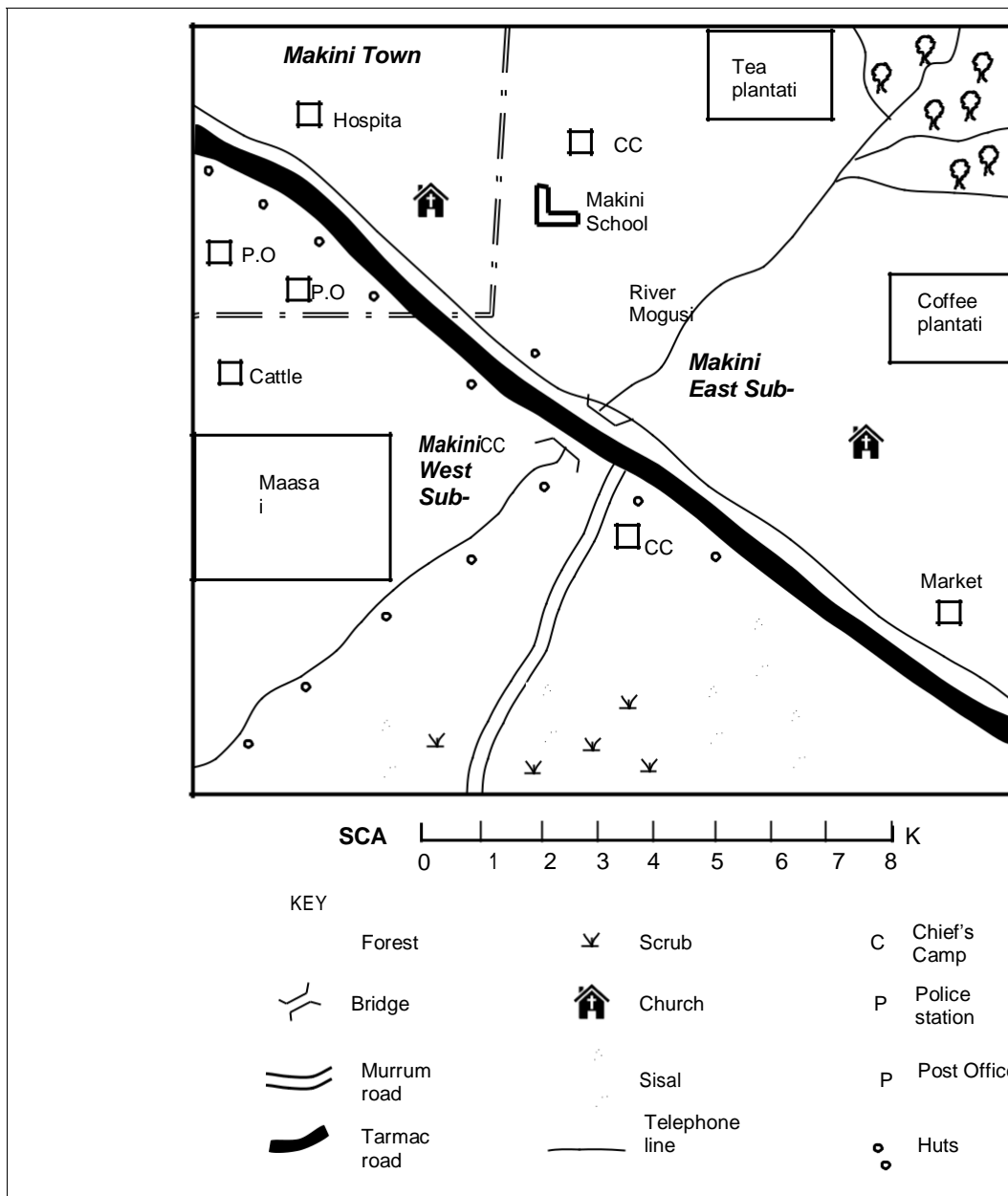


# SHINYALU SOUTH CLUSTER

## SOCIAL STUDIES & CRE 2020

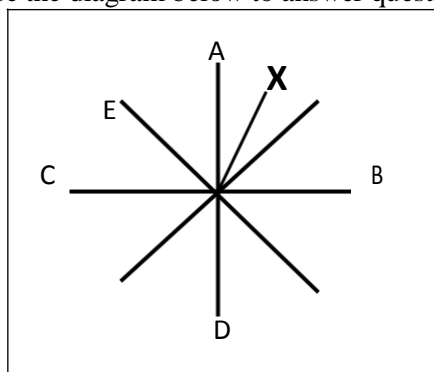
### MAKINI AREA



- River Mogusi flows from the \_\_\_\_  
A. North West B. North East  
C. South East D. North
- The Southern part of Makini area is likely to be \_\_\_\_  
A. Cool and Wet B. Hot and Wet  
C. Cool and Dry D. Hot and Dry
- Which one of the following economic activities is not practiced in Makini Area?  
A. Crop farming  
B. Livestock keeping  
C. Lumbering  
D. Transport and communication.
- Makini area is likely to be a \_\_\_\_  
A. Subcounty B. County C. Division D. Location
- A man was caught stealing at Makini school. The best action to be taken would be to \_\_\_\_  
A. Take him to the chief's camp  
B. Beat him up  
C. Forgive him  
D. Take him to the nearest church.
- People of Makini area are likely to be \_\_\_\_  
A. Hindus B. Pagans  
C. Christians D. Traditionalists

7. How many tributaries does River Mogusi have?  
A. 4 B.3 C.5 D.2
8. Which one of the following language groups in Kenya is the smallest?  
A. Bantu B. Nilotes C. Cushites D. Semites
9. Buchieni has a sister called. Musilibi Buchieni has a son called Shihoto while Musilibi has a daughter called Khalayi. Khalayi is Buchieni's \_\_\_\_\_  
A. Nephew B. Niece C. Cousin D. Aunt
10. Which of the following was a traditional form of education in Kenya?  
A. reading B. Using laptops  
C. Educational trips D. Apprenticeship
11. Who among the following people does not belong to a nuclear family?  
A. Uncle B. Daughter C. Mother D. Son
12. Which one of the following communities is correctly matched with how they call God?  
A. Abaluhya \_\_ Nyasaye B. Luo \_\_Ngai  
C. Maasai \_\_Enkai D. Agikuyu \_\_Asis
13. Which one of the following elements of a map gives the relationship between distance on a piece of paper and the actual ground distance?  
A. Frame B. Key C. Title D. Scale

Use the diagram below to answer questions 15-15



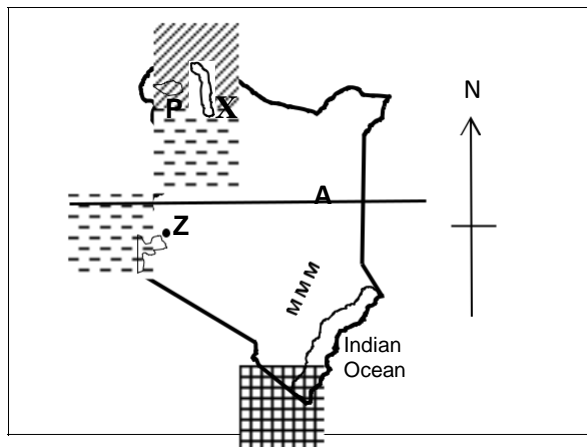
14. The direction marked X is \_\_\_\_  
A. East North East B. North East  
C. North North East D. North West
15. Which one of the following points is not a Cardinal point?  
A. C B.E C.D D.A
16. Which of the following features is commonly found in Nyika Plateau?  
A. Escarpments B. Mountains  
C. Salty lakes D. Inselbergs.
17. Below are characteristics of a type of climate found in Kenya.  
(i) High temperatures of over 25<sup>0</sup>C  
(ii) Low temperature range  
(iii) Convectional rainfall is received  
(iv) High rainfall of between 1000mm-12500mm per year  
The climatic region described above is \_\_\_\_  
A. Modified equatorial climate  
B. Modified tropical climate  
C. Tropical climate  
D. Semi desert climate

18. Pots, tiles and bricks are made from \_\_\_\_soil.  
A. Alluvial B. Clay C. Sandy D. Loamy
19. Below are characteristics about a vegetation type in Kenya.  
(i) Presence of a lot of grass  
(ii) A few scattered trees  
(iii) Acacia trees are common  
(iv) A large part of our country has this type of vegetation.  
The type of vegetation described above is \_\_\_\_  
A. Forest vegetation  
B. Savannah woodland vegetation  
C. Savannah grassland vegetation  
D. Dry bushland vegetation
20. Which one of the following is a modern form of communication?  
A. Use of smoke signals B. Ululations and wailing  
C. Use of messengers D. Use of Mobile phones
21. Kenya's leading crop export is \_\_\_\_  
A. Maize B. Coffee C. Tea D. Sugarcane
22. A person who shows love for his or her country is said to be \_\_\_\_  
A. Patriotic C. Obedient C. Loyal D. Loving
23. The most important human right is  
A. Right to a balanced diet. B. Right to life  
C. Right to vote D. Right to fresh air
24. Complete the table below.

Akamba	Ameru	Aembu	D
--------	-------	-------	---

- Which community best suits part D  
A. Pokomo B. Agikuyu  
C. Abaluhya D. Abagusii
25. To which arm of the government do Judges belong?  
A. Legislature B. Executive  
C. Parliament D. Judiciary
26. I was among the Kapenguria six -I led Kenya to independence in 1963  
-I became kenya's prime Minister on 1<sup>st</sup> June 1963.  
-On 12<sup>th</sup> December 1964, I became the fist president of Kenya.  
Who am I  
A. Daniel Arap Moi B. Mwai Kibaki  
C. Oginga Odinga D. Jomo Kenyatta
27. Which one of the following holidays is not a National holiday in Kenya?  
A. Mashujaa Day B. Christmas Day  
C. Madaraka Day D. Jamuhuri Day
28. Which one of the following countries neighbour Kenya to the North?  
A. Ethiopia B. Somalia C. South Sudan D. Uganda
29. Marine fishing in Kenya is practiced in  
A. Lake Victoria B. Lake Baringo  
C. River Tana D. The Indian Ocean
30. The main tourist attraction in Kenya is  
A. Wildlife B. Beautiful scenery  
C. Sandy beaches D. Pre-historic sites.

31. The North Eastern region of Kenya is sparsely populated mainly because \_  
 A. It has poor roads B. There are very few towns  
 C. It receives little rainfall D. It has dense forests
32. Which one of the following types of fish is caught in inland fishing grounds?  
 A. Tilapia B. Kingfish C. Mackerel D. Tuna
33. Use the map of Kenya to answer questions 33-37.



- The plains marked P are called \_\_\_\_  
 A. Awara plains B. Lotikipi plains  
 C. Loita plains D. Awara plains
34. The vegetation found in the area marked MM is \_  
 A. Riverine vegetation B. Tropical rainforest  
 C. Swamp vegetation D. Mangrove forests
35. The game park marked X is \_\_  
 A. Sibiloi B. Arawale C. Malka Mari D. Amboseli
36. The town marked Z is \_\_\_\_  
 A. Kakamega B. Kisumu C. Eldoret D. Nairobi
37. The line of Latitude marked A crosses all the towns below EXCEPT \_\_\_\_  
 A. Manderu B. Timboroa C. Solai D. Siaya
38. Patriotic Kenyans should do all the following Except \_\_\_\_  
 A. Paying taxes B. Being hardworking  
 C. Being loyal D. Beauty on our national flag.
39. The White colour on our National flag symbolizes \_\_\_\_  
 A. Snow on mount Kenya  
 B. Cleanliness and neatness  
 C. Peace among ourselves  
 D. Beauty on our national flag.
40. Before the introduction of money, people practiced  
 A. Internal trade B. External trade  
 C. Domestic trade D. Barter trade
41. The most common means of transport in Kenya is \_\_\_\_  
 A. Railway transport B. Road transport  
 C. Air transport D. Water transport
42. The growing of flowers is called \_\_\_\_  
 A. floriculture B. Acquaculture  
 C. Horticulture D. Viticulture
43. Below are conditions necessary for Growing a crop in Kenya \_\_\_\_

- (i) Well drained fertile soils  
 (ii) Moderate temperature  
 (iii) Moderate amount of rainfall when the crop is growing.  
 (iv) Warm dry and sunny weather during harvesting.  
 (v) Gently sloping land to allow proper use of machines
- The crop described above is \_\_\_\_  
 A. Wheat B. Cotton C. Tea D. Maize
44. The main problem facing poultry farming in Kenya is \_\_\_\_  
 A. Competition from imported poultry products  
 B. High cost of feeds  
 C. Pests and diseases  
 D. Distance from the main markets
45. Which one of the following minerals is correctly matched with where it is mined?  
 A. Soda ash L. Magadi  
 B. Limestone Kerio valley  
 C. Diatomite Bamburi  
 D. Flourspar Kariandusi
46. The cheapest method of preserving fish is \_\_\_\_  
 A. Salting B. Sun drying C. Canning D. freezing
47. Which one of the following animals is not among the 'Big Five'?  
 A. Elephant B. Leopard C. Lion D. Hippopotamus.
48. Which one of the following is a traditional industry?  
 A. Manufacturing B. Pottery C. Processing D. Service
49. Below are forms of child abuse. Which one is not?  
 A. Not allowing children to talk to strangers  
 B. Denying children food.  
 C. Children working for pay  
 D. Using abusive language on children
50. Who among the following is an ex-officio member of parliament?  
 A. The president B. The speaker  
 C. The women Representative D. The chief justice
51. Cultural artefacts are important mainly because \_  
 A. They were made in the past  
 B. They attract tourists  
 C. They tell the history of a community  
 D. They were made by special people.
52. Before the coming of the Europeans, the Abawanga were ruled by a \_\_\_\_  
 A. King B. Council of elders  
 C. Chief D. President
53. Who among the following resisted establishment of colonial rule in Kenya?  
 A. Waiyaki wa Hinga and Lenana  
 B. Mekatilili wa Menza and Lenana  
 C. Mukite wa Nameme and Koitalel arap Samoei  
 D. Waiyaki wa hinga and Koitalel arap Samoei
54. The third president of Kenya was \_\_\_\_  
 A. Uhuru Kenyatta B. Daniel Arap Moi  
 C. Jomo Kenyatta D. Mwai Kibaki

55. You have realized that your classmate is taking alcohol. As a good citizen, the best thing for you to do is \_\_\_\_
- Report him to the headteacher
  - Join him in drinking the alcohol
  - Avoid his company completely
  - Advise him on the dangers of taking alcohol.
56. Name the road signs marked 1,2 and 3 Respectively.



- |    |             |             |              |
|----|-------------|-------------|--------------|
|    | Round about | Bumps ahead | No u-turn    |
| A. | Bumps ahead | No u-turn   | Round about  |
| B. | Bumps ahead | Round about | No u-turn    |
| C. | No u-turn   | Round about | Bumps ahead. |
| D. | Bumps ahead | No u-turn   | Round about  |
57. In Kenya, elections are held after \_\_\_\_ years?
- 10
  - 5
  - 2
  - 20
58. What is conflict resolution?
- Act of encouraging disagreement
  - Act of favouring one party
  - Act of resolving a dispute
  - Act of inciting people against one another.
59. Which one of the following crops was grown in traditional agriculture?
- Cotton
  - Sorghum
  - Wheat
  - Tea
60. The head of government in Kenya is the \_\_\_\_
- Prime Minister
  - Queen
  - King
  - President

### CRE

61. Who lived in the garden of Eden \_\_\_\_
- Adam and Sarah
  - Adam and Eve
  - Jacob and Rachael
  - Mosses and Zipporah
62. Who among the following kings wanted to kill baby Jesus?
- David
  - Saul
  - Herod
  - Ahad
63. Goliath the giant was killed by \_\_\_\_
- Solomon
  - Saul
  - Eliab
  - David
64. The name Emmanuel means \_\_\_\_
- God and us
  - God with us
  - The savior
  - God of all people
65. Who were the first people to see baby Jesus \_\_\_\_
- Disciples
  - Shepherds
  - Herod
  - Wisemen
66. Mary and Martha were sisters to \_\_\_\_
- James
  - Jesus
  - Zaccheaus
  - Lazarus
67. John and James were the sons of \_\_\_\_
- Zebedee
  - Solomon
  - Andrew
  - David
68. The baby Jesus was laid in a \_\_\_\_ after He was born?
- Basket
  - Bed
  - Manger
  - Cot
69. The following are the fruits of the Holy Spirit. Which one is not?
- Self control
  - Peace
  - Joy
  - Wisdom
70. Jesus fed 5000 people with \_\_\_\_

- Five fish and two loaves.
  - Five loaves and two fish.
  - Two fish and few loaves.
  - Five loaves and few fish.
71. The old Testament has how many books?
- 66
  - 39
  - 27
  - 37
72. \_\_\_\_ denied Jesus three times.
- Thomas
  - Peter
  - Judas
  - Philip
73. Catholic means \_\_\_\_
- Universal
  - Roman
  - Christians
  - Jewish
74. Jesus was baptized by \_\_\_\_
- Prophet Elijah
  - King Herod
  - Emperor Augustus
  - John the Baptist
75. John your deskmate is suffering from HIV/AIDS. As a friend, what should you do?
- Keep off from him
  - Abuse him
  - Be friendly to him and advise him
  - Tell it to your friends.
76. Jesus turned water into wine at a wedding in \_\_\_\_
- Egypt
  - Cana
  - Kenya
  - Canaan
77. \_\_\_\_ lived with priest Eli in the church.
- Samuel
  - Ham
  - Elicanah
  - Solomon
78. Christians talk to God through \_\_\_\_
- Books
  - Bible
  - Prayer
  - Acting
79. Jesus had \_\_\_\_ disciples.
- 11
  - 24
  - 13
  - 12
80. \_\_\_\_ betrayed Jesus with thirty silver coins.
- Simon Peter
  - Judas Iscariot
  - Joseph
  - Simon of Cyrene
81. Amwayi a class five boy picked five hundred shillings note on his way to the latrine. Which was the best option he should take \_\_\_\_
- Keep in his pocket
  - Take it to the teacher
  - Buy sweets
  - Take it to the parents.
82. The day God rested is called the \_\_\_\_ day.
- Pentecost
  - Easter
  - Sabbath
  - Passover
83. Jesus was born in a town called \_\_\_\_
- Nazareth
  - Jericho
  - Jerusalem
  - Bethlehem
84. Church leaders and helpers should \_\_\_\_
- Be proud
  - Love money
  - Be of good character
  - Be rude.
85. Moses was given the ten commandments on mount \_\_\_\_
- Sinai
  - Olives
  - Jordan
  - Median
86. Abraham wanted to sacrifice his only son \_\_\_\_
- David
  - Isaac
  - Solomon
  - Jacob
87. By washing disciples feet Jesus wanted to teach us about \_\_\_\_
- Faith
  - Unity
  - Service
  - Obedience.
88. Who among the following was the first king of Israel?
- Solomon
  - Saul
  - David
  - Ahab
89. \_\_\_\_ is the mother to Jesus Christ.
- Hannah
  - Ruth
  - Mary
  - Martha
90. \_\_\_\_ saw a burning bush.
- Moses
  - David
  - Ahab
  - John