

GRADE 5

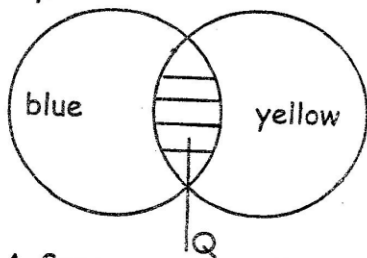
CREATIVE-ARTS-&-SOCIAL-STUDIES

END-TERM-2-2023

FORMATIVE GRADING			
Exceeds Expectations	Meets Expectations	Approaches Expectations	Below Expectations
4 35-50	3 20-34	2 11-19	1 0-10


ART & CRAFT.

- The skill of art that involves drawing man-made or non-living things is.
 - imaginary drawing
 - still life drawing
 - Drawing in memory
 - Artificial drawing
- Nancy wanted to decorate a drawn block letter using coloured sand and glue only. Nancy was making a ____
 - collage
 - montage
 - mosaic
 - printing
- The secondary colour marked Q is likely to be



- Green
- Orange
- Purple
- Red

- Grade five learners were told to identify the process of making clay articles by rolling clay into coils. Which process was right?
 - Coil technique
 - Thumb technique
 - Slab technique
 - Pinch technique
- The type of weave shown below is



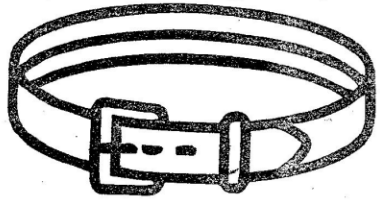
- stich and coil
 - plait weave
 - twine weave
 - check weave
- The technique used in shading the diagram below is



- A. smudging B. rubbing
C. cross hatching D. stippling
7. The following stripe pattern are formed while carry out tie and dye procedure Except?
A. Vertical B. Horizontal
C. Circular D. Rectangular
8. Grade 5 learners were told by their teacher to collect the following materials
(i) bee wax
(ii) source of heat
(iii) plain flat stiff surface
(iv) container
(v) Toothpick
(vi) soap

The learners were about to carry out
A. painting B. crayon etching
C. collage D. mosaic

9. The leather belt drawn below can be decorated through



- A. Burning B. Incising
C. Pinching D. Beading
10. The shading of a drawing to create a dark and light effect is called
A. overlapping B. texture
C. tonal variation D. proportion

MUSIC

11. Wedding folk song are mainly sang to
A. Encourage and advice the initiate
B. Encourage the new married couples.
C. Encourage and motivate people to work.
D. Comfort the mourners.

12. "Ee Mungu twaomba uilinde" This phrase has been derived from _____ verse of East Africa Anthem.
A. Third B. Second
C. First D. Fourth
13. Learners from music club decorated their faces, hands and legs with paints. These decoration are called____
A. Costumes B. Props
C. Ornaments D. Adornments
14. A place or cultural centre people goes to watch folk dance is
A. studio
B. Nairobi Museum
C. Bomas of Kenya
D. National park
15. Lullaby song are usually _____
A. slow and soft B. loud and soft
C. fast and loud D. fast and soft
16. The wind instrument drawn below is called



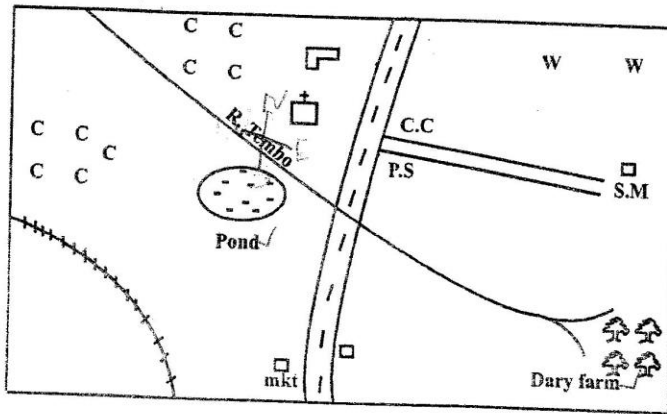
- A. Abu
B. Viringi
C. Chivoti
D. Mulele

17. Which of the following community is correctly matched with their wind instrument
A. Coro - Kikuyu
B. Nzumari - Abakuria
C. Biringi - Giriama
D Chivoti - Akamba
18. Which of these statement is not true about a descant recorder?
A. It is a wind instrument
B. It should be cleaned
C. It is played by blowing
D. It should be properly kept

19. A person who plays instrument is called
- Soloist
 - Respondent
 - Instrumentalist
 - Artist

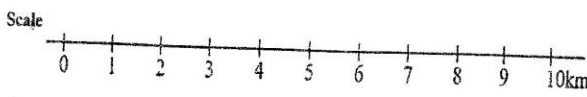
20. A song played by one person is
- quintet
 - Trio
 - Duet
 - Solo

SOCIAL STUDIES.
TEMBO AREA.



Key

- Tarmac road
- Murrum road
- Railway
- Cabbage
- Quarry
- School
- Wheat farm
- Church
- Chief camp
- Police station
- Saw mill

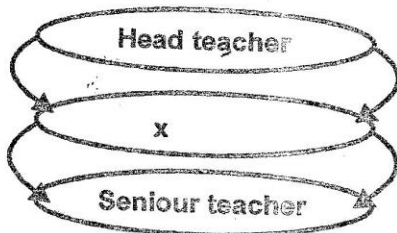


Use the map to answer questions 21 - 25

21. River Tembo flows towards?
- North East
 - North West
 - South East
 - South West
22. Which of the following important social service is missing in Tembo Area?
- Hospital
 - School
 - Church
 - Social hall
23. Which of the following subsistence crops is grown in small scale in Tembo Area?
- Cotton
 - Potatoes
 - Cabbages
 - Flower
24. Tembo Area is headed by
- Chief
 - Senator
 - Governor
 - Commissioner

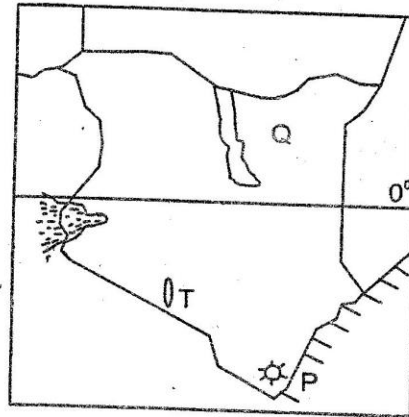
25. Three of the following economic activities are practised in Tembo Area Except?
- Mining
 - Tourism
 - Fishing
 - Dairy farming
26. The following are types of vegetation in Kenya:
- tall trees growing close together
 - trees are evergreen with huge roots
- (ii) There are also climbing plants
- This type of vegetation is called
- Savannah
 - Semi - desert
 - Mangrove
 - Equatorial rainforest

27. Which country border Kenya toward North West
 A. South Sudan B. Somalia
 C. Tanzania D. Uganda
28. The following are messages written by grade 5 about caring for the plants. Which one was wrong?
 A. Avoid stepping on grass
 B. Do not cut down trees branches
 C. Avoid giving water to plants
 D. Weed the trees more times
29. Which of the following is a quality of a good leader?
 A. unjust B. dishonest
 C. caring D. selfish
30. Which of the following community is correctly matched with their language group?
 A. Abaluhya - Bantu
 B. Maasai - Cushites
 C. Redille - Nilotes
 D. Nandi - Semites
31. Who among the following school administrator fit the gap labeled x?



- A. Class teacher
 B. Deputy head teacher
 C. Assistant teacher
 D. Regular teacher
32. Dairy cattle are kept by the farmers to provide them with
 A. Hides
 B. Meat
 C. Eggs
 D. Milk

Use the map of Kenya below to answer the following questions.



33. The region marked Q experiences
 A. Desert climate
 B. Mountain climate
 C. Equatorial climate
 D. Topical climate
34. The historic built environment labeled p is
 A. Nairobi Museum
 B. The Kenyatta house
 C. Fort Jesus
 D. Mount Kenya
35. Which of the following economic activities are carried out in the lake marked T?
 A. Soda ash mining
 B. Inland fishing
 C. Horticultural farming
 D. Subsistence farming

C.R.E

36. Grade 5 Social studies teacher asked his learners to list four ways of giving knowledge and skill in the African tradition. who gave wrong answer
 A. Saidimu - proverb
 B. Meritei - use of books
 C. Naishorua - use of songs
 D. Meleu - story telling

37. Odhiambo always wipes teacher's desk and ensures that it is clean. Select the values that Odhiambo demonstrate ____
- A. honest
B. courage
C. fairness
D. responsibility
38. Which group consist of the gift of the holy spirit only?
- A. Love
B. Kindness
C. Mercy
D. Humility
E. Peace
F. Wisdom
G. Goodness
H. Knowledge
39. Who among the following learners used his God given talent in a wrong way?
- A. Njeri - fetching water for an old woman.
B. Stella - Practising singing in a church
C. Sheilla - Asking people to give her money to help them.
D. Moses - Drawing pictures of great football players.
40. Which of the following is a farm of a child labour?
- A. Looking after the sheep.
B. Washing utensils at home.
C. Selling fruits in the market.
D. Take care of your young sister.
41. The servant of the Roman officer was healed by Jesus because he had
- A. faith
B. love
C. peace
D. money
42. Who was baptised by John the baptist?
- A. Abraham
B. Noah
C. Paul
D. Jesus
43. " ____ so that you may live long on earth" complete the commandment.
- A. Honour your father and mother
B. Keep the sabbath say holy
C. Do not have any other God
D. Do not kill
44. Ananiah and Saphirah died because they
- A. Did not go to the hospital
B. They failed to speak the truth
C. They did not have faith
D. They were very old
45. Prophet Elijah chaledged the prophet of Baal at Mount ____
- A. Olive
B. Sinai
C. Carmel
D. Moriah
46. Jesus was tempted by satan in the wilderness ____ times.
- A. three
B. four
C. five
D. six
47. The following are causes for violation of human life. Which one is not?
- A. Depression
B. Love
C. Anger
D. Poverty
48. The use of Alcohol can bring the following Except?
- A. Early pregnancy
B. School dropout
C. Fight in the family
D. People live in unity
49. Ham, Shem and Japheth were the sons of
- A. Noah
B. Jacob
C. Hannah
D. Naomi
50. Which book is found in the New testament?
- A. Genesis
B. Samuel
C. Judges
D. Ephesians

I.R.E.

36. "Wa arsala alaykum twairan abaabiil"
This verse is from surah
A. Naas B. Fatiha
C. Fiyl D. Lahab
37. Which surah talks about oneness of Allah?
A. Ikhlas
B. Asr
C. Aadiyat
D. Quraish
38. Surah maon teaches us to be kind to _____
A. parents
B. orphans
C. siblings
D. prophets
39. The year when the prophet (SAW) lost his wife Khadija and his uncle Abu Talib was called the year of
A. sorrow
B. resting
C. pilgrimage
D. spirit
40. Angel Raqib is in charge of
A. writing our bad deeds
B. rewarding those who do good
C. punishing the sinners
D. recording our good deeds
41. Allah's attribute AR - rahman means
A. The designer
B. Most forgiving
C. Most Gracious
D. The All knowing
42. Who among the following is referred to as the father of flames?
A. Abu Jahal
B. Abu Bakar
C. Abu Sufyan
D. Abu Lahab
43. Which of the following will spoil wudhu?
A. Fainting B. Eating
C. Swimming D. Talking
44. The urine of a baby boy who does not feed on other foods is said to be
A. heavy najis B. light najis
C. thick najis D. medium najis
45. How many pillars of faith do muslims believe in?
A. three B. five
C. six D. ten
46. The foster mother of prophet was called
A. Amina B. Aisha
C. Halima D. Khadijah
47. Swalah is a pillar of Islam that teaches us on
A. generosity B. punctuality
C. respect D. oneness
48. The minimum amount of wealth on which zakah must be paid is known as
A. Nisab B. Najis
C. Ibaada D. Dhabiha
49. As a muslim, what would you do if you met a physically disabled person on the road?
A. Greet the person from far
B. Ignore the physically disabled person.
C. Read dua and help where necessary
D. Take a picture of him and put him on a facebook.
50. Who would you chose to be your friend while in school?
A. one who is from a wealthy family
B. one who prays and is respectful
C. one who is bright and smart in school
D. one who speaks fluently