

GRADE 4


INTERGRATED SCIENCE

END-TERM-2-2023

FORMATIVE GRADING			
Exceeds Expectations	Meets Expectations	Approaches Expectations	Below Expectations
4	3	2	1
35-50	20-34	11-19	0-10


INTEGRATED SCIENCE

- Grade four pupils gave examples of living things . Which one is Not.
 - Birds
 - Fish
 - Stones
 - plants
- Observe the diagram below and answer the questions below.



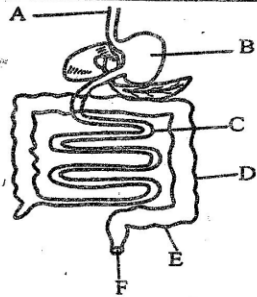
- The illustration above shows that plants?
- Move
 - Grow
 - breath
 - remove waste
- All animals give rise to young one. This is called?
 - Moving
 - Reacting to change of environment.
 - Reproduction.
 - Growth.

- A group of young ones born at the same time to the same mother are known as:-
 - Twins
 - Litter
 - Triplets
 - Siblings
- Animals die because of all the following factors except one. Which one is it?
 - Old age
 - Accidents
 - Eating a lot
 - Diseases
- The chart below shows classification of animals. Complete it by filling the gap?



- The process of breaking down food into small particles that can be absorbed by our bodies is called? _____
 - Breathing
 - egestion
 - digestion
 - igestion

Use the diagram below to answer question 8 and 9.




8. Grade four pupils were asked by their teacher to name the part that absorbs food nutrients to our bodies.
A. B B. C C. D D. A
9. In which part of digestive system is water and mineral salts absorbed:-
A. F B. D C. A D. E
10. Austin a grade four pupil removed a sharp and pointed teeth Which was shaking, Which type of teeth has the above features
A. Incisors B. Canines
C. Premolars D. Molars
11. A grown adult has how many teeth in total.
A. 8 B. 20 C. 28 D. 32
12. Which one of the following pollutants below pollutes air.
A. plastics B. dust C. glass D. papers
13. Which one of the following diseases is caused by drinking polluted water.
A. Malaria B. common cold
C. cholera D. papers
14. Below are causes of water pollution which one is not.
A. Animal waste B. smoke
C. soil D. untreated sewages
15. Name the type of teeth drawn below



- A. Incisor B. Canine
C. molar D. premolar

AGRICULTURE.

16. Identify the type of soil drawn below. It is



- A. loam soil B. clay soil
C. sand soil D. red soil

17. Which type of soil holds the highest amount of water.

- A. Clay soil B. loam soil
C. sand soil D. None

18. When compost manure is ready, it turns _____ in colour.

- A. Red B. dark
C. brown D. green

19. Grade 4 pupils were asked by their teacher to discuss and agree the best time to water the flower bed. What is the possible answer they were likely to give.

- A. In the morning B. Noon
C. afternoon D. Evening

20. The method of water conservation below is known as:-



- A. Sprinkler irrigation B. Mulching
C. Drip irrigation D. Bottle irrigation

21. A scary object which is made using waste materials to scare away small animals in the farm is known as:-

- A. Marionette B. sculpture
C. Scarecrow D. Puppets

22. All the following animals listed below are domestic animal. Which one is not.

- A. goat B. fish C. donkey D. sheep

23. Mr Tembo is removing excess branches from fruit tree. Removing of excess branches is called

- A. Harvesting B. Thinning
C. Pruning D. Weeding

24. A young one of a sheep is called:-

- A. calf B. lamb C. kid D. cub

25. The following digital devices are used to store information on domestic animals.

Which one is Not?

- A. Flash disk B. DVD
C. Spring File D. Memory card

HOMESCIENCE.

26. Grade four pupils listed down all the requirements of good health. Which one is Not?

- A. Food B. play C. Rest D. Bicycle

27. Which one of the following is a common illness that affect people around your locality.

- A. Ebola B. cough
C. yellow fever D. measles

28. Shantel was given a fruit by her father. What health practice is she supposed to practice.

- A. Eat the fruit without washing.
B. Wash her hands and not the fruit.
C. Wash her hands and the fruit before eating.
D. Wash the fruit peeling after eating.

29. Name the item shown below



- A. Broom B. Mop C. Dustpan D. Shovel

30. Your parent asked you to clean your canvas shoes. Which of the materials below will you use

- A. Shoe polish B. A piece of cloth
C. shoe brush D. Nail

31. Three of the following materials below are used to make shoes except?

- A. Leather B. Plastic C. Canvas D. Metal

32. A grade four learner was asked to name an example of fuels used at home. Which one was correct.

- A. Petrol B. Gas C. Diesel D. Spirit

33. When using gas, what safety measure should you think about.

- A. Do not overload the socket.
B. Check the gas cylinder to ensure its not leaking.
C. Don't sleep with a burning jiko
D. Don't place a kerosene stove close to clothes.

34. Faith wanted to do shopping, she wrote the following piece of paper.

Item	Quantity	Amount
Rice	1kg	150
Salt	1 kg	50
potatoes	1 bucket	500
Total		700

The picture above shows _____

- A. loss B. shopping list
C. discount D. profit

35. Below are important reasons why one should make a shopping list except one. Which one?

- A. it saves money .
B. it wastes time.
C. it reduces wastage.
D. helps to know amount of money you need.

PHYSICAL AND HEALTH EDUCATION.

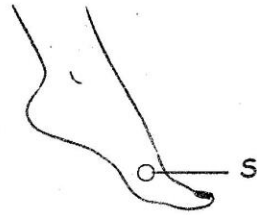
36. Grade four pupils gave examples of races that are performed in an athletics track. Which one is not?

- A. 100 metres B. 200 metres
C. Long jump D. 400 metres

37. Which game below is played for fun and enjoyment?

- A. Balloon game B. 800 metres race
C. monopoly D. Hoola- hoop

38. This part of the foot is known as _____



- A. Ball of the foot B. arch
C. Nails D. ankle

39. Your group was discussing on materials appropriate for making a ball. Which one is not.

- A. Wood B. Plastic bags.
C. Old cloths . D. Strings

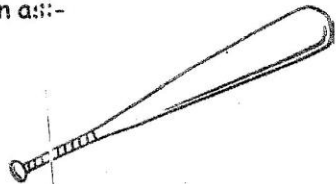
40. The skill of passing a ball to a partner over a short distance is known as _____.

- A. Overhead pass . B. Under arm pass.
C. Chest pass . D. Bounce pass.

41. Three of the following parts are used to pass ball in soccer except one .Which one is it?

- A. Outside foot B. Inside foot
C. Instep pass D. ball of the foot.

42. The rounder equipment drawn below is known as:-



- A. Rounders post. B. Rounders bat.
C. Stick. D. Rounders ball.

43. In rounders a person striking a ball into play is called:-

- A. Batsman B. Fielder
C. Striker D. Baller

44. Which one of the materials below can be used to improvise a rope.

- A. Nylon . B. Old cloth.
C. Metal bar. D. Rubber ba

45. Grade four was discussing on lifestyle diseases that can be avoided by skip a rope. Which one of the following were they likely to mention.

- A. Malaria B. Chorela
C. Obesity D. Covid 19

46. The art of balancing on ones hands supporting the body in an inverted position with the feet in the air is known as _.

- A. Head stand B. Hand stand
C. Backward roll D. Forward r

47. Grade four pupils were discussing examples of gymnastic skills. Which is correct.

- A. Rope skipping . B. Juggling.
C. Somersault. D. Under arm p

48. Three of the following materials below are used to make floating devices. Which one is not.

- A. Tyre tube B. Plastic
C. Metal D. Drywood.

49. The Swimming technique drawn below is known as _____.



- A. Breast stroke. B. Butterfly.
C. Backstroke. D. Free style

50. Juma was asked to name one basic ski swimming. Which one was correct.

- A. Arm pull B. Diving
C. Arm recovery D. Front Cra