

GRADE 4

CREATIVE-ARTS-&-SOCIAL-STUDIES

END-TERM-2-2023

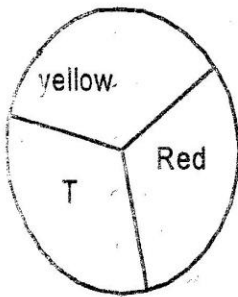
| FORMATIVE GRADING | | | |
|----------------------|--------------------|-------------------------|--------------------|
| Exceeds Expectations | Meets Expectations | Approaches Expectations | Below Expectations |
| 4 35-50 | 3 20-34 | 2 11-19 | 1 0-10 |

ART AND CRAFT

1. The smearing of colour on a surface is called _____.

- A. collage B. smudging
C. printing D. Drawing

2. The colour wheel below shows primary colours. The part labeled T represent:-



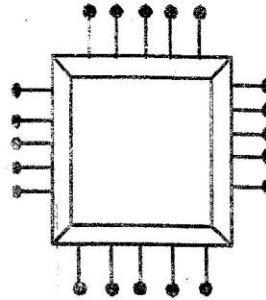
- A. Blue
B. Green
C. Purple
D. Orange

3. _____ colour is added to others to make them more bright.

- A. Black B. Blue
C. White D. violet

4. A frame structure below is used in weaving is called:-


- A. warps B. weft
C. loom D. frame



5. Which of the following item is made through modeling?

- A. pot B. mat
C. cooking stick D. Belt

6. The diagram below represent:-



- A. photography
B. calligraphy
C. imaginary drawing
D. still life drawing

7. Which of the following is a dry media that can be used to create tonal variation strip?

- A. ink
B. paint
C. water
D. charcoal

8. Puppets can be used for the following except?

- A. Educate people
B. Entertain people
C. Abuse people
D. Earn a living

9. Which technique is not used in pottery?

- A. coiling
B. slabbing
C. pinching
D. stitching

10. Grade 4 art teacher asked his learners to collect

- (i) sharp tooth pick
(ii) ink
(iii) wax
(iv) plain plain

The learners were preparing material needed for:-

- A. crayon etching
B. tie and dye
C. paper craft
D. painting

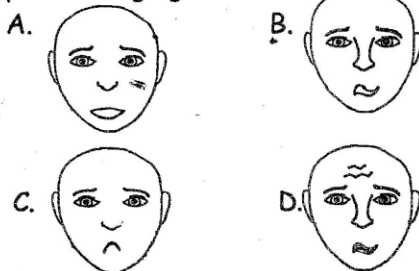
11. The loudness and softness of sound is:-

- A. pitch
B. volume
C. Rhythm
D. harmony

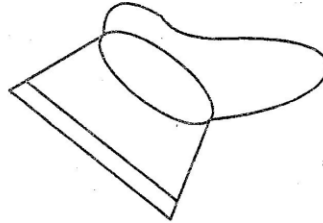
12. "Ooh God is good" This is a type of :-

- A. Lullaby song
B. Singing game
C. Sacred song
D. patriotic song

13. Which facial expression shows a person singing?



14. The instrument below is tied around an ankle. it is called



- A. kayamba
B. marimba
C. kigamba
D. drum

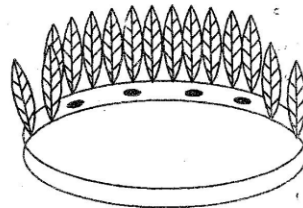
MUSIC

15. "Amkeni ndugu zetu" The phrase is found in the _____

verse of our national Anthem

- A. First
B. Second
C. Third
D. Fourth

16. Clothes that are worn during folk dance are called



- A. costume
B. Adornment
C. props
D. ornaments

17. Which of the following is not a reason for singing?

- A. To get entertained
B. To show off
C. To educate people
D. To pass information

18. The instrument below is played through :-



- A. Hitting
B. Blowing
C. shaking
D. Plucking

19. The part labeled Y is called:-

- A. Resonator
B. Membrance
C. Lace
D. Peg

38. Our _____ are temples of the holy spirit.
 A. Family
 B. Church
 C. Parent
 D. Bodies
39. Which is the first book in the Bible.
 A. Revelation
 B. Genesis
 C. Exodus
 D. Mathew
40. The Bible has _____ books.
 A. 50
 B. 27
 C. 66
 D. 39
41. Which one of the following is not an attribute of God?
 A. Holy
 B. Unforgiving
 C. Merciful
 D. Creator
42. Prophet Elijah raised the son of the widow of _____.
 A. Shunem
 B. Jairus
 C. Zarephath
 D. Nain
43. We remember death and resurrection of Jesus during:-
 A. Christmas
 B. Madaraka
 C. Easter
 D. Jamhuri
44. Which one of the following is a fruit of the holy spirit?
 A. Kindness
 B. Jealousy
 C. Selfish
 D. Hatred
45. Amnon raped his step sister _____.
 A. Bilhah
 B. Tamar
 C. Ruth
 D. Tabitha
46. _____ was the father of Samuel.
 A. Elikana
 B. Joseph
 C. Zacharia
 D. Isaac
47. I am fearfully and wonderfully made by God in his own _____.
 A. Colour
 B. Hands
 C. Size
 D. Image
48. Children should _____ their parents.
 A. Send
 B. Respect
 C. Abuse
 D. Disobey
49. Who was a dreamer?
 A. Joseph
 B. Moses
 C. Abraham
 D. Jacob
50. Jesus healed people who came to him because of their _____.
 A. Faith
 B. Money
 C. Family
 D. Courage