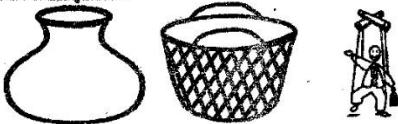







GRADE 5 END TERM 3 MARCH 2022



CREATIVE ARTS & SOCIAL STUDIES

ART & CRAFT

1. Write one product of leather work. _____
2. Fill the gaps appropriately.
Yellow + _____ = orange
3. _____ + blue = purple.
4. Blue + yellow = _____
5. _____ + red = tertiary colour.
6. Colour the one made using coil technique.

7. Draw one item that can be carved from softwood.

8. Below is a drawing of a cooking stick.

 Decorate it using different colours.
9. Draw a complete human head.

10. Create tonal value on the following forms.


11. During cutting and pasting technique, _____ can be used to provide a surface for sticking.
12. How are sisal fibres for rope twining prepared?

13. Rod puppets are also called _____ puppets.
14. Name the type of puppet drawn below.


15. The item below can be used in painting.

 Name it _____
MUSIC
1. A descant recorder produces sound by _____
2. _____
3. _____
4. _____
5. Name the following wind instruments.


6.  _____

7.  _____

8. Sing the East African Community Anthem (EACA).

9. Write the last line of the first verse of the National Anthem in Kiswahili.

Write two groups of percussion instruments.

10. _____

11. _____

12. Name the dance formation demonstrated below.



Write the solfa notes corresponding with the following notes.

13. Note B

14. Note A

15. Note G

SOCIAL STUDIES

1. Name one crop that can be grown in a sack garden.

2. The element of a map that interprets the symbols used is the


3. Why is farming mainly practised in highland regions in our country?

Draw the following modes of communication.

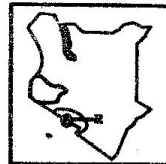
4. Mobile phone.


5. Television.


6. Radio.


7. Newspaper.


8. Name the National park marked R




Name three minerals mined in Kenya.

9. _____

10. _____

11. _____

Draw road signs that pass the following informations.

12. Pedestrian crossing 

13. Bumps ahead.

14. Danger ahead.

15. The school administrator in charge of discipline is the _____

Write one tribe under the following language groups.

16. Bantus _____

17. Cushites _____

18. River lake Nilotes _____

Write two duties of a county governor.

19. _____

20. _____

CHRISTIAN RELIGIOUS EDUCATION

1. Write one disciple of Jesus Christ

2. List one fruit of the Holy Spirit.

3. Yohana always follows instructions both in schools and at home. Which Christian value does Yohana portray?

4. Write the first line of the Lord's prayer

5. What do Christians learn from Jesus' miracle of healing the paralysed man?

6. Write one event that took place during the baptism of Jesus.

7. Whose daughter did God use to rescue Moses?

8. King _____ asked for wisdom from God.

9. The act of not revenging is called _____

10. John the Baptist was born in _____

ISLAMIC RELIGIOUS EDUCATION

1. What should Muslims say before reading the Quran?

2. Cleaning oneself before praying is called _____

3. Prophet Muhammed (SAW) was buried in _____

4. When do we say Jazakallahu Khayran?

5. The surah also called "small kindness" is surah _____

6. What is the meaning of the attribute Al-Malik?

7. Surah _____ is read for protection.

8. The prophets who were very patient are referred to as _____

9. In ancient times, the Quraish used to worship _____

10. Write one nullifier of ablution.
