

GRADE 4 END TERM 3 MARCH 2022

INTEGRATED SCIENCE

SCIENCE & TECHNOLOGY

1. In which part of a computer is a typed document displayed?


2. Maina wants to select a section of a typed sentence on the computer. Which device should he use?

3. Write one digital device that can be used to send a text message.

State the functions of the following types of teeth.

4.  _____

5.  _____

6.  _____

7. Name the tooth drawn below.



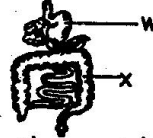
8. Identify a dust mask by ticking it.



9. Mr. Mkala brought some water and a stone to class for an experiment. In which state of matter is the stone? _____

10. water? _____

Study the diagram below.



11. Name the part labelled W

12. Write the function of the part marked X

Use the grid below to write three examples of invertebrates

C	V	L	G	F	J	N	P
B	D	O	W	L	K	R	T
H	O	U	S	E	F	L	Y
L	I	S	H	A	M	V	B
X	M	E	I	Z	O	A	R

13. _____

14. _____

15. _____

AGRICULTURE




1. Name the diagram drawn below.



2. Wahu and Kantai were playing with soil. They noticed that they could make long ribbons with the soil. Which type of soil were they likely to be playing with?

3. Kajembe is a farmer in Kiria-ini county. State one way he uses water in his farm. _____

Complete the table below.

	Domestic animal	Name	Product
4.		Hen	
5.			Pork
6.		Cow	

7. _____ soil has large particles.

Name two crops that can be grown in a container garden.

8. _____

9. _____

Identify the following crops grown in our county

10.  _____

11.  _____

12.  _____

13. Draw and colour a nursery bed.



Write one way of living better with the following small wild animals.

14. Mongoose

15. Monkeys _____

HOME SCIENCE

1. Write one locally available material that can be used to make a jump rope.

2. Name a type of shoes that can be made using rubber.

3. Three children, Eliza, Jacob and Zari ate food as shown below:
Eliza: Ugali, meat, milk.
Jacob: Sausage, eggs, rice.
Zari: Avocado, fish, rice.
Among them, who ate a balanced diet?

4. Draw and colour one fragile kitchen utensil.



5. Mapunda used water only to cook his yams. What is the name of this method of cooking?

Name the fuels used in each of the following

6.  _____

7.  _____

8.  _____


Give one example in each case.

9. Energy giving foods.

10. Body building foods.

11. Protective foods.

The following tools are used in needlework. Name them.



PHYSICAL HEALTH EDUCATION

1. In which part of an athletic work do athletes start a race?

2. Name the technique shown below.



3. Grade four learners at Elimukibao school were asked to name the technique demonstrated below.



They gave their answers as follows:

Macharia: Over arm pass.

Hussein: Catching.

Ouma: Overhead throw.

Who gave the correct answer?

4. What does letter B stand in the ABC of first aid?

5. What is the importance of following instructions and rules in games?

6. Who throws the ball to the batter in a rounder's game?

Write two types of throw associated with frisbee game.

7. _____

8. _____

Write two components of health related fitness.

9. _____

10. _____

11. Mukami's games teacher asked her to state the importance of being healthy during sports. What was her right answer?

The following items are found in the first aid kit. Name them.



12. _____



13. _____



14. _____



15. _____