







GRADE 4 END TERM 3 MARCH 2022 CREATIVE ARTS & SOCIAL STUDIES

ART & CRAFT

Re-draw the following parts of the body

1. 
2. 
3. 

Tick a product of leather work

4.   

5. Study the illustration below.



Name the technique illustrated above _____


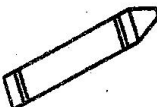

6. Name one material you can use to decorate a pot.

7. Draw and colour a glove puppet.




8. Folders with pleats are called _____ folders.

The following items can be used in picture making. Name them.


9.  _____
10.  _____
11.  _____

12. Tick an item that can be made from sisal fibre

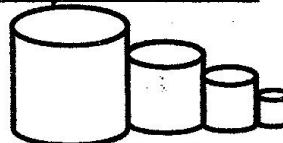


13. Rewrite this message in the space below

**WASH YOUR HANDS
BEFORE EATING**



14. Create dark and light effects on the cylinders below.




15. Create tonal value on the strip below.



MUSIC

1. Study the diagram below.



The process demonstrated above is called _____

2. A traditional song sung by a community is called a _____ song.

Name the parts shown



- 3. _____
- 4. _____
- 5. _____

6. How are percussion instruments played? _____

7. Music instruments that do not produce a melody are called _____

Write three elements of dance

- 8. _____
- 9. _____

10. _____

Name each of the following dance formations.

- 11. 

12.



Write two examples of French rhythms.

13. _____

14. _____

15. Write one element of music.

SOCIAL STUDIES

Which compass direction is found between:

1. south and east?

2. north west and south west?

3. north east and north west

4. Our country measures _____ km².

State the seasons in which the following activities take place.

5. Harvesting _____

6. Weeding _____

7. Irrigation _____

8. How do parents depend on teachers? _____

9. Peoples way of life is their _____

10. The type of trade whereby goods were exchanged with goods is called _____ trade.



the following economic

11.



12.



13.

Name the industries from which we get the following products.

14. Yoghurt

15. Cake

16. Maize flour

17. A short statement that shows the aims of a school is called a school _____

Write three qualities of a good community leader.

18. _____

19. _____

20. _____

CHRISTIAN RELIGIOUS EDUCATION

1. What did Baalam's donkey do when it saw an angel on its way?

2. Your friend tells you to sneak out of school during class time to go and buy an exercise book. Which choice should you make?

3. Re-arrange the letters below to write an attribute of God.

i m g t h
y

4. In the Bible, _____ was called a dreamer.

5. What did Samson use to kill a lion?

6. There are _____ books in the New Testament.

7. The _____ is referred to as the house of God.

8. Write one parable of Jesus Christ

9. How many lepers did Jesus heal?

10. Telling the truth always is called

ISLAMIC RELIGIOUS EDUCATION

1. The ninth month in the Islamic calendar is _____

2. The prophet who was sent to the whole world is prophet _____

3. _____ is used to call Muslims for prayers.

4. How many rakaats are there in Jumuah prayer? _____

5. The first swalah of the day is called _____

6. God gave us _____ for sight.

7. The wise sayings of the prophet are called _____

8. How many ayahs are there in surah Al-Fatiha?

9. What do we say after eating?
