

GRADE 1 END TERM 3 MARCH 2022 MATHEMATICS

NAME

Learner's Number Gender Boy Girl

School name School code

SCORING GUIDE

The grid below is to be filled by the teacher after marking the learner's work.

| Learning Areas | Score | Exceeds Expectation | Meets Expectation | Approaches Expectation | Below Expectation |
|--------------------|-------|---------------------|-------------------|------------------------|-------------------|
| Numbers 1-10 | | | | | |
| Measurements 11-20 | | | | | |
| Geometry 21-25 | | | | | |

NUMBERS

Write in symbols

1. Thirty nine _____
2. Forty five _____
3. Write the place value of 8 in 98.

4. Fill in the box below.



Write in words.

5. 8 _____
6. 4 _____
7. Add: $5 + 3 =$

8. Work out:

$$\begin{array}{r} 80 \\ -60 \\ \hline \\ \hline \end{array}$$

9. Take away 7 from 27.

10. Which digit is in the tens place value in 64?


MEASUREMENT

11. Colour longer ones only.

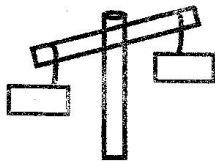
12. How many hold the same?



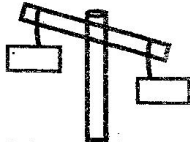
13. How many are short?



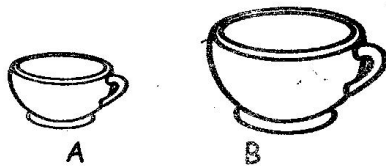
14. Colour the heavier one.




15. Colour the lighter one.



16. Which one holds more?



17. Tick the one that holds less.




18. The first day of the week in school is _____
(Friday, Saturday, Monday)

19. The last month of the year is _____

(June, January, December)

20. Colour a need.



GEOMETRY

Draw the following lines

21. Curved line



22. Straight line

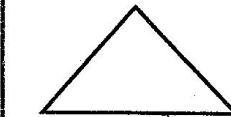


Make patterns using the shapes below.

23.



24.



25.

