

GRADE 5 MID TERM 3 DECEMBER 2021
SCIENCE & TECHNOLOGY

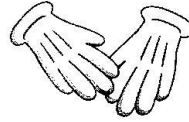
1. Name five examples of non-flowering plants

(5mks)

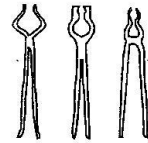
- a) _____
- b) _____
- c) _____
- d) _____
- e) _____

2. Identify these materials used to handle harmful plants. (3mks)

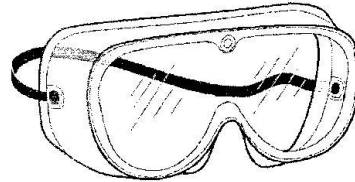
a)



b)



c)



3. Give two importance of fungi.
(2mks)

a) _____

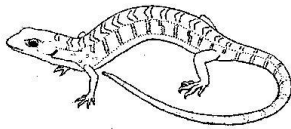
b) _____

4. Identify as vertebrate or invertebrate (5mks)


a)



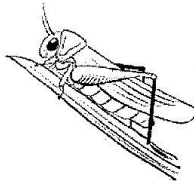
c)



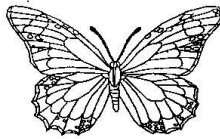
e)



b)



d)



5. Write down five characteristics of amphibians. (5mks)

a) _____

b) _____

c) _____

d) _____

e) _____

6. Name three types of human skeletal muscles (3mks)

a) _____

b) _____

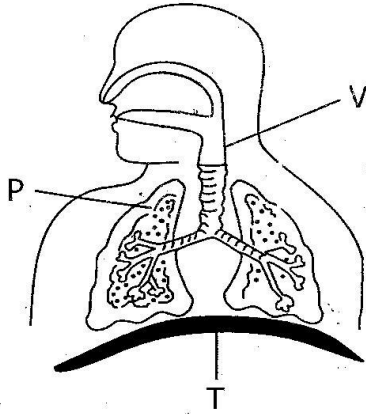
c) _____

7. Write one function of each of the following parts of the human skeleton (2mks)

a) The skull _____

b) The backbone _____

8. The diagram below shows parts of the breathing system



Name the parts labelled P, V, and T (3mks)

- P _____
- V _____
- T _____

9. Write down four examples of illnesses that affect the breathing system (4mks)

- a) _____
- b) _____
- c) _____
- d) _____

10. Give two ways of preventing tuberculosis (2mks)

- a) _____
- _____
- b) _____
- _____

11. Write down three signs or symptoms of typhoid. (3mks)

- a) _____
- b) _____
- c) _____

12. Write two ways of preventing and managing bilharzia (2mk)

- a) _____
- b) _____

13. Name two examples of internal parasites (2mks)


- a) _____
- b) _____

14. Write down three ways of preventing external parasites (2mks)

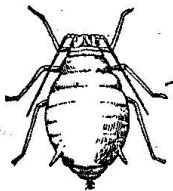
- a) _____
- b) _____

15. Identify and name these parasites (2mks)

a)



b)



16. Give one way of caring for each of the following sense organs (3mks)

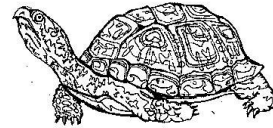
a) The skin - _____

b) The ears - _____

c) The eyes - _____

17. Put the following animals in their correct group (2mks)

a)



b)