

GRADE 5 MID TERM 3 DECEMBER 2021
HOMESCIENCE & AGRICULTURE

HOMESCIENCE

1. A visitor came to our school and when addressing pre-teen boys and girls she noticed the following physical changes. (5mks)

- i) Increase in weight and height
- ii) Broadening of waist and hips
- iii) Broadening of chest and shoulder
- iv) Breasts development

Classify the changes

Physical changes in pre-teen boys	Physical changes in pre-teen girls
i) _____	i) _____
ii) _____	ii) _____
iii) _____	iii) _____

2. Write down three things you do to ensure you practise personal hygiene. (3mks)

- a) _____
- b) _____
- c) _____

11. Write three importance of preparing a shopping list (3mks)

- a) _____
- b) _____
- c) _____

12. Name two methods of cooking food. (2mks)

- a) _____
- b) _____

(Total marks 30)

AGRICULTURE

1. Name three farming practices that people can use to conserve water in their farms (3mks)

- a) _____
- b) _____
- c) _____

2. Use the words in the box to fill in the blanks (5mks)

mulching, soil erosion, runoff, soil recovery, cover cropping

- a) After heavy rainfall, some water does not sink into the ground. It runs on the ground surfaces. This water is known as _____
- b) The process of laying plant materials on the soil surface to reduce evaporation is known as _____
- c) The practice of growing crops that cover the soil to reduce evaporation of water is known as _____

d) The process by which top soil is carried away by wind or water from one place to another is known as _____

e) The process of collecting soil from soil deposition sites to replace the top soil is called _____

3. Write down three methods of preventing wild animals from destroying our crops and domestic animals without killing them (3mks)

- a) _____
- b) _____
- c) _____

4. Name two places where materials for planting climbing fruits can be obtained in the environment (2mks)

- a) _____
- b) _____

5.




What do you call this method of caring for a young climbing fruit plant? _____ (1mk)

6. Apart from the method shown above name two other methods a farmer can use to care for young climbing fruit plants in his farm (2mks)

- a) _____
 b) _____

7. Draw, name and write the use of any gardening tool. (3mks)



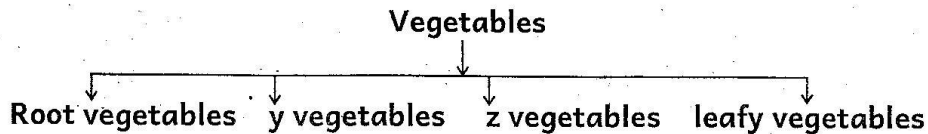
Name: _____

Use _____

8. List down three legumes found in your locality (3mks)

- a) _____
 b) _____
 c) _____

9. Complete the table below by filling in the gaps



i) X _____ i) spring onion
 i) tomato i) V _____

a) What can you write in the letters labelled (4mks)


x _____

y _____

z _____

v _____

10. Draw and name one domestic animal that is used for transporting people and goods (2mks)



11. Name the tool that can be used to do the following work in our garden. (2mks)

a) Watering plants

b) Weeding the plants

(Total 30 marks)