

GRADE 5 MID TERM 3 DECEMBER 2021
ART AND CRAFT & MUSIC

ART AND CRAFT

1. What do you call the type of drawing that involves non-moving objects?
_____ (1mk)


2. What are the three categories of colours? (3mks)
a) _____ b) _____
c) _____

3. Write down two techniques of picture making that involve cutting and pasting materials (2mks)
a) _____ b) _____
c) _____

4. List **four** elements of art you can use when creating a still-life composition (4mks)
a) _____ b) _____
c) _____


5. A technique of creating value by use of lines that cross each other is referred to as _____ (1mk)
6. The art and craft teacher at Makindu Academy asked grade five learners to draw their friends by looking at them. What do you call this type of drawing? _____ (1mk)
7. Write down three locally available materials you can use to weave a mat (3mks)
- a) _____ b) _____
c) _____

8. Name and draw one traditional item made of leather (2mks)



9. Write your name using free hand block lettering (2mks)

10. Draw a cup and shade it to create dark and light effect (1mk)



(Total 20 mks)

MUSIC

1. List three types of songs with their definitions. (6mks)

a) _____

b) _____


c) _____

2. _____ is a song of special importance to a group of people, organisation or a country. (1mk)

3. Write the first verse of the East African Community Anthem. (2mks)

4. A song that belongs to people of the same community is known as _____ (1mk)

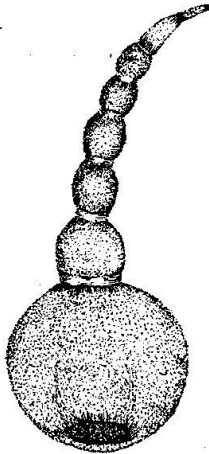
5. Name and draw any musical instrument of your choice. (2mks)



6. How is the musical instrument drawn in question 5 played? (1mk)

7. Is the instrument drawn a wind, string or percussion instrument?(1mk)

8. Name the following musical instrument (1mk).



9. Fill in the gaps (3mks)

a) The specially designed clothes, hides or skins worn by participants in a folk dance are called _____

b) The beads, necklaces, bracelets and anklets used by dancers are commonly known as _____

c) The decoration of bodies of dancers using paints to make patterns is known as _____

10. The highness or lowness of sound in music is known as _____ while the movement of musical sounds in a song is called _____

(2mks)