

**GRADE 4 MID TERM 3 DECEMBER 2021**  
**HOMESCIENCE & AGRICULTURE**

**HOME SCIENCE**

1. Name and draw two play items used in your locality. (2mks)

a)

\_\_\_\_\_

b)

\_\_\_\_\_

2. Write down **three** healthy practices that can prevent you from becoming ill. (3mks)

a)

\_\_\_\_\_

b)


\_\_\_\_\_

c)

\_\_\_\_\_

3. Name the following cleaning tools and write their uses. (6mks)

a)



Name: \_\_\_\_\_

Use: \_\_\_\_\_

b)



Name: \_\_\_\_\_

Use: \_\_\_\_\_

c)



Name: \_\_\_\_\_

Use: \_\_\_\_\_

4. How do you care for and store the following cleaning tools and materials after cleaning. (5mks)

Cleaning tools and material	Care and storage
a) Basins and buckets	
b) Brushes	
c) Dustpans	
d) Floor clothes	
e) Brooms and mops	

5. List down **three** materials that can be used to make different types of shoes people wear. (3mks)

- a) \_\_\_\_\_  
 b) \_\_\_\_\_  
 c) \_\_\_\_\_

6. Name **four** types of fuels used by people in various homes. (4mks)

- a) \_\_\_\_\_  
 b) \_\_\_\_\_  
 c) \_\_\_\_\_  
 d) \_\_\_\_\_

7. What do you use when making your bed at home? Write **three** things.

(3mks)

- a) \_\_\_\_\_  
 b) \_\_\_\_\_  
 c) \_\_\_\_\_

8. Any material that is used to produce heat or light in our homes is known as \_\_\_\_\_ (1mk)

9. How do you conserve electricity at home or in school? (1mk)

\_\_\_\_\_

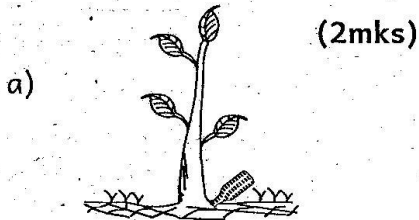
10. Draw a packet of maize flour. On it write the expiry date and the manufacturing date. (2mks)

## AGRICULTURE

1. Draw any form of kitchen garden that you have ever seen. (1mk)

2. What was planted in that kitchen garden you drew in question 1 above? \_\_\_\_\_ (1mk)

3. Identify the following farming practices that conserve water. (2mks)




4. Grade four learners at Makutano primary school planted fruit tree seedlings in their school compound. How can they protect their seedlings from being damaged? (2mks)

- a) \_\_\_\_\_  
b) \_\_\_\_\_

5. Write down three things that fruits provide to our bodies. (3mks)

- a) \_\_\_\_\_  
b) \_\_\_\_\_  
c) \_\_\_\_\_

6. Draw and colour a scarecrow. (1mk)



7. What is the function of a scarecrow? \_\_\_\_\_ (1mk)

8. Match the domestic animal with its use. (4mks)

<u>Domestic</u>	<u>Use</u>
<u>animal</u>	
a) Donkey	Protection
b) Cat	Source of food
c) Cow	Carrying heavy loads.
d) Dog	Companionship

9. What are the various uses of water in a farm. Write **two** uses.

(2mks)

- a) \_\_\_\_\_
- b) \_\_\_\_\_

10. What are the importance of compost manure. (1mk)

- a) \_\_\_\_\_
- b) \_\_\_\_\_

11. List **three** types of soil. (3mks)

- a) \_\_\_\_\_
- b) \_\_\_\_\_
- c) \_\_\_\_\_

12. Name any **four** materials you can use when making compost manure. (4mks)

- a) \_\_\_\_\_
- b) \_\_\_\_\_
- c) \_\_\_\_\_
- d) \_\_\_\_\_

13. Grade four teacher at Tia Bidii Academy provided the learners with three tomato fruits during Agriculture lesson. He asked them to prepare tomato seeds as she observed. What steps did they follow? (5mks)

- a) \_\_\_\_\_
- b) \_\_\_\_\_
- c) \_\_\_\_\_
- d) \_\_\_\_\_
- e) \_\_\_\_\_