

**GRADE 2 MID TERM 3 DECEMBER 2021
MATHEMATICA ACTIVITIES**

1. NUMBERS.(35marks)

1. Count and write a multiplication statement for example (10mks)

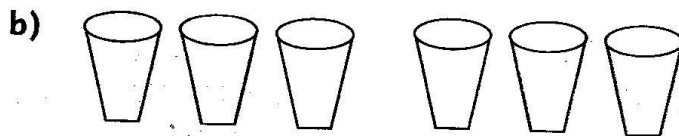
00 00 00

00 00 00

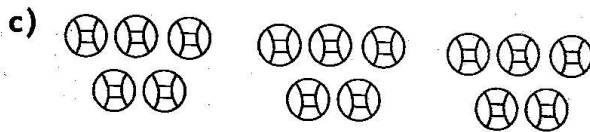
$4 + 4 + 4 = 4 \times 3 = 12$




_____ + _____ + _____ = _____ x _____ = _____



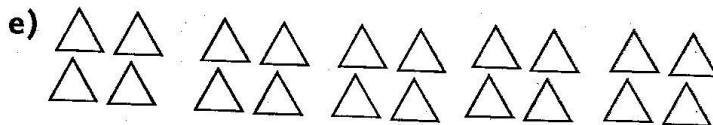
_____ + _____ = _____ x _____ = _____



_____ + _____ + _____ = _____ x _____ = _____



_____ + _____ = _____ x _____ = _____



_____ + _____ + _____ + _____ + _____ = _____ x _____ = _____

2. **Subtract (5mks)**

a) Maria had 6 pencils. 4 pencils got lost. How many pencils remained?

b) 18

$- 14$

c) 69

$- 25$

d) 78

$- 30$

e) 40

$- 10$

3. **Add (5mks)**

a) A class has 20 boys and 24 girls. How many pupils are there in the class? _____

b) 54

$+ 36$

c) 30

$+ 27$

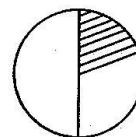
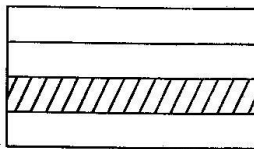
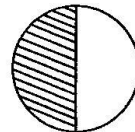
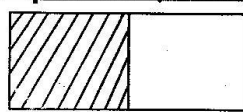
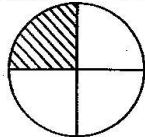
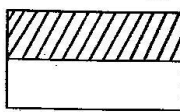
d) 50

$+ 40$


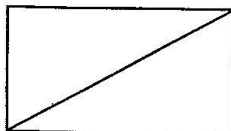
e) 38

$+ 22$

4. **Tick all the fractions that show a quarter (3mks)**



5. **Shade a half (2mks)**



6. **Write these numbers in figures (5mks)**

a) Twenty seven = _____

b) Forty one = _____

c) Fifty nine = _____

d) Eighty six = _____

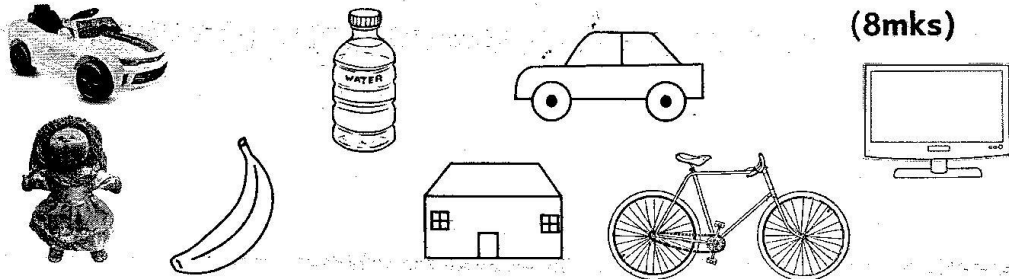
e) Seventy = _____

7. Count and write how many (5mks)

- a) I have _____ fingers. b) I have _____ toes.
 c) I have _____ eyes. d) I have _____ legs.
 e) I have _____ ears.

2. MEASUREMENTS. (10marks)

1. Put these things as either needs or wants in the following table.



(8mks)

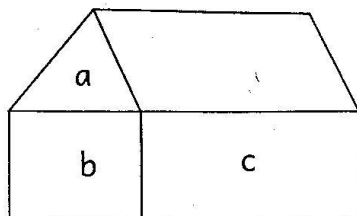
Needs	Wants

2. Fill in the missing days (2mks)

Friday, _____, Sunday, _____

3. GEOMETRY. (5marks)

1. Name these shapes (3mks)



- a is _____
 b is _____
 c is _____

2. Name the shapes of these objects (2mks)

- a) Sun _____
 b) Table _____

TOTAL = 50 Marks