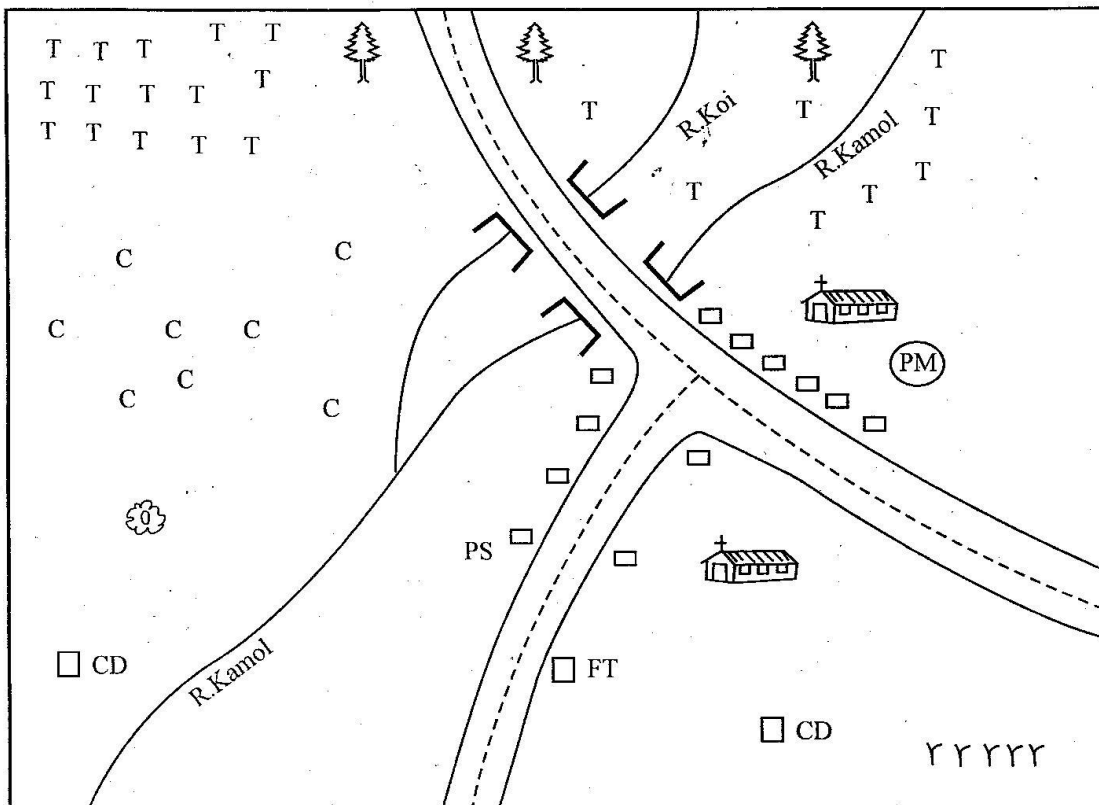


**CLASS 6 MID TERM 3 DECEMBER 2021
SOCIAL STUDIES & RE**

KAMOL AREA



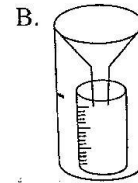
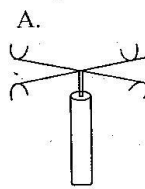
KEY

	Church	FT	Factory	YYY	Grass
	Buildings	PS	Police Station		Forest
	River and bridge	PM	Posho mill		Quarry
TTT	Tea		Tarmac road		
CCC	Coffee	CD	Cattle dip		

Study the map of Kamol Area above and then answer questions 1 to 7.

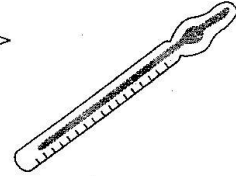
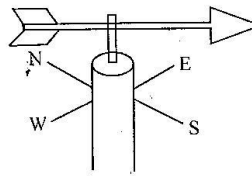
- River Kamol flows towards which direction??
A. North East. B. South East.
C. North West. D. South West.
- The **main** religion of the people in Kamol area is likely to be
A. Christianity. B. Islam.
C. Hinduism. D. Traditionalism.
- The **main** economic activity in Kamol area is likely to be
A. farming. B. fishing.
C. pastoralism. D. tourism.
- A young man was caught by the residents of Kamol town while breaking into a shop. Which was the best action that the residents were supposed to take?
A. Take him to the police station.
B. Take him to the church.
C. Tell the young man's parents.
D. Ignore the young man.
- What is the climate of the area to the North West of Kamol town?
A. Hot and wet.
B. Cool and dry.
C. Cool and wet.
D. Hot and dry.
- Which evidence in the map shows that there is security in Kamol area?
A. Shops. B. Tarmac road.
C. Church. D. Police station.
- What is the direction of the posho mill from the factory?
A. North West.
B. North East.
C. South East.
D. South West.
- Which economic activity was **mainly** carried out by the Wadawida?
A. Mining. B. Pastoralism.
C. Farming. D. Fishing.
- When does the land breeze occur? During
A. the day. B. the night.
C. midnight only. D. morning only.
- Which mining method is used to mine flourspar in Kerio Valley?
A. Deep shaft. B. Open cast.
C. Scooping. D. Dredging.

- Which weather instrument is used to measure temperature of a place?





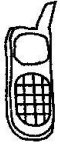





C.

D.

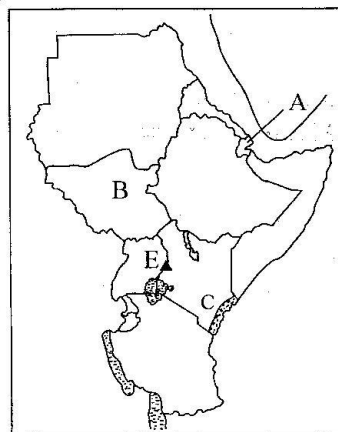


- Which one of the following shows programme of activities of a school?
A. School vision. B. School logo.
C. School routine. D. School motto.
- Which one of the following is a social function of soil?
A. Used to bury people.
B. Used to make bricks.
C. Used for construction.
D. Used for farming.
- Which country borders Somalia to the West?
A. Eritrea. B. Kenya.
C. Tanzania. D. Sudan.
- Which one of the following places is known for keeping of beef cattle?
A. Kiambu. B. Kajiado.
C. Nyeri. D. Murang'a.
- Which climatic region in Kenya is hot and wet throughout the year?
A. Equatorial climate.
B. Semi-arid climate.
C. Mountain climate.
D. Desert climate.
- Which is the main latitude?
A. Prime meridian. B. Equator.
C. Tropic of cancer. D. Tropic of capricorn.
- Which is the major challenge facing tourism in Eastern Africa?
A. Insecurity. B. Drought.
C. Famine. D. Poaching.

19. Which is the **main** tourist attraction at Malka Mari?
 A. Marine life. B. People's hospitality.
 C. Wildlife. D. Cultural activities.
20. Which of the following is an element of a map?
 A. Colour. B. Shape.
 C. Vegetation. D. Key.
21. Which one of the following is a volcanic mountain?
 A. Mt. Ruwenzori.
 B. Mt. Usambara.
 C. Mt. Oldonyo Lengai.
 D. Mt. Pare.
22. Which was the original economic activity of the Luo?
 A. Pastoralism. B. Farming.
 C. Fishing. D. Trading.
23. Which one of the following is an advantage of patriotism?
 A. Promotes tribalism.
 B. Encourages nepotism.
 C. Discourages togetherness.
 D. Promotes economic development.
24. Which of the following are plain nilotes?
 A. Maasai and Pokot.
 B. Njemps and Samburu.
 C. Nandi and Luo.
 D. Karamajong and Datoga.
25. Which one of the following consists of traditional means of communication **only**?
 A.   B.  
 C.   D.  
26. Which one of the following affects the climate of a place?
 A. Soil. B. Time.
 C. Latitude. D. Longitude.

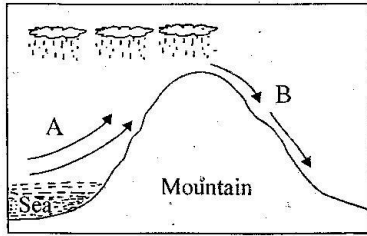
27. Why is Lambwe Valley not so conducive for human settlement? Because of
 A. tsetse fly. B. floods.
 C. desert. D. forest.
28. Which one of these rivers drain into Lorian swamp?
 A. Tana. B. Ewaso Nyiro North.
 C. Athi. D. Omo.
29. According to the new constitution, the parliament has two houses. The houses are the senate and the _____
 A. supreme court. B. cabinet.
 C. national assembly. D. county assembly.
30. Which one of the following traditional forms of farming was also called slash and burn?
 A. Commercial farming.
 B. Bush fallowing.
 C. Subsistence farming.
 D. Shifting cultivation.
31. Which one of the following is true about Masaku?
 A. He was a long distance trader.
 B. He led the Kalenjin against the British.
 C. He fought against the French.
 D. He was deported to Kisii.
32. Which crop is grown as a staple food in both Kenya and Tanzania?
 A. Bananas. B. Rice.
 C. Maize. D. Sugarcane.
33. The following are seaports in Eastern Africa **except**
 A. Dar es Salaam. B. Massawa.
 C. Mombasa. D. Dodoma.

Study the map below and answer questions 34 - 37.

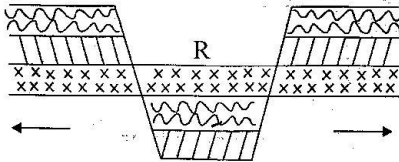


34. The capital city of the country marked A is
A. Eritrea. B. Djibouti.
C. Asmara. D. Juba.
35. Which is the major tourist attraction in the shaded area marked C?
A. Sandy beaches.
B. Wildlife.
C. Beautiful sceneries.
D. The Vasco da Gama Pillar.
36. Through which process was the mountain marked E formed?
A. Folding. B. Erosion.
C. Faulting. D. Volcanicity.
37. The main language group found in the country marked B is
A. Semites. B. Nilotes.
C. Bantus. D. Cushites.
38. Which of the following minerals in Kenya is obtained through evaporation?
A. Flourspar. B. Diatomite.
C. Salt. D. Limestone.
39. Which type of fish below is **mainly** caught from Indian ocean?
A. Kingfish. B. Tilapia.
C. Trout. D. Nile perch.
40. Which game park below is found in Ethiopia?
A. Maasai Mara.
B. Tarangire.
C. Awash.
D. Serengeti
41. How can we best protect our forests in Kenya?
A. Employing many wardens.
B. Educating the public on the need to protect forests.
C. Making laws to protect forests.
D. Arresting the wrong doers.
42. Which one of the following is not a role of citizens to the government?
A. Reporting crimes.
B. Paying taxes.
C. Obeying the laws of the land.
D. Discriminating people according to their tribe.
43. Sisal farming is important because of the following reasons **except**
A. used in building roof tops.
B. making bags and ropes.
C. creates employment.
D. source of income to farmers.
44. All the following are roles of parents to children. Which one is **not** among them?
A. Make decisions.
B. Training them on drug taking.
C. Teaching them good moral values.
D. Advising children.
45. The main problem facing urban centres in Eastern Africa is
A. lack of water.
B. unemployment.
C. high crime rate.
D. growth of slums.
46. The Somali, Borana and Rendille migrated from their original homeland because of different reasons. Which of the following is **not** one of these reasons?
A. Attacks by hostile communities.
B. Spirit of adventure.
C. Drought and famine.
D. Looking for fertile land for farming.
47. Which type of industries below is an example of a service industry?
A. Fruit processing.
B. Salt mining industry.
C. Cement factory.
D. Banking.
48. Which one of the following is the major export crop from Kenya today?
A. Sisal.
B. Pyrethrum.
C. Tea.
D. Coffee.
49. Which of the following communities was a long distance trader before the coming of the Europeans?
A. Maasai.
B. Luo.
C. Kamba.
D. Agikuyu.

Use the diagram below to answer questions 50 - 52



50. Which type of rainfall is shown above?
 A. Sea breeze. B. Land breeze.
 C. Convectional. D. Orographic.
51. The winds found on the side marked B are
 A. cool and dry.
 B. warm and wet.
 C. hot and wet.
 D. cool and wet.
52. Which crop can do well on the side B above?
 A. Sisal. B. Tea.
 C. Pyrethrum. D. Coffee.
53. The following means of communication are print media **except**
 A. newspaper. B. telephone.
 C. magazine. D. journals.
54. Which feature is formed at R below?



- A. Escarpment. B. Rift Valley.
 C. Crater. D. Horst.
55. Which one of the following is the **main** duty of the Kenyan parliament?
 A. Making and amending laws.
 B. Practicing justice.
 C. Making policies.
 D. Maintaining law and order.
56. Which one of the following is true about sugarcane growing in Sudan?
 A. It is grown in highland areas.
 B. It is grown on small scale.
 C. It is grown under irrigation.
 D. It is a subsistence crop.

57. Which one of the following statements is true about landlocked countries?
 A. They are countries with a coastline.
 B. They are countries with a Rift Valley.
 C. They are countries crossed by equator.
 D. They are countries without a coastline.
58. Which statement below is correct about meridians?
 A. They run from West to East.
 B. They meet at the poles.
 C. They affect climate.
 D. They are the shortest.
59. A good citizen should not be
 A. corrupt. B. patriotic.
 C. honest. D. hardworking.
60. Which event took place on 12th December 1964?
 A. Kenya got internal self government.
 B. Kenya fought the British.
 C. Kenya became independent.
 D. Kenya became a republic.

SECTION B

CHRISTIAN RELIGIOUS EDUCATION

61. Why were Adam and Eve punished by God?
 A. They were hardworking.
 B. They talked to the snake.
 C. They were naked.
 D. They disobeyed God.
62. Who among the following people was instructed by God to build an ark to save mankind?
 A. Abraham. B. Lot.
 C. Noah. D. Moses.
63. I was a king in Israel. I asked for wisdom from God. Who am I?
 A. Saul B. Solomon.
 C. Rehoboam. D. David.
64. Who among the following prayed to God for a son in the temple?
 A. Hannah. B. Peninnah.
 C. Sarah. D. Deborah.
65. Who among the following was Jesse's son?
 A. Abraham. B. Joshua.
 C. David. D. Moses.

66. Which prophet fought the prophets of Baal at Mt. Carmel?
 A. Prophet Josiah.
 B. Prophet Nathan.
 C. Prophet Elisha.
 D. Prophet Elijah.
67. What do we as christians celebrate on Easter Monday?
 A. Jesus' resurrection.
 B. Jesus' birth.
 C. Jesus' temptation.
 D. Jesus' baptism.
68. How best can we use the talents given to us by God?
 A. To earn money.
 B. To serve God and others.
 C. To make us feel proud.
 D. To enjoy ourselves.
69. Who prophesied that Jesus would be born in Bethlehem?
 A. Isaiah. B. Micah.
 C. Jeremiah. D. Joel.
70. As christians we should encourage love among people by doing one of the following. Which one is it?
 A. Encouraging people to share what they have.
 B. Sharing things with members of your church only.
 C. Visiting the sick members of your church only.
 D. Staying at home.
71. From which book of the bible are these words found? "I am fearfully and wonderfully made."
 A. Matthew. B. Proverbs.
 C. Revelation. D. Psalms.
72. Which statement is true about Jesus feeding 5000men?
 A. 12 baskets were collected as leftovers.
 B. 6 baskets were collected as leftovers.
 C. 40 baskets were collected.
 D. 12 loaves of bread were collected as remainder.
73. In the Apostles' creed, Jesus is
 A. our king. B. our angel.
 C. our Lord. D. our father.
74. Which one of the following is the greatest commandment?
 A. Obey your parents.
 B. Love God above everything else.
 C. Do not kill.
 D. Do not covet.
75. Why should we as christians keep our bodies clean from sexual immorality?
 A. They are temples of God.
 B. They are delicate.
 C. They are made of clay.
 D. They were created by God.
76. Who among the following came before Jesus to prepare for his coming?
 A. Andrew. B. Judas Iscariot.
 C. John the baptist. D. Simon Peter.
77. Jesus used parables to teach people. Why did Jesus use these parables to teach? To
 A. boast to others.
 B. forgive other people.
 C. teach the word of God for better understanding.
 D. respect people.
78. Which one of the following is **not** a fruit of the Holy Spirit?
 A. Unkindness. B. Love.
 C. Joy. D. Humility.
79. Which one of the following was the first miracle performed by Jesus?
 A. Raising Lazarus from death.
 B. Turning water into wine.
 C. Changing stones into bread.
 D. Calming the storm.
80. When a boy and a girl relate in irresponsible manner they may
 A. do well in exams.
 B. know God well.
 C. be respected.
 D. get sexually transmitted disease.
81. Through which one of the following ways can one acquire HIV and AIDS?
 A. Sharing clothes.
 B. Sharing shoes.
 C. Sharing sharp objects with infected people.
 D. Sharing food.

82. The Ethiopian Eunuch was reading the book of _____ when Philip met him.
A. Luke B. Isaiah
C. Revelation D. Exodus
83. Which community call their God Nyasaye?
A. Luo. B. Kikuyu.
C. Kamba. D. Maasai.
84. Kamau is refusing to work. He is saying that the work is tiresome. As a christian you should
A. tell him that work is a command from God.
B. tell his mother to employ a worker.
C. tell him to work for a pay.
D. tell him to hide from work.
85. In traditional African society, children were taught good morals so as to
A. become warriors.
B. have good behaviours.
C. grow while in good health.
D. enable them provide basic needs.
86. Which one of the following is a form of child abuse?
A. Helping in house chores.
B. Doing school homework.
C. Working in a farm for a pay.
D. Helping an old grandmother.
87. Why did the missionaries come to Kenya?
A. To trade with people.
B. To force people to work.
C. To colonize people.
D. To spread the Gospel.
88. Which one of the following helps to encourage people to live in harmony in the community?
A. Forgiveness. B. Conflict.
C. Revenge. D. Hatred.
89. Why did King Ahab act unfairly towards Naboth?
A. Ahab was honest. B. Ahab was selfish.
C. Ahab feared God. D. Ahab was poor.
90. Mary has the habit of not paying fare whenever she boards a bus. Which virtue does she lack?
A. Humility. B. Courage.
C. Respect. D. Honesty.

SECTION B

ISLAMIC RELIGIOUS EDUCATION

61. How many acts of devotion are mentioned in surah Al-Bayyinah?
*A. Two. B. Three.
C. Four. D. One.*
62. The theme of Tawheed is clearly mentioned in surah
*A. Asr. B. Falaq.
C. Nas. D. Ikhlas.*
63. Which significant event in the history of Islam took place during the month of Rajab?
*A. Fat-hul makkah.
B. Sulhul hudaibiyah.
C. Isra-wal-miraj.
D. Miladun Nabii.*
64. Which surah of the Qur'an warns people against backbiting?
*A. Asr. B. Humaza.
C. Takathur. D. Nas.*
65. Which one of the following situations does **not** call for optional ghusl?
*A. Before going for idd.
B. Before Friday prayers.
C. After washing the dead.
D. After eating.*
66. The sunnah prayer performed after a faradh prayers is known as
*A. Qabliyah. B. Baadiya.
C. Dhuha. D. Witr.*
67. Which one of the following sunnah prayer has two rukuu in every rakat?
*A. Khusuf. B. Tahajud.
C. Witr. D. Taraweh.*
68. When you hear another Muslim sneezing you should say
*A. Yarhamkallah. B. Subhanallah.
C. Alhamdulillah. D. Yahdikumllah.*
69. Which one of the following items **cannot** be given as zakaat?
*A. Money. B. Maize.
C. Sheep. D. Clothes.*
70. Which one of the following is haraam for a male Muslim to wear?
*A. Cotton. B. Silver.
C. Diamond. D. Silk.*

71. A person who enters the mosque earliest on Friday receives rewards of a person who sacrificed a
A. camel. B. goat. C. chicken. D. horse.
72. How old was prophet Mohammad (S.A.W) when he received his first revelation?
A. 40 years. B. 30 years. C. 25 years. D. 63 years.
73. Which one of the following sins is **not** forgivable in Islam?
A. Adu Hery. B. Murder. C. Abortion. D. Shirk.
74. Which one of the following days is **not** appropriate for the festival of Aqiiqa to take place?
A. 7th B. 14th C. 21st D. 37th
75. A person who leads prayers in the mosque is known as
A. Maamuna. B. Kadhi. C. Sheikhh. D. Imam.
76. How many categories of recipients of zakat are mentioned in the Qur'an?
A. Ten. B. Eight. C. Nine. D. Six.
77. Which one of the following is **not** Najasaatul mutawasita?
A. Urine. B. Stool. C. Blood. D. Pig.
78. Where was the first Qibla for the muslims?
A. Makkah. B. Taif. C. Madina. D. Jerusalem.
79. Why were the angels commanded by Allah (SW) to bow down for Nabii Adam?
A. They were inferior. B. Allah (SW) wanted to embarrass them. C. He had knowledge that angels did not have. D. He was created from clay.
80. Which of the following is the duty of angel Izrail?
A. Bringing rain. B. Taking souls. C. Bringing wahy. D. Questioning the grave.
81. Which one of the following is **not** an Islamic teaching concerning servants?
A. Pay them before their sweat dries. B. Let them know their wages. C. Give them work that they can complete. D. Deduct their wages if they do not complete work given.
82. The best gift to a sick person is
A. flowers. B. food. C. medicine. D. dua.
83. What should a muslim say after eating?
A. Maashallah. B. Bismillah. C. Alhamdullillah. D. Subhanallah.
84. Which one of the following was the second battle in the history of Islam?
A. Khandaq. B. Badr. C. Hunain. D. Uhud.
85. The clan of the prophet (SAW) was
A. Quraish B. Thaqif. C. Saad. D. Hashim.
86. Which of the following sunnah salat is performed to seek for Allah's guidance?
A. Khusuf. B. Istikharah. C. Istisqai. D. Kusuf.
87. Which one of the following is **not** a posture of salat?
A. Sujud. B. Rukuu. C. Fatiha. D. Itdal.
88. How many rakaat are performed during salatul subh?
A. Four. B. One. C. Three. D. Two.
89. Which is the **main** pillar of Islam according to prophet Mohammad(SAW)?
A. Salat. B. Zakat. C. Saum. D. Kalima.
90. How many times should a muslim pause while drinking?
A. Four. B. Six. C. Two. D. Three.