

GRADE 5 END TERM 3 DECEMBER 2021

SCIENCE & TECHNOLOGY

Name .....

School name .....

The teacher to fill the grid below after marking the learner's work.

Exceeds Expectations (48 - 50)	1	Meet Expectations (25 - 47)	2	Approaching Expectations (11 - 24)	3	Below expectations (0 - 10)	4

Answer all questions in the space provided

1. Name three characteristics of living things (3mks)

- a) \_\_\_\_\_
- b) \_\_\_\_\_
- c) \_\_\_\_\_


2. Making clean air dirty is referred to as \_\_\_\_\_ (1mk)

3. Write down three parts of a skeleton. (3mks)


- a) \_\_\_\_\_
- b) \_\_\_\_\_
- c) \_\_\_\_\_

4. Identify parts of the body that we wear the following protective equipment (3mks)

a)



c)



b)



5. Name three examples of non-flowering plants. (3mks)

a) \_\_\_\_\_

b) \_\_\_\_\_

c) \_\_\_\_\_

6. Fish breathes through \_\_\_\_\_ (1mk)

7. Match the animal with its characteristics (3mks)

a) Turkey Gives birth to their youngones

b) Rabbit Cold blooded

c) Lizard Covered by feathers

8. Write down two useful fungi (2mks)

a) \_\_\_\_\_

b) \_\_\_\_\_

9. We breathe in air called \_\_\_\_\_ and breathe out air called \_\_\_\_\_ (2mks)


10. The external parasite that causes scabies is called \_\_\_\_\_ (1mk)

11. Name two symptoms of jiggers infestation. (2mks)

a) \_\_\_\_\_

b) \_\_\_\_\_

12. Identify the following internal parasite \_\_\_\_\_ (1mk)



\_\_\_\_\_

13. Name any three ways to protect ourselves from internal parasites (3mks)

- a) \_\_\_\_\_
- b) \_\_\_\_\_
- c) \_\_\_\_\_

14. What is word processor? (2mks)

\_\_\_\_\_

\_\_\_\_\_

15. Name three parts of a computer (3mks)

- a) \_\_\_\_\_
- b) \_\_\_\_\_
- c) \_\_\_\_\_

16. From the list below, underline the waste that can decompose (3mks)

- a) E-waste
- b) Animal waste
- c) Fruit peelings
- d) Scrap metal
- e) Wood remains
- f) Plastic cups
- g) Old clothes

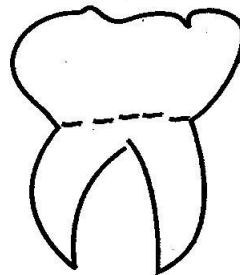
17. The process of making something old appear new again is called

\_\_\_\_\_ (1mk)

18. Give two examples of word processor software (2mks)

- a) \_\_\_\_\_
- b) \_\_\_\_\_

19. Name the tooth below (1mk)



\_\_\_\_\_

20. List three parts of the digestive system (3mks)

- a) \_\_\_\_\_
- b) \_\_\_\_\_
- c) \_\_\_\_\_

21. Mary suffered from a waterborne disease and had the following signs and symptoms

- a) Headache
- b) Vomiting
- c) Violent watery diarrhoea

Which disease was Mary likely to be suffering from \_\_\_\_\_

(1mk)

22. Name the function of hair in the nose (1mk)

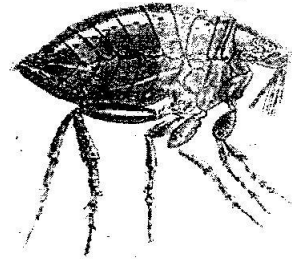
\_\_\_\_\_

23. Name two diseases that affect the breathing system (2mks)

a) \_\_\_\_\_

b) \_\_\_\_\_

24. Identify the following external parasite (1mk)



\_\_\_\_\_

25. Name any two things you need when washing hands (1mk)

a) \_\_\_\_\_

b) \_\_\_\_\_