

GRADE 5 END TERM 3 DECEMBER 2021

ART, CRAFT & MUSIC

Name

School name

The teacher to fill the grid below after marking the learner's work.

Assessment rubric				
SUBJECT	Exceeds Expectations (19 - 20)	Meets Expectations (13 - 18)	Approaches Expectations (6 - 12)	Below Expectations (0 - 5)
ART AND CRAFT				
MUSIC				

ART AND CRAFT

- List three categories of colour (3mks)
 - _____
 - _____
 - _____
- What are the two techniques used in weaving? (2mks)
 - _____
 - _____
- When making a drawing composition you either make a vertical or horizontal layouts. The vertical layout is also called _____ while the horizontal layout is also called _____ (2mks)
- What do you call the type of drawing that involves drawing arrangement of man-made or natural things? _____ (1mk)

5. List two techniques that are used to show value on drawn objects (2mks)

a) _____

b) _____

6. In crayon etching technique, crayons can be made using _____
wax or _____ wax. (2mks)

7. List three materials that can be carved in sculpture to make sculptural
forms (3mks)

a) _____

b) _____


c) _____

8. Name two techniques used when modelling items (2mks)

a) _____

b) _____

9. Draw and colour a cooking stick (1mk)



10. A _____ is a simple type of loom that is made by tying four sticks
at four corners to make a frame and is used in weaving. (1mk)

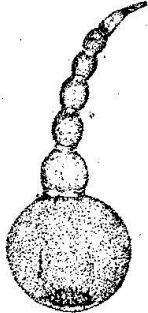
11. _____ is the surface appearance of objects in the presence
of light. (Shape, Colour) (1mks)

(Total 20 mks)


MUSIC

1. Name the following wind instruments. (2mks)

a)



b)



2. The musical instruments shown above are played by _____ them to produce sound. (1mk)

3. List four types of songs. (4mks)

a) _____

b) _____

c) _____

d) _____

4. Write down the roles of the following participants in a folk song. (3mks)

a) Instrumentalists _____

b) Soloist _____

c) Singers _____

5. When two voices are in agreement while singing together they create _____ in a song. (1mk)

6. What do you call a song that is sung as a symbol of the unity among the member states of the East African Community? (1mk)

7. Fill in the gaps using the words in the box (3mks)


costumes, ornaments, body adornment

- a) The beads, necklaces, bracelets and anklets worn by dancers during the performance are called _____
- b) The paint decorations made on the body of dancers during performance are known as _____
- c) In folk dances the attire worn by dancers that are specially designed are known as _____

8. Name four participants in a folk dance (4mks)

- a) _____
- b) _____
- c) _____
- d) _____

9. Draw the note symbol of a crotchet (1mk)



(Total 20 marks)