

GRADE 4 END TERM 3 DECEMBER 2021

SOCIAL STUDIES & RE

Name

School name

The teacher to fill the grid below after marking the learner's work.

Assessment rubric				
LEARNING AREA	Exceeds Expectations (26 - 30)	Meets Expectations (18 - 25)	Approaches Expectations (9 - 17)	Below Expectations (0 - 8)
SOCIAL STUDIES				

Assessment rubric				
LEARNING AREA	Exceeds Expectations (19 - 20)	Meets Expectations (13 - 18)	Approaches Expectations (6 - 12)	Below Expectations (0 - 5)
R.E				

SOCIAL STUDIES

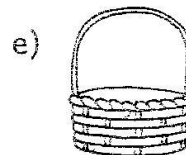
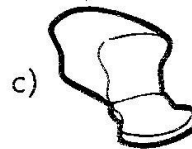
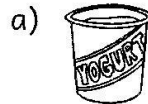
1. Group the following qualities of a leader into good qualities and bad qualities. (5mks)

rude, honest, inspiring,
decisive, punctual,
compassionate, arrogant,
committed, disrespectful, lazy

Good qualities Bad qualities

- | | |
|----------|----------|
| a) _____ | a) _____ |
| b) _____ | b) _____ |
| c) _____ | c) _____ |
| d) _____ | d) _____ |
| e) _____ | e) _____ |

2. Which industries make the following products? (5mks)



3. Making good use of resources and protecting them is referred to as _____ (1mk)

4. Things that people need in order to produce or create wealth are known as _____ (1mk)

5. _____ is a people's way of life. (1mk)

6. List **five** aspects of traditional culture. (5mks)

- a) _____
- b) _____
- c) _____
- d) _____
- e) _____

Define the following items. (3mks)

- a) Population

- b) Population distribution

- c) Densely populated area

8. Fill in the gaps on interdependence. (2mks)


- a) _____ help children to learn.
- b) We depend on _____ to make our clothes.

9. Name **four** historic built environments found in our country. (4mks)


- a) _____
- b) _____
- c) _____
- d) _____

10. Draw and colour the following physical features. (2mk)

a) River



b) Mountain



11. What is the name of your county?
_____ (1mk)


CHRISTIAN RELIGIOUS EDUCATION

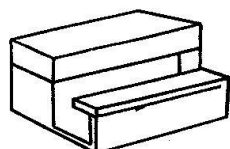
ASSESSMENT

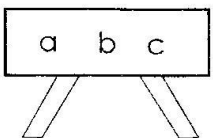
1. List **three** attributes of God you have learnt. (3mks)


- a) _____
- b) _____
- c) _____

2. Study the following items and write whether it is 'personal' or 'school' property.

a)  (4mks)

b) 

c) 

d) 

3. The parable of the mustard seed helps us to understand the nature of _____ (1mk)

4. In Philipians 4:4 we learn that we should _____ in the Lord always. (1mk)

5. What type of a family has father, mother and children? (1mk)

6. Who forced Tamar into bed and raped her? _____ (1mk)

7. We should always keep our bodies pure because they are the _____ (1mk)

8. The Bible is divided into two parts. These are _____ Testament and _____ Testament. (2mks)

9. _____ was a tax collector who climbed a sycamore tree to see Jesus. (1mk)

10. Who were the parents of John the Baptist? (2mks)
_____ and _____

11. Jesus entered a town called _____ where the blind Bartimaeus begged by the roadside. (1mk)
12. How many lepers were healed by Jesus? _____ (1mk)
13. The story of Jesus raising a widow's son from death shows that Jesus has power (1mk)

ISLAMIC RELIGIOUS ACTIVITIES

1. The surah that is referred to as the mother of Qur'an is _____
2. The surah that is known as 'dua' is _____
3. The wife of Abu Lahab was known as _____
4. We should say _____ after eating.
5. The second pillar of Iman is the belief in the _____
6. The fourth pillar of Islam is _____
7. Mikail is the angel in charge of _____

8. Angels of Allah are neither male nor _____

Name the prophets who are Ulul-Azm.

9. _____
10. _____
11. _____
12. _____
13. Virtues are _____ qualities of a person.
14. Ritual purity is referred to as _____
15. How many times do Muslims pray in a day? _____
16. Who was the first man to be created? _____
17. The father of prophet Muhammad was known as _____
18. Najasaatul Mukhafafa is the same as _____
19. The pillar of Islam that encourages sharing is _____
20. What is the meaning of Tawheed?
