

GRADE 4 END TERM 3 DECEMBER 2021 HOMESCIENCE & AGRICULTURE

Name:

School name:

The teacher to fill the grid below after marking the learner's work.

Assessment rubric				
LEARNING AREA	Exceeds Expectations (26 - 30)	Meets Expectations (18 - 25)	Approaches Expectations (9 - 17)	Below Expectations (0 - 8)
HOMESCIENCE				
AGRICULTURE				


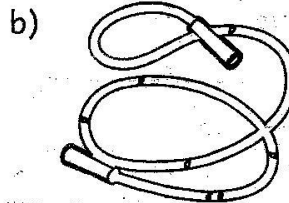
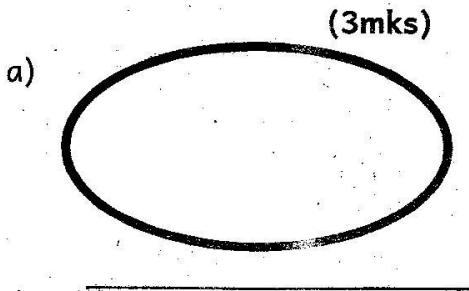
HOME SCIENCE

1. Define the term fuel. (1mk)

2. List five types of fuels used by people in our country. (5mks)

- a) _____
- b) _____
- c) _____
- e) _____

3. Name the following play items. (3mks)



4. Write down three requirements a person needs in order to grow healthy. (3mks)

- a) _____
- b) _____
- c) _____

5. Write **two** healthy habits that you need to practice to prevent illnesses. (2mks)

- a) _____
 b) _____

6. How do you care for and store the following cleaning materials and tools after use. (5mks)

Cleaning materials and tools.	Care and storage
a) Basins and buckets	
b) Brushes	
c) Brooms and mops	
d) Dustpans	
e) Floor clothes	

7. **Fill in the gaps using the different materials that make shoes.** (3mks)

Njeri is a grade four learner at Bidii primary school. When going to school she always wear _____ shoes. During sports days she wears shoes made of _____. After school, she wears _____ shoes and goes to the bathroom to have a shower.

8. Write **three** importance of using a shopping list when going to buy items. (3mks)


- a) _____
 b) _____
 c) _____

9. The use of fuel without wasting it is known as _____ (1mk)

10. List the **three** food groups. (3mks)

- a) _____
 b) _____
 c) _____

11. Draw a packet of maize flour and indicate the expiry date. (1mk)





AGRICULTURE


1. Write the importance of the following domestic animals. (5mks)

Domestic animal	Importance
a) donkey	
b) cat	
c) dog	
d) sheep	
e) hen	

2. Identify the following gardening practices. (4mks)



3. Draw and colour a picture showing drip irrigation. (1mk)



4. What is the importance of practising drip irrigation in a fruit garden? _____ (1mk)

5. A _____ is used to remove the seedling carefully from the soil without disturbing the roots when transplanting. (1mk)

6. Draw and colour seedlings. (1mk)

7. List **three** activities or practices you can do to young seedlings to maintain good conditions for their healthy growth. (3mks)

a) _____

b) _____

c) _____

8. Name **two** types of nursery beds you can prepare when making fruit tree nursery beds. (2mks)

a) _____

b) _____

9. Write down the steps followed in the fruit seed preparation.

(5mks)

a) _____

b) _____

c) _____

d) _____

e) _____

10. Njeri has a spinach garden. One day while walking in her garden she realized that her spinach had been damaged by small wild animals. List four small wild animals that are **likely** to have damaged Njeri's spinach. (4 mks)

a) _____

b) _____

c) _____

d) _____

11. What item would you advise Njeri to put in her garden to scare away the small wild animals mentioned above? (1mk)

12. What are the uses of water in a farm? (2mks)

a) _____

b) _____