


## GRADE 2 END TERM 3 DECEMBER 2021 MATHEMATICS ACTIVITIES

### 1. NUMBERS.(35marks)

#### 1. Divide (5mks)

a) Share 4 balls equally between 2 girls. Each girl will get \_\_\_\_\_ balls.

b)  8 apples shared equally between 2 children is \_\_\_\_\_

c) Peter and John shared 16 sweets equally. Each got \_\_\_\_\_ sweets.

d) Mother had 18 bananas. She shared them equally among her 3 children. Each child got \_\_\_\_\_ bananas.

e)  $24 \div 4 =$  \_\_\_\_\_

#### 2. Fill in the box below (5mks)

x	1	2	3	4	5	6	7
10	10		30				

#### 3. Subtract (5mks)

a) A shopkeeper had 39 books. He sold 14 books. How many books was he left with? \_\_\_\_\_

b) James had 18 cows. He sold 12 cows. How many cows remained?  
\_\_\_\_\_

c)  $29 - 15 =$  \_\_\_\_\_

d)  $37 - 23 =$  \_\_\_\_\_

e) 
$$\begin{array}{r} 90 \\ - 30 \\ \hline \end{array}$$

#### 4. Add by regrouping (5mks)

a) 
$$\begin{array}{r} 37 \\ + 14 \\ \hline \end{array}$$

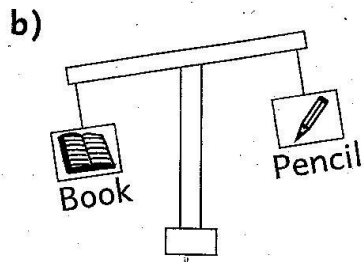
b) 
$$\begin{array}{r} 19 \\ + 18 \\ \hline \end{array}$$

c) 
$$\begin{array}{r} 23 \\ + 49 \\ \hline \end{array}$$

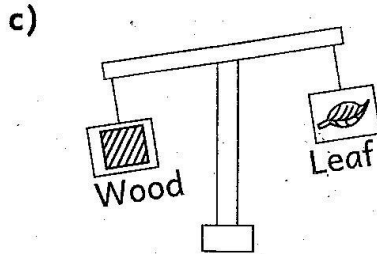
d) 
$$\begin{array}{r} 48 \\ + 44 \\ \hline \end{array}$$

e)  $26 + 65 =$  \_\_\_\_\_





The pencil is \_\_\_\_\_ the book.



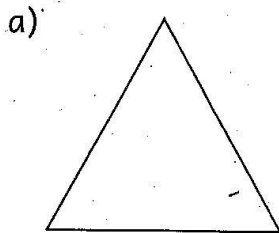
The wood is \_\_\_\_\_ the leaf.

4. Measure the length of your blackboard. (1mk)  
It is \_\_\_\_\_ metres.

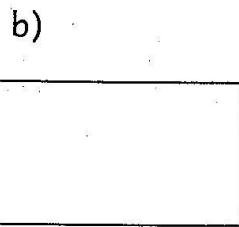
3. **GEOMETRY. (5marks)**

1. **Count and write the number of sides**

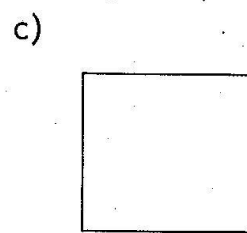
(3mks)



\_\_\_\_\_ sides



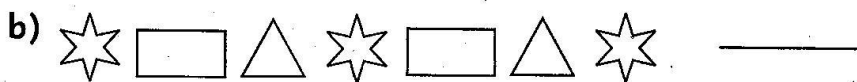
\_\_\_\_\_ sides



\_\_\_\_\_ sides

2. **Complete the pattern**

(2mks)



**TOTAL = 50 Marks**