

**GRADE 1 END TERM 3 DECEMBER 2021
MATHEMATICS ACTIVITIES**


NUMBERS.

(35mks)



1. Take away.



(5marks)

a)  -  = _____

b)  -  = _____



c)  -  = _____



d)  -  = _____



e)  -  = _____

2. Put together



(5mks)

a)  +  = _____

b)  +  = _____

c)  +  = _____

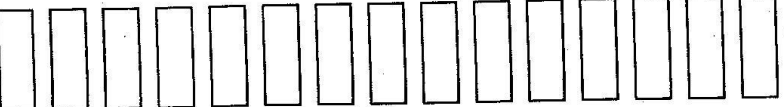
d)  +  = _____

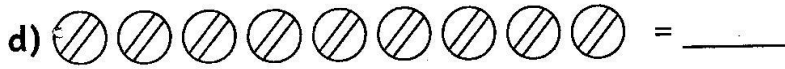
e)  +  = _____

3. Count and write how many?

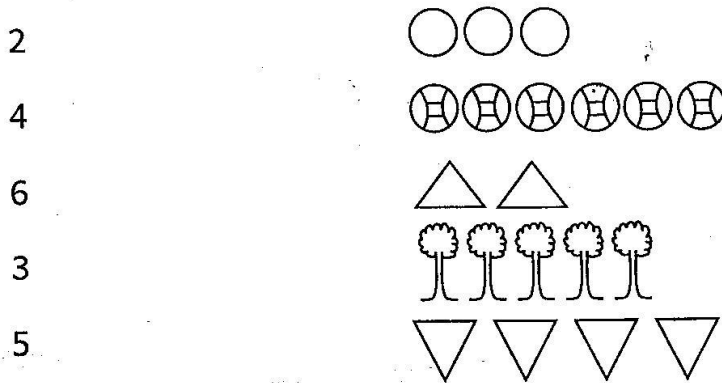
(5mks)

a)  = _____

b)  = _____



4. **Match the number and the objects (5mks)**



5. **Write the missing numbers (5mks)**

10, _____, 30, _____, 50, _____, 70, _____, 90, _____

6. **Write the place value (5marks)**

a) 60 = _____ tens _____ ones.

b) 12 = _____ tens _____ ones.

c) 43 = _____ tens _____ ones.

d) 91 = _____ tens _____ ones.

e) 27 = _____ tens _____ ones.

7. **Write these numbers in words (5mks)**

a) 5 _____

d) 3 _____

b) 2 _____


e) 4 _____

c) 1 _____


MEASUREMENTS (10mks)

1. **Circle the one that is lighter. (2mks)**

a)




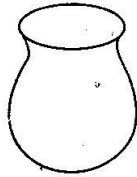
b)




2. 1kg of meat is the _____ 1kg of rice.
(heavier than, lighter than, same as)

3. Circle the one that holds more (4marks)


a)



b)



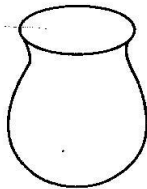
c)



d)



4.



The glass holds _____ water than the pot. (more, less)

5.



Cup a holds the _____ amount of water as cup b.
(less, more, same)

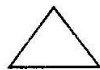

6.



The book is _____ than the pencil.
(lighter, heavier, same)

GEOMETRY (5mks)

Match the same shapes



TOTAL = 50 Marks