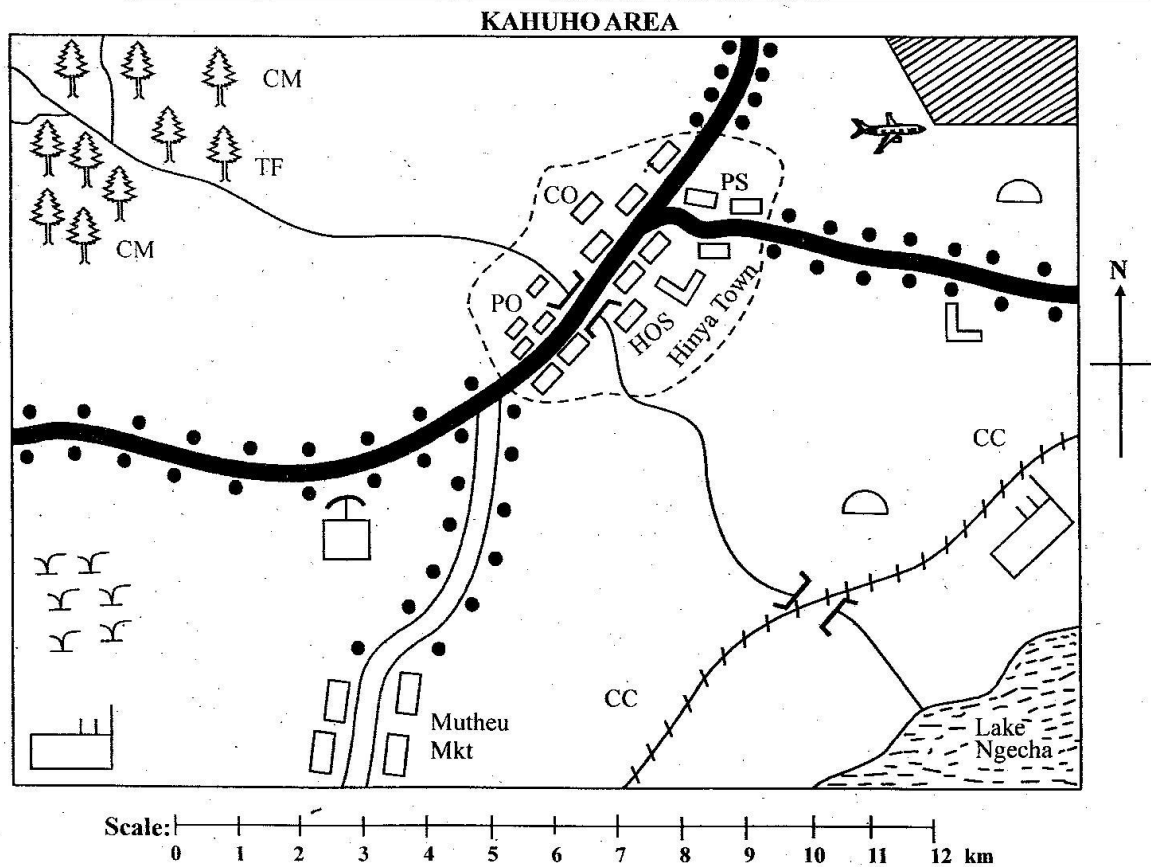


CLASS 8 END TERM 3 DECEMBER 2021

SOCIAL STUDIES & CRE



Key


Tarmac road	Murram road	River and bridge	Lake
Permanent buildings	School	Mosque	Shrine
Airstrip	Game reserve	Ginnery	Scrubs
Settlement	CO County Office	PO Post Office	HOS Hospital
PS Police Station	CM Coffee mill	TF Tea factory	
Town boundary	Forest	CC Chief's Camp	

Use the map of Kahuhu area to answer questions 1 - 7.

1. The land in Kahuhu area rises from
A. South West to North East
B. North West to South East
C. South East to North West
D. North East to South West
2. What is the approximate area of land covered by the game reserve?
A. 10 km² B. 6 km² C. 8 km² D. 3.40 km²
3. Which one of the following services is **not** offered in Hinya town?
A. Recreational services
B. Health services
C. Educational services
D. Security services
4. The soil around the forest is **most likely** to be
A. alluvial B. red volcanic
C. sandy D. black cotton
5. The **main** means of transport to Winja town from Mutheu market is
A. air B. water C. road D. rail
6. The settlement in Kahuhu area is influenced **mostly** by
A. urbanization B. security
C. transport network D. government policies
7. The **main** economic activity in Kahuhu area is
A. trade B. crop farming
C. fishing D. tourism
8. Which one of the following is a negative effect of emigration to Kenya?
A. Has led to increased investment opportunities in the country
B. Enhances international relationship
C. The diaspora citizens remit a lot of foreign exchange
D. Increased brain drain of professionals
9. Which one of the following climatic conditions is **not** experienced in Eastern Africa?
A. Mediterranean climate
B. Equatorial climate
C. Tropical climate
D. Mountain climate
10. Which of the following statements is true of traditional and modern education?
A. Learning ends after graduation
B. Both follow a time table
C. Both prepare learners for adulthood life
D. Trained teachers provide education
11. Which one of the following is also known as cottage industry?
A. Vehicle assembly
B. Entertainment industry
C. Transport industry
D. Jua kali industry
12. Which one of the following United Nations agencies is responsible for the welfare of refugees in the world?
A. UNEP B. UNICEF
C. UNESCO D. UNHCR
13. Who among the following **does not** qualify to be a dual citizen?
A. Civil servants
B. Members of the Kenya Defense Forces
C. High court judges
D. IEBC commissioners
14. The **best** means of protecting the rights of persons with special need is
A. establishing empowerment opportunities for them
B. establishing provident fund for them
C. equal application of the law
D. educating the public on their rights
15. Which one of the following statements explains how political differences lead to conflicts in the society?
A. When the elected leader obey the constitution
B. When there is unbiased distribution of resources
C. When leaders preach violence against those who oppose them
D. When people dislike political intolerance
16. Cabinet meetings in Kenya are chaired by the
A. head of civil servants
B. Chief cabinet secretary
C. Attorney General
D. President of the republic
17. Which one of the following countries are **not** members of the Commonwealth?
A. Tanzania, Malawi, Seychelles
B. Ghana, Botswana, Lesotho
C. Morocco, Senegal, Democratic Republic of Congo
D. Cameroon, Rwanda, Nigeria
18. The following statements describe main features of population in certain countries:-
i) *Life expectancy is very high*
ii) *High dependency ratio*
iii) *Small families*
iv) *Most population live in rural areas*
Which statements describe population in Germany?
A. i and iii B. i and ii
C. ii and iv D. iii and iv
19. The instrument in the Kenyan parliament that symbolizes the authority of the speakers in parliament is
A. the coat of arms B. the national flag
C. the hansard D. the mace

20. The **main** use of the red volcanic soil is
- crop farming
 - building and construction
 - decoration of houses
 - making ceramics
21. In which chapter of the Kenyan constitution is the bills of rights enshrined?
- Chapter six
 - Chapter five
 - Chapter four
 - Chapter two
22. Which one of the following statements shows how democracy can be practised in a school?
- Teachers are assigned subjects on a time - table
 - The headteacher does all responsibilities in school
 - Learners are allowed to choose clubs they want to join
 - The headteacher allows prefects to monitor teachers
23. Who among the following Legco members is **correctly** matched with the area he represented in 1957?
- | Member | Area |
|-------------------|-----------------|
| A. Masinde Muliro | -Nyanza central |
| B. Benard Mate | - Ukambani |
| C. Tom Mboya | - Nairobi |
| D. Daniel moi | - Central |

Use the diagram below to answer the following question.



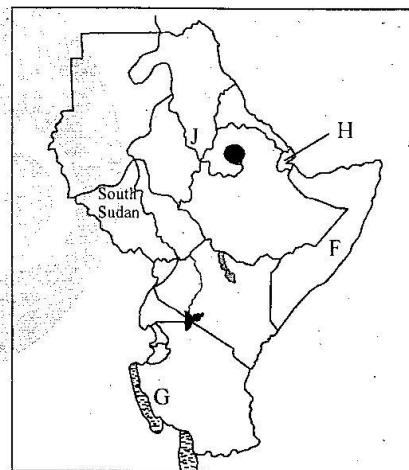
24. The fishing method above is best suitable for fishing in
- deep water
 - shallow waters
 - man - made lakes only
 - rivers and lakes only
25. The following events took place leading to *independence attainment in Kenya*:
- The lifting of the ban on the state of emergency
 - The second Lancaster Conference
 - Election of Legco members from eight regions

iv) *B.A. Ohanga appointed to the council of ministers*

Which one of the following is the **correct** order of the events from the first to the last in Kenya?

- i, iii, iv, and ii
 - ii, iv, iii and i
 - iv, i, ii, and iii
 - iv, iii, i and ii
26. The **main** cause of traffic jam on Kenyan roads is
- lack of driving skills
 - unroadworthy vehicles
 - poor road use habits
 - road inspection blocks
27. Who among the following are **not** members of the same clan?
- Father and children
 - Mother and children
 - Grandfather and grandchildren
 - Father and daughters

Use the diagram below to answer questions 28 - 31.



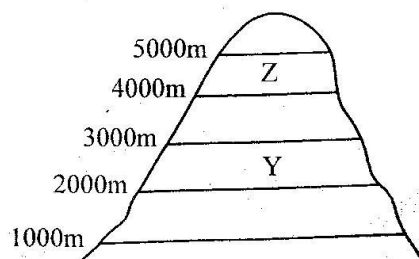
28. The country marked **F** was not colonised by
- the British
 - the French
 - the Italians
 - the Germans
29. The lake marked **G** was formed as a result of
- glacial action
 - downwarping
 - faulting
 - volcanicity
30. Which of the following statements is **true** of the country marked **H**?
- It was colonized by the Belgians
 - It is a member of both COMESA and SADC
 - It is crossed by the Tropic of Cancer
 - It hosts the headquarters of IGAD

31. The branch of the river marked J is known as
 A. Blue Nile B. White Nile
 C. Juba D. Shibelle
32. Which one of the following is the **most** important factor to consider when establishing a ginnery factory?
 A. Availability of capital
 B. Availability of raw materials
 C. Affordable power
 D. Developed transport network
33. Which one of the following was **not** a complaint of the people of Ghana against the British colonizers?
 A. Poor salaries and wages for African workers
 B. Low income for African cocoa farmers
 C. Africans were being forced to go to school.
 D. Unemployment of the youth
34. A citizen can best demonstrate patriotism by
 A. evading taxes
 B. participating in national development
 C. leaking country's secrets
 D. organizing demonstrations
35. The right to elect a person of your own choice during elections is an example of a
 A. political right B. economic right
 C. social right D. freedom of speech
36. Petition involving disputes in presidential elections is determined by
 A. the High Court
 B. the Court of Appeal
 C. IEBC commissioners
 D. the Supreme Court
37. The **best** method of resolving disputes among family members is
 A. arbitration B. dialogue
 C. mediation D. litigation
38. Who among the following is **not** a member of parliament in Kenya?
 A. Speaker
 B. Women representative
 C. Cabinet secretary
 D. Senator
39. The croaking of frogs in traditional African weather observation indicated
 A. onset of rains B. dry periods
 C. windy weather D. cold weather
40. The **best** way of controlling soil erosion in areas around Kisii town is
 A. ploughing across the contour
 B. crop rotation
 C. use of manure
 D. ploughing along the contour
41. Which one of the following was **not** a function of Mugwe as a religious leader among the Ameru community?
 A. Presided over the rites of passage ceremonies
 B. Participated in raids and hunting expeditions
 C. Made decisions on moral values
 D. Blessed warriors before going to war.
42. The president and deputy president are sworn into office by the
 A. Speaker of parliament
 B. Chief Justice
 C. Chief registrar of the judiciary
 D. Attorney General
43. Which one of the following groups of communities used the same migration route as the Nubians of Sudan?
 A. Luo, Anuak, Dinka
 B. Marakwet, Nandi, Sabaot
 C. Burungu, Hawa, Makogodi
 D. Falasha, Harari, Tigreans
44. Which one of the following was a positive effect of settler farming?
 A. Led to development of infrastructure
 B. Restriction of Africans to accessing some areas
 C. Free labour provided by Africans
 D. Discouraging Africans from engaging in cash crop farming
45. The major reason for the decline of the Old Ghana kingdom was
 A. decline of the Trans-Saharan trade
 B. attack by the Almoravids from the North
 C. presence of weak neighbouring states
 D. the rise of the kingdom of Mali under Sundiata
46. Which one of the following is a recurrent expenditure by the government of Kenya?
 A. Payments of salaries and wages
 B. Building of national hospitals
 C. Purchasing of vehicles and machinery
 D. Construction of government offices
47. The body charged with the duty of carrying out census in Kenya is
 A. Independent Electoral and Boundaries Commission
 B. Police Service.
 C. Kenya National Bureau of Statistics
 D. State Department of Devolution and Planning
48. Which one of the following cities is **correctly** matched with the country it is found?

<u>City</u>	-	<u>Country</u>
A. Pretoria	-	Mozambique
B. Tripoli	-	Tunisia
C. Ouagadougou	-	Eritrea
D. Windhoek	-	Namibia

49. Which one of the following European countries did not take part in the scramble for Eastern Africa?
 A. Germany B. Portuguese
 C. Italy D. France
50. The Deputy Inspector General of Police is appointed by
 A. Parliament
 B. Cabinet secretary
 C. The president
 D. Chief of civil servants

Study the diagram below and answer the following question.



51. The type of vegetation found at zones Y and Z respectively are known as
 A. rainforest and moorland
 B. savannah and bamboo
 C. bamboo and moorland
 D. rainforest and savannah
52. Which one of the following is not a reason for urban - rural migration?
 A. Retirement from employment
 B. Retrenchment
 C. Job transfers
 D. Search for better recreational facilities
53. The main benefit of banana growing in Uganda is
 A. it earns foreign exchange
 B. it is a staple food
 C. it creates employment
 D. it has led to improved infrastructure
54. The army in the Abawanga kingdom was known as
 A. Elureko B. Rugaruga
 C. Olukayaba D. Mtwale
55. The main challenge facing tourism sector in Kenya currently is
 A. insecurity
 B. Covid - 19 epidemic
 C. high taxation
 D. poaching

56. The following are contributions of a prominent African leader:
 i) Introduced a new constitution
 ii) Fought against slave trade
 iii) Founder member of OAU
 iv) Supported liberation movements in Africa
 The leader described above is
 A. Jomo Kenyatta
 B. Kabarage Nyerere
 C. Nelson Mandela
 D. Ras Tafari Mackonen
57. One similarity between Kenyan and Swaziland's governments is that
 A. the head of state is the commander in chief of the armed forces
 B. head of state rules for life
 C. presidential elections are held after every five years
 D. members of parliament are appointed by the head of state
58. The first step of administering first aid to a road accident victim is
 A. ensuring the victim has free flow of air
 B. checking for blood circulation
 C. calling an ambulance
 D. taking the victim to a safe place
59. The Hehe resistance of 1891 - 1898 was led by
 A. Samori Toure B. Chief Lewanika
 C. Kabaka Mwangi D. Chief Mkwawa
60. The cheapest method of poultry farming is
 A. free range B. deep litter system
 C. battery system D. ark system

SECTION II

CHRISTIAN RELIGIOUS EDUCATION

61. According to the Biblical stories of creation, Adam and Eve were given the following duties and privileges except one. Which one is it?
 A. To subdue the earth
 B. To procreate
 C. Unlimited use of God's creation
 D. To give identity to God's creation
62. The main reason why God asked Noah to build the ark was to
 A. separate the sinners from the righteous
 B. store foodstuffs
 C. assist him to move to the mountain
 D. save Noah's family
63. Where was Abraham living when he was called by God?
 A. Egypt B. Haran
 C. Canaan D. Ur

64. During the day God led the people of Israel through the wilderness to the promised land by use of
A. cloud B. fire C. wind D. thunder
65. Who among the following was **not** a judge in Israel?
A. Tola B. Deborah
C. Eleazar D. Shamgar
66. Which one of the following Christian values do Christians **mainly** learn from the story of Gideon?
A. Courage B. Faithfulness
C. Honesty D. Patience
67. King David showed that he had respect for leaders chosen by God when he
A. made his son the king
B. spared the life of king Saul
C. accepted to be appointed a king
D. accepted to kill Goliath
68. What lesson do we as Christians learn from the way Ahab treated Naboth?
A. We should not oppress those under our control
B. We should own more wealth than our subjects
C. People under us should not own property
D. We should always desire what our neighbours own
69. When Jeremiah was called to become a prophet he complained that he was
A. too young
B. a stammerer
C. the least important in his clan
D. not strong
70. The rich Shunemite woman welcomed prophet Elisha by
A. giving him gifts of gold
B. giving her son to him
C. giving him a house to stay
D. giving him cattle
71. The name John that was given to John the baptist was suggested by
A. his father Zachariah
B. the women of the clan
C. Elizabeth his mother
D. the angel
72. Mary was surprised by angel Gabriel's message because she
A. was too young
B. came from poor family
C. was engaged to Joseph
D. had not known a man
73. Which of the following events happened on the day Jesus was born?
A. A voice from heaven was heard
B. Singing angels appeared
C. An angel came down in the form of a dove
D. A cloud covered the place Jesus was born
74. King Herod wanted to kill baby Jesus because
A. Jesus was becoming popular
B. he feared Jesus would become a king
C. Jesus had refused to perform miracles
D. the wise men had cheated him
75. "Ananias, why did you let satan take control of you and make you lie to the Holy Spirit by keeping part of the money you received for the property?" (Acts 5:3) These words were spoken by
A. Peter B. an Angel
C. Jesus D. Sapphira
76. According to the beatitudes, Jesus said that "Happy are those who know they are spiritually poor for _____"
A. God will call them His children
B. they shall see God
C. they will be comforted
D. the kingdom of heaven is theirs
77. The parable of the yeast teaches Christians
A. about the growth of the kingdom
B. about the value of the kingdom
C. the nature of the kingdom
D. the importance of sharing
78. Which one of the happenings took place on the day Jesus died?
A. The stone on the tomb was rolled away
B. There was an earthquake
C. People spoke in many languages
D. A voice was heard from heaven
79. Jesus was arrested at
A. Golgotha
B. the garden of Eden
C. the garden of Gethsemane
D. the upper room in Jerusalem
80. Cleopas and his friend realized that they were talking with Jesus Christ when
A. He broke the bread
B. Jesus had preached to them
C. Jesus had disappeared
D. they sung hymns
81. Which one of the following traditional African practices is **not** compatible with Christianity?
A. Respect for life
B. Reconciliation
C. Male circumcision
D. Charms and amulets
82. Which one of the following beliefs about God is found in both African traditional religion and Apostle's creed? God is
A. the creator B. the judge
C. caring D. jealous

83. In traditional African communities, what was the **main** reason why children were told stories? To
 A. look for the best story teller
 B. teach them their culture
 C. entertain them and keep them busy
 D. teach them moral values
84. The name given to God in traditional African communities mostly symbolized God's
 A. wisdom B. power
 C. love D. character
85. The youth can avoid contracting HIV and AIDS by
 A. going for testing
 B. having only one partner
 C. abstaining from sexual acts until marriage
 D. respecting the elders.
86. Elders are respected in traditional African communities **mainly** because of their
 A. wisdom B. loyalty
 C. courage D. patience
87. Tirop, your classmate has decided to drop out of school and seek employment. As a Christian, what is the **best** action to take?
 A. Inform the whole class about it
 B. Ask him to continue with his learning
 C. Join him and seek employment together
 D. Continue with his plans
88. Which one of the following is **not** a result of sexual misuse among the youths?
 A. Performing well in school
 B. Dropping out of school
 C. Contracting sexually transmitted diseases
 D. Unwanted pregnancies
89. The visually impaired learners **mainly** learn by the use of
 A. laptops B. signs
 C. braille D. textbooks
90. Which one of the following is the **correct** way of taking care of our environment?
 A. Burning charcoal to get money
 B. Harvesting sand to build houses
 C. Collecting rubbish from the surroundings
 D. Washing clothes in the river

SECTION II

ISLAMIC RELIGIOUS EDUCATION

61. Which one of the following surahs teaches about giving sacrifice?
 A. *Al - Fyl* B. *Al - Iklas*
 C. *Al - Kauthar* D. *Al - Maun*
62. Which one of the following **does not** refer to Allah's mercy?
 A. *Rahim* B. *Ghafar*
 C. *Rahman* D. *Aliim*
63. The battle which the Muslims won against the Mekkans though the Muslims were fewer than the Mekkans was
 A. *Hunain* B. *Khandaq*
 C. *Uhud* D. *Badr*
64. The surah of the Quran that gives warning of punishment to people who neglect to perform salat and help the poor is
 A. *Falaq* B. *Fatiha*
 C. *Kafirun* D. *Maun*
65. Fatuma, a grade III pupil, has found a pen in the school playground. The right action for her to take is to
 A. *keep it to herself*
 B. *give it to her teacher to look for the owner*
 C. *give it to her friend who needs a pen*
 D. *leave it where it is*
66. Which one of the following Surahs teaches Muslims that those who are patient will enter paradise?
 A. *Kafirun* B. *Ikhlas*
 C. *Asr* D. *Kauthar*
67. The prophet (S.A.W) said, "Muslims are like a single building each side holds the other." The hadith teaches the importance of
 A. *unity among Muslims*
 B. *congregational prayers*
 C. *building strong houses*
 D. *social gathering*
68. Which one of the following statements is **not true** concerning the first revelation of the Qur'an?
 A. *The prophet was meditating in the cave Hira when the first revelation occurred*
 B. *Surah Iqra was the first to be revealed*
 C. *The first revelation was through the angel Jibril*
 D. *The prophet was performing one of the daily prayers when the first revelation occurred*
69. Allah created man because He wanted man
 A. *not to shed one another's blood*
 B. *to enjoy worldly life*
 C. *not to make mischief on earth*
 D. *to be his Khalifa*
70. In Tayammum we do not
 A. *wipe our faces*
 B. *wipe our hands*
 C. *make Niyyah*
 D. *wipe our feet*

71. The reason why Muslim children should learn to recite the Qur'an is to enable them to
- understand the divine revelation
 - obey parents and elders
 - perform the five daily prayers
 - become good citizens
72. The prophet (S.A.W) said, 'The best Sadaqa is the one which is given by the right hand while the left hand is not aware of it.' Which one of the following statements Best explains the meaning of Hadith? We should
- give Sadaqa with our right hand
 - not give Sadaqa with our left hand
 - avoid giving while standing
 - not make public the Sadaqa we give out
73. The only time when we can disobey our parents is when
- they send us out at night
 - they send us at many times
 - we have homework
 - they want us to do shirk
74. From the story of prophet Ibrahim, a Muslim can learn that
- kings are Allah's agents on earth
 - he should offer sacrifices regularly
 - fire cannot destroy a prophet
 - he should be firm in his faith
75. It is compulsory for a Muslim pilgrim to
- visit the prophet's grave
 - assemble at Arafat
 - perform Umra before Hajj
 - slaughter a goat
76. The wearing of Ihram during Hajj is a symbol of
- equality of Muslims
 - universal peace
 - Muslims tolerance
 - is a form of worship
77. In order to be accepted as correct, a hadith must be
- narrated by at least ten people
 - traced to the Holy prophet
 - traced to one of the four Caliphs
 - narrated by a companion of the prophet
78. According to the teachings of Islam, one of the following sins will not be forgiven by Allah. Which one is it?
- Murder
 - Zina
 - Stealing
 - Shirk
79. Muslims believe in all the prophets **mainly** because
- they are not many
 - they were sent
 - they want us to believe in them
 - they died for us
80. Soon after the birth of a Muslim child adhan and Iqamah are pronounced in his ear **mainly** to
- welcome him into the family
 - stress the importance of salah in his life
 - make him aware of the existence of Allah
 - bliss the new born child
81. The main reason why Muslims do **not** take drugs is because
- the sahaba did not use drugs
 - drugs are harmful to family health
 - Allah has forbidden the taking of drugs
 - it is not allowed by the doctors
82. The prophet (S.A.W) was taken to Isra Wal Miraj **mainly** to
- give him relief over the death of his wife and uncle
 - meet other prophets
 - see other countries
 - have a ride on Buraq
83. The **most** important result of the conquest of Makkah by the prophet was that
- Abu Sufyan, the worst enemy of Islam, became a Muslim
 - the prophet won the heart of the people because of his kindness
 - Makkans stopped worshipping idols
 - Makkans accepted Mohammad (p.b.u.h) as a leader
84. Among the duties of a Muslim parent to his child as taught by prophet Muhammad (S.A.W) is to
- give a good name
 - encourage marriage after puberty
 - give education
 - teach cleanliness
85. In Islam, marriage can only be accepted if
- the bridegroom has given sadaqa to the poor
 - a dua is recited
 - there is a wedding party
 - the parties involved have agreed
86. Laila - tul - Qadr is regarded as a holy night by Muslims because the
- prophet went on the journey to heaven
 - order for the five daily prayers was given
 - Holy Qur'an was revealed to the prophet
 - prophet went on hijrah
87. Who among the following encouraged the spread of Islam into the interior of Kenya?
- Sayyid Said
 - Persian explorers
 - Indigenous people
 - Arab merchants
88. The first prophet of Allah to be circumcised was
- Ibrahim
 - Musa
 - Issa
 - Ishaq
89. Muslims play dufuf in their festivals **mainly** to
- promote their cultural heritage
 - show obedience to God's command
 - draw people's attention
 - make up for what they miss in modern music
90. Which one of the following sunnah prayers is said after a faradh prayer?
- Tahajud
 - Qabliyah
 - Baadiyah
 - Kusuf