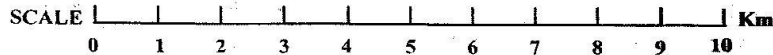
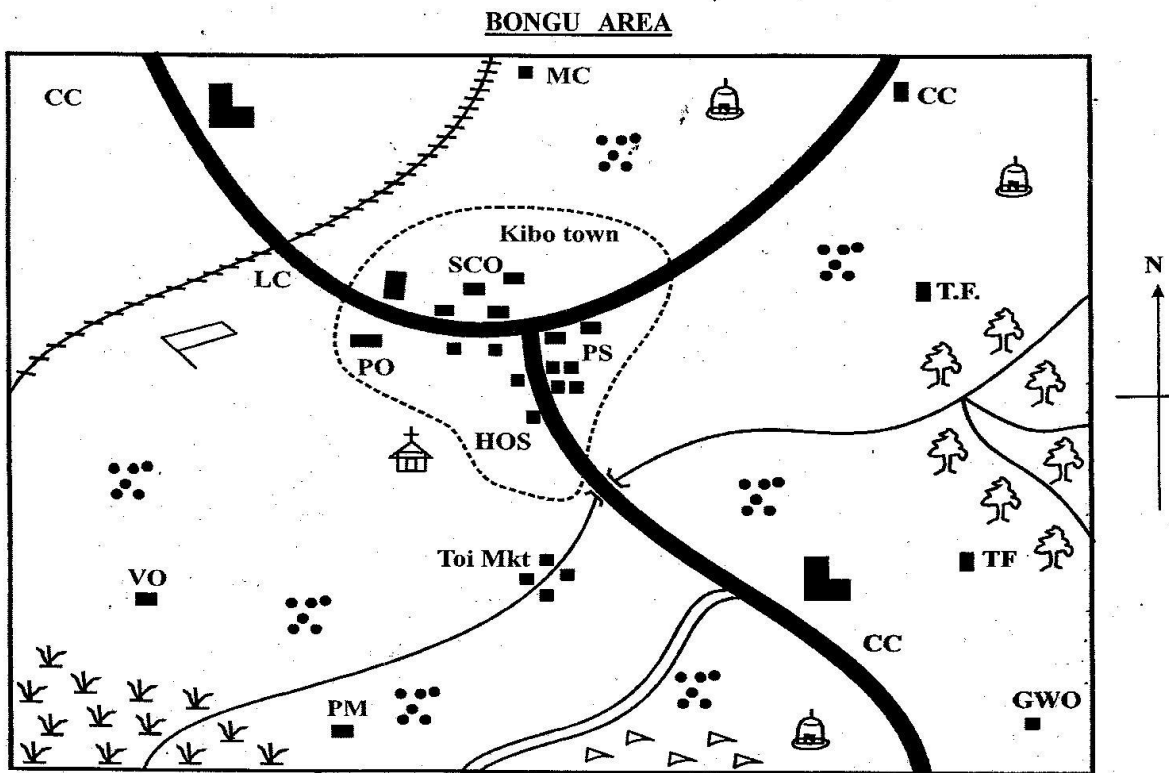


# CLASS 7 END TERM 3 DECEMBER 2021

## SOCIAL STUDIES & CRE



**KEY:**

|  |                     |  |                  |            |                      |
|--|---------------------|--|------------------|------------|----------------------|
|  | Tarmac road         |  | Forest           | <b>CC</b>  | Chief's Camp         |
|  | Railway line        |  | River and Bridge | <b>PS</b>  | Police Station       |
|  | Murram road         |  | School           | <b>SCO</b> | Sub-County Office    |
|  | Permanent buildings |  | Paddy field      | <b>VO</b>  | Veterinary Office    |
|  | Settlements         |  | Swamp            | <b>PM</b>  | Paddy Mill           |
|  | Church              |  | Airstrip         | <b>MC</b>  | Meat Commission      |
|  | Town boundary       |  | Hospital         | <b>TF</b>  | Tea Factory          |
|  |                     |  |                  | <b>GWO</b> | Game Wardens' Office |
|  |                     |  |                  |            | Mosque               |

Study the map of Bongu Area above and use it to answer questions 1 - 7.


1. What is the general direction of the forest from paddy mill?  
A. North West            B. North East  
C. South West            D. South East
2. The approximate length of the railwayline is  
A. 8km                      B. 14km  
C. 9.6km                  D. 6km
3. Which one of the following crops is **most** likely being grown in the paddy field?  
A. Rice                      B. Bananas  
C. Sorghum                D. Coffee
4. The main reason that led to the rapid growth of Kibo town is  
A. good transport network    B. tourism  
C. good security                D. good drainage
5. Which one of the following is **not** an economic activity carried out in Bongu Area?  
A. Tourism                  B. Farming  
C. Trading                  D. Lumbering
6. The **main** religion of the people of Bongu Area is  
A. Christianity                B. Paganism  
C. Islam                      D. Traditionalism
7. The **main** administrator of Bongu area is  
A. Sub county officer  
B. Chief  
C. Sub chief  
D. Governor
8. Which one of the following groups of communities used the same migration route as the Nyamwezi of Tanzania?  
A. Basoga, Batoro, Agikuyu  
B. Aembu, Taveta, Pare  
C. Ngoni, Yao, Akamba  
D. Luo, Maasai, Pokot
9. Which one of the following was **not** a ceremony conducted in the traditional African societies?  
A. Birth                      B. Initiation  
C. Naming                  D. Graduation
10. The following are conditions favouring growth of a certain crop  
(i) Sunny dry weather during harvesting  
(ii) Black cotton soils  
(iii) Rainfall of about 500mm during growth  
(iv) Temperature ranges of 18° and above  
Which one of the following is a product of the crop that can be grown under the

conditions named above?

- |             |                    |
|-------------|--------------------|
| A. Beverage | B. Pesticides      |
| C. Clothing | D. Confectionaries |
11. Distribution of vegetation on a mountain is **mainly** influenced by  
A. altitude                  B. soil type  
C. human activities        D. altitude
  12. Which one is not a quality of a responsible citizen in Kenya?  
A. Tax complaint  
B. Organises civil disobedience  
C. Participates in elections.  
D. Promotes tolerance.
  13. Which one of the following is a form of child abuse?  
A. Discouraging compulsory education  
B. Discouraging genital mutilation  
C. Discouraging early marriage  
D. discouraging all maltreatments
  14. The best way of reducing students' unrest in Kenyan schools is by  
A. encouraging the prefects to report indiscipline cases.  
B. expelling indisciplined children.  
C. arresting students causing unrests.  
D. encouraging students to observe school rules
  15. The **main** cash crop grown in Ethiopia is  
A. sugarcane                B. tea  
C. cloves                    D. coffee
  16. Which one of the following minerals is correctly matched with its product?  

| <u>Mineral</u> | <u>Product</u>      |
|----------------|---------------------|
| A. Copper      | - toothpaste        |
| B. Petroleum   | - cosmetics         |
| C. Soda ash    | - vehicle radiators |
| D. Diatomite   | - glasses           |
  17. The following are contributions of a prominent African leader  
(i) Led his country to independence  
(ii) Supported liberation movements of many countries  
(iii) Voluntarily retired from power in 1985  
(iv) Was a great peace crusader  
The contributions above are associated with  
A. Julius Nyerere  
B. Haile Sellasie  
C. Sedar Senghor  
D. Nelson Mandela

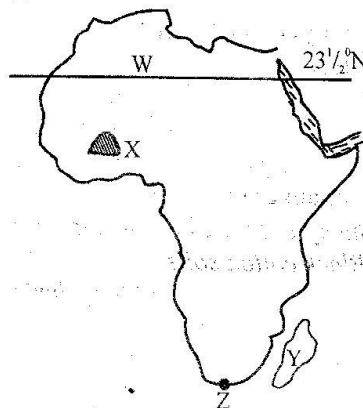
18. Which one of the following groups of communities in Kenya did not pass through Shungwaya during migration?  
 A. Agikuyu, Aembu, Oromo  
 B. Oromo, Taita, Pokomo  
 C. Abagusii, Abakuria, Maasai  
 D. Galla, Ameru, Akamba
19. Which of these towns is the oldest?  
 A. Kisumu                      B. Nairobi  
 C. Mombasa                    D. Machakos
20. The following road sign indicates



- A. left turn                      B. right turn  
 C. no turning                    D. no entry
21. Which one of the following is the best action to take when dissatisfied with government policies?  
 A. Organise a civil coup to take over government  
 B. Vote for a different party with better policies  
 C. Leave the country forever  
 D. Pray for those in government to change
22. One cannot qualify to be a citizen of more than one country when  
 A. serving as a member of parliament.  
 B. serving as a senator.  
 C. serving as a doctor.  
 D. serving as a military officer.
23. Which one of the following is a positive effect of colonial rule in Eastern Africa?  
 A. Free labour to colonial masters.  
 B. Forced taxation upon Africans.  
 C. Introduction of new breeds of animals.  
 D. Loss of political independence.
24. The national park found in Tanzania among the following is  
 A. Serengeti                      B. Maasai Mara  
 C. Tsavo                            D. Ruma
25. In Buganda kindgom the final judgment in a case was made by  
 A. Omulamuzi                    B. Omwanika  
 C. Katikiro                        D. Kabaka

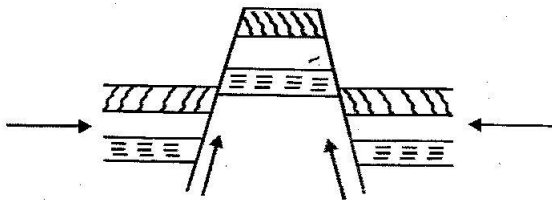
26. The major problem facing northern Kenya as a tourist destination is  
 A. harsh weather  
 B. insecurity  
 C. poor infrastructure  
 D. non-existent attractions
27. Which one of the following moral values should be taught to children to reduce cases of corruption in Kenya?  
 A. Courtesy and obedience  
 B. Kindness and humility  
 C. Honesty and integrity  
 D. Humility and respect
28. The black colour in Kenyan flag symbolises  
 A. fight for independence.  
 B. Kenyan people.  
 C. peace.  
 D. agriculture.
29. Which one of the following group of rivers drain into the Atlantic ocean?  
 A. Cunene, Volta, Congo  
 B. Zambezi, Limpopo, Nile  
 C. Senegal, Tana, Rufiji  
 D. Gambia, Juba, Chari
30. The main economic activity of the pygmies of the Congo basin is  
 A. crop farming  
 B. cattle keeping  
 C. mining and pastoralism  
 D. hunting and gathering
31. Which one of the following is the main importance of marriage?  
 A. Helps reduce the spread of HIV/AIDS  
 B. It forms the basis for which a family is formed.  
 C. Creates a sense of responsibility  
 D. People are able to live and support each other

**Use the map of African below and answer questions 32-35.**





32. The sun is overhead in the latitude marked W in the month of  
 A. December                      B. September  
 C. June                              D. March
33. The plateau marked X is known as  
 A. Fouta-Djalon                  B. Jos plateau  
 C. Nyika plateau                  D. Jabel Adgad plateau
34. The country marked Y was colonised by the  
 A. Germans                        B. British  
 C. French                          D. Portuguese
35. The **most** Southerly point of Africa marked Z is known as  
 A. Cape Blanco                  B. Cape Agulhas  
 C. Cape Ras Hafun                D. Cape Verde
36. Which one of the following symbols is **not** found on the coat of arms in Kenya?  
 A. Spears and a cockerel  
 B. Mount Kenya and lions  
 C. Pens and books  
 D. Crops and shield
37. Which of these types of fish in caught in marine fishing grounds?  
 A. Tuna                              B. Tilapia  
 C. Mudfish                         D. Nile perch
38. Which one of the following group of Bantu communities are **mainly** found in Uganda?  
 A. Chagga, Wapare, Gogo  
 B. Basoga, Batoro, Abaluhya  
 C. Bahima, Bagisu, Banyankole  
 D. Baganda, Zaramo, Fipa
39. Use the diagram below to answer the following question.



- Which one of the following groups of mountains were formed as a result of the process above?  
 A. Atlas, Akwapim, Drankesberg  
 B. Kilimanjaro, Kenya, Ahaggar  
 C. Longonot, Hombuli, Namuli  
 D. Kharas, Pare, Aberdare
40. The following are problems facing most urban centres in Eastern Africa. Which one is **not**?  
 A. Traffic congestion  
 B. Poor garbage disposal  
 C. Adequate housing  
 D. Increased crime rate

41. Who among the following early visitors to Eastern Africa was the first missionary to come to Eastern Africa?  
 A. Dr. David Livingstone  
 B. Dr. Ludwig Krapf  
 C. John Rebman  
 D. H.M Stanley
42. Who among the following IEBC officials announces the constituency vote results?  
 A. Presiding officer    B. Polling clerks  
 C. Returning officer    D. Commissioners
43. Which one of the following places is the least populated in Africa?  
 A. Miombo woodlands  
 B. Niger delta  
 C. Shores of lake Malawi  
 D. Eastern Madagascar
44. The **main** reason for the establishment of Aswan high dam was to  
 A. generate hydro electric power  
 B. create tourism destination  
 C. control floods  
 D. provide water for irrigation
45. Which one of the following groups of communities were ruled by kings before the colonial rule in Eastern Africa?  
 A. Nyamwezi, Maasai, Baganda  
 B. Abawanga, Yao, Chagga  
 C. Nyamwezi, Agikuyu, Taveta  
 D. Soninke, Baganda, Abawanga
46. The most senior civil servant in a government department is  
 A. Attorney general  
 B. Cabinet secretary  
 C. Head of Public Service  
 D. Principal secretary
47. Both Khoikhoi and the San  
 A. speak with click sounds  
 B. are mainly farmers  
 C. live in West Africa  
 D. had chiefdoms
48. Which one of the following trade organizations is **not** correctly matched with its headquarters?
- | Trade organisation | Headquarters |
|--------------------|--------------|
| A. SADC            | - Djibouti   |
| B. COMESA          | - Lusaka     |
| C. ECOWAS          | - Abuja      |
| D. EAC             | - Arusha     |

49. The political party that led Tanganyika to independence was known as  
 A. TAA                                      B. UTP  
 C. CCM                                        D. TANU
50. In Kenya, the swearing in of the president elect is done  
 A. immediately after declaration of results  
 B. after a petition has been filled  
 C. the first Tuesday of 14 days after elections  
 D. the first Thursday of 14 days after elections
51. A pilot observed the head of a windvane pointing East. He concluded that the wind was blowing to  
 A. East                                        B. West  
 C. North                                       D. South
52. Which one of the following was the **main** form of interaction between communities in Kenya in the past?  
 A. Games and sports    B. Inter-marriage  
 C. Trade                                        D. Education
53. Which one of the following products is **not** matched with the type of industry it belong?
- | <u>Industry</u> | <u>Product</u> |
|-----------------|----------------|
| A. Assembly     | - electronics  |
| B. Service      | - transport    |
| C. Processing   | - glass making |
| D. Manufacture  | - shoe making  |
54. Which one of the following was a privilege enjoyed by Africans who were assimilated in Senegal?  
 A. They practised polygamy  
 B. Loyalty to the French government  
 C. Speaking and writing in French  
 D. Direct employment
55. Which one of the following are inland fishing grounds in Tanzania?  
 A. Rukwa, Eyasi, Manyara  
 B. Lindi, Pangani, Mafia  
 C. Sió, Yembek, Kafu  
 D. Shimoni, Natron, Ngomeni
56. The following are secondary family needs **except**  
 A. education                                B. health  
 C. security                                    D. shelter
57. Which one of the following group of leaders were friendly to the colonial rule?  
 A. Koitalel, Mwangi, Samouri Toure  
 B. Mumia, Lenana, Mutesa  
 C. Mkwawa, Lenana, Mumia  
 D. Mkwawa, Lewanika, Mwangi

58. The best measure the government can take to conserve the water catchment areas is  
 A. encouraging afforestation  
 B. banning lumbering  
 C. stiff penalties to charcoal burners.  
 D. gazzettment of forested areas
59. The Agiriama under Mekatilili remained united because they  
 A. were all warriors  
 B. feared the British  
 C. were loyal to their leaders  
 D. had taken an oath
60. The main reason why the government of Kenya protects wildlife is because it  
 A. creates employment  
 B. earns foreign exchange  
 C. helps in scientific research  
 D. is a source of game meat

#### **CHRISTIAN RELIGIOUS EDUCATION.**

61. From the Biblical stories of creation God created Adam and Eve to  
 A. eat all the fruits in the garden  
 B. build altars  
 C. care for the environment  
 D. offer gifts to Him
62. The third book in the Old Testament of the Bible is  
 A. Exodus                                      B. Deuteronomy  
 C. Numbers                                    D. Leviticus
63. God sent Adam and Eve away from the garden of Eden mainly because  
 A. they had hidden from God  
 B. they had chosen to stay naked  
 C. they had spoken to the snake  
 D. they had broken God's command
64. The sign of the covenant between God and Noah was  
 A. rainbow                                      B. fire  
 C. floods                                        D. cloud
65. Who among the following judges Israel gave his only daughter as a sacrifice?  
 A. Gideon                                        B. Ehud  
 C. Jephthah                                    D. Abimelech
66. The best gift one can ask God according to king Solomon is  
 A. children                                        B. wisdom  
 C. bravery                                        D. riches



67. Who among the following was the father in law of Moses?  
 A. Joshua                      B. Laban  
 C. Terah                        D. Jethro
68. Which one is an achievement of King David?  
 A. He killed a lion and a bear  
 B. He made Jerusalem a capital city  
 C. He married many wives  
 D. He built the temple
69. One of the following prophets referred to the Messiah as a prince of peace. Who was he?  
 A. Isaiah                        B. Amos  
 C. Jeremiah                    D. Joel
70. Which one of the following took place when John the baptist was born?  
 A. Some shepherds visited the baby  
 B. Zachariah became dumb  
 C. Elizabeth's neighbours rejoiced  
 D. Wisemen came from the East
71. Who among the following were the first people to witness the birth of Jesus?  
 A. The wisemen  
 B. Cleopas and his friend  
 C. Simeon and the prophetess Ann  
 D. The shepherds
72. The following are gifts that baby Jesus received **except**;  
 A. manger                      B. gold  
 C. frankincense                D. myrrh
73. The disciple of Jesus who was a tax collector before being called was  
 A. Judas Iscariot                B. Andrew  
 C. Simon Peter                 D. Levi
74. Jesus met with Zaccheaus in the town of  
 A. Bethlehem                  B. Nazareth  
 C. Jericho                        D. Jerusalem
75. Who among the following people offered a tomb to bury the body of Jesus Christ?  
 A. Simon Peter                 B. Simon of Cyrene  
 C. Nicodemus                  D. Joseph of Arimathea
76. "Unless I see the scars of the nails in his hands and put my fingers on the scars and my hand in his side, I will not believe it." These words were said by Thomas when the disciples told him that Jesus had  
 A. ascended to heaven  
 B. been buried in the tomb  
 C. risen from the dead  
 D. died on the cross
77. When Jesus healed the ten lepers, the one who went back to thank him was a  
 A. Jew                              B. Cananite  
 C. Sirian,                         D. Samaritan
78. Three of the following events took place on the day Jesus died except one. Which one is it?  
 A. An angel spoke to Mary Magdalene  
 B. There was darkness for three hours  
 C. There was an earthquake  
 D. The curtain in the temple was torn into two
79. Which one of the following activities demonstrates the gift of the Holy Spirit?  
 A. Giving clothes to the needy  
 B. Preaching to people.  
 C. Singing happily in a church choir  
 D. Not being rude to others.
80. The **main** reason why Stephen was stoned to death by the Jewish leaders was that he  
 A. claimed that Jesus was the son of God  
 B. performed miracles on the sabbath day  
 C. baptized the non-Jews  
 D. told people to pay taxes to Caesar
81. Which one of the following types of worship is practised in both African Traditional society and christianity?  
 A. Reciting creeds  
 B. Celebrating sacraments  
 C. Reading scriptures  
 D. Singing and dancing
82. Which one of the following is a right of passage in African traditional society?  
 A. Birth  
 B. Baptism  
 C. Confirmation  
 D. Dowry payment
83. In Traditional African communities children are told folktales mainly to  
 A. teach them their culture  
 B. entertain them  
 C. teach them moral values  
 D. keep them occupied
84. Which one of the following is the best way of reconciling with the ancestors in African Traditional communities?  
 A. Calling the names of the ancestors  
 B. Visiting shrines  
 C. Preserving their graves  
 D. Offering sacrifices





72. The term "Ahlul -Bait" means  
 A. the people of the house  
 B. the people of the mosque  
 C. the people of the book  
 D. the migrators
73. Which among the following is **not** an optional prayer?  
 A. Dhaha                      B. Badiyyah  
 C. Taraweh                    D. Jumaa
74. Which one is not among faradh parts to be washed during wudhu?  
 A. Wiping the hair  
 B. Wiping the ears  
 C. Washing the feet  
 D. Washing the arms
75. The prophet S.A.W had 7 children. How many were girls?  
 A. 4                              B. 5  
 C. 6                              D. 3
76. Welcoming and showing kindness to a guest is a sign of  
 A. patience                      B. cruelty  
 C. hospitality                    D. generosity
77. During the conquest of Makka the first thing the prophet did was  
 A. building a mosque  
 B. Bilal made Adhan  
 C. he visited his old house  
 D. destroyed the idols
78. Alcohol is rijs. The term rijs means  
 A. filth                          B. dirt  
 C. najis                          D. sacred
79. How many people came from Madina to meet the prophet in second pledge of Aqaba?  
 A. 70                              B. 12  
 C. 73                              D. 75
80. Who was the prophet who took care of Mariam the mother of prophet Musa?  
 A. Yahya                          B. Zakariya  
 C. Suleiman                      D. Musa
81. Which of the following attributes of Allah mean a designer?  
 A. Al-Alim  
 B. Al-Qahar  
 C. Al-Wahab  
 D. Al-Musawwir
82. Which of these two will intercede for the servant of Allah on the day of judgement?  
 A. Fasting and hajj  
 B. Shahada and salat  
 C. Fasting and Quran  
 D. Hajj and salat
83. Aura means  
 A. parts of the body that should be covered  
 B. parts of the body that should be washed  
 C. parts of the dead body  
 D. parts of the body that are unclean
84. When someone dies and has not completed making his fast, for the missed days  
 A. he will be forgiven  
 B. his/her heirs will have to fast on his/her behalf  
 C. he will fast in jannah  
 D. fidya will be given out
85. Washing yourself after the call of nature is called  
 A. udhu                          B. tayammum  
 C. ghusl                          D. istinjai
86. Salfiya is suffering from the deadly disease AIDS. As a muslim what should you do?  
 A. Encourage her to be patient and take medicine  
 B. Avoid her  
 C. Kill her  
 D. Laugh and mock her
87. The minimum amount for Zakat is referred to as  
 A. Nisaab                          B. Nikaal  
 C. 2 $\frac{1}{2}$ %                          D. 5%
88. How many idols were around the Kaaba?  
 A. 50                              B. 300  
 C. 360                              D. 400
89. Which of the following is Halal for the Muslims?  
 A. Fish                              B. Snail  
 C. Miraa                            D. Brown sugar
90. If you intend to do something in future, one should say  
 A. Subhanallah                    B. Inshaallah  
 C. Shukran                          D. Innalilah