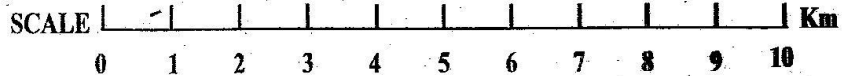
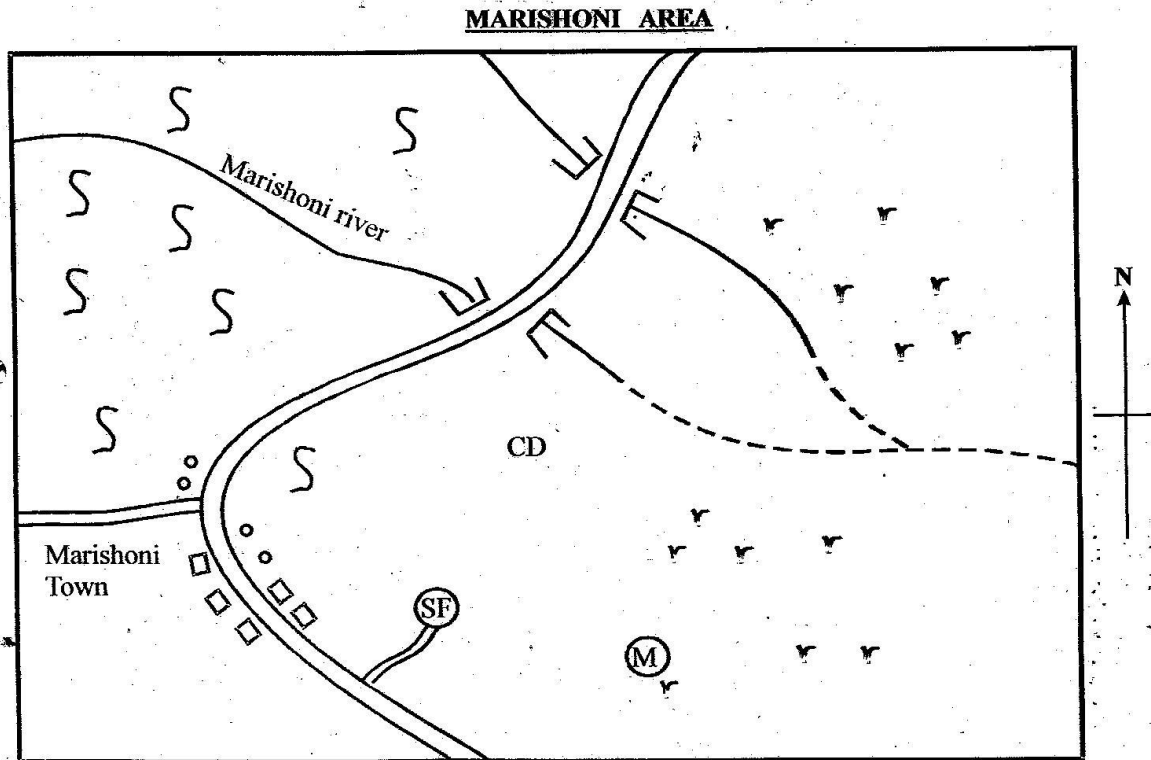


CLASS 6 END TERM 3 DECEMBER 2021

SOCIAL STUDIES & CRE



KEY

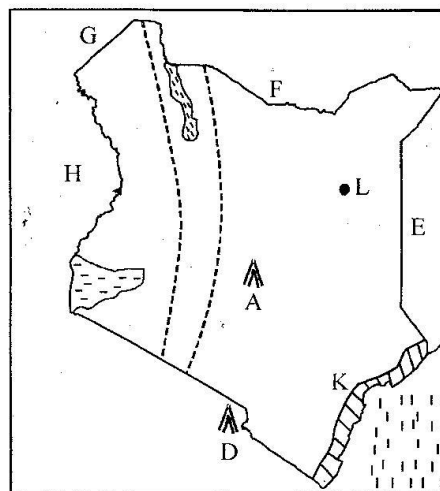
S S S	Sisal	□ □	Semi permanent houses	CD - Cattle dip
r r	Grass	CC - Chief's camp		— E — River and bridge
(M)	Mosque	~~~~~	Murram road	(SF) Sisal Factory
-----	Seasonal river	○ ○ ○	Settlement	

Study the map of Marishoni Area above and use it to answer questions 1 - 7.

- River Marishoni flows from _____ to _____
 A. North West to South
 B. East to North West
 C. North West to East
 D. North East to West
- What is the general climate of Marishoni area?
 A. Cool and wet B. Cool and dry
 C. Hot and wet D. Hot and dry
- What type of factory is shown in the map?
 A. Manufacturing B. Processing
 C. Service D. Jua kali
- Who is administering Marishoni area?
 A. Chief B. Governor
 C. Senator D. Assistant chief
- Which economic activities are popular in Marishoni area?
 A. Agriculture and lumbering
 B. Cash crop farming and livestock keeping
 C. Transport and mining
 D. Transport and fishing
- The **main** form of transport in Marishoni area is
 A. air B. water
 C. railway D. road
- Most people living in Marishoni Area are likely to be
 A. Muslims B. Christians
 C. Pagans D. Traditionalists.
- Which one of the following is the **main** reason as to why the Agikuyu settled in the central parts of Kenya during migration?
 A. Plenty of land for grazing.
 B. Fertile land for farming.
 C. Availability of goods for trade.
 D. Spirit of adventure.
- The **main** reason why artefacts are preserved in museums is
 A. to earn income
 B. to attract tourists
 C. to preserve our culture
 D. for enjoyment.
- When did Kenya gain her full independence?
 A. 12/12/1964 B. 1/6/1963
 C. 12/12/1963 D. 20/10/1964
- Which one of the following activities does not show patriotism?
 A. Working communally in a project.
 B. Helping the hungry in the country.
 C. Attending sports to represent the country.
 D. Employing family members only.

- Which one of the following factors affects time but **not** climate?
 A. Latitude B. Longitude
 C. Wind D. Ocean currents

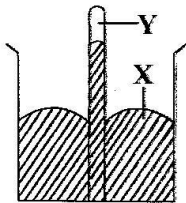
Use the map below to answer questions 13-16.



- Through which process was the mountain marked **A** formed?
 A. faulting and sinking
 B. faulting and uplifting
 C. volcanicity
 D. downwarping
- Which economic activity in Kenya is mostly being practised in the shaded region marked **K**?
 A. Dairy farming.
 B. Tourism.
 C. Lumbering.
 D. Horticultural farming.
- Which country bordering Kenya above was never colonised?
 A. H B. J C. E D. F
- Which town is labelled **L** above?
 A. Wajir B. Marsabit.
 C. Garissa D. Moyale
- In traditional African society, farming was carried out **mainly** for one of the following reasons. Which one is it?
 A. For sale.
 B. For subsistence use.
 C. To give to livestock.
 D. For industrial use.
- Who is the head of education in a county?
 A. County Director of Education.
 B. County Commissioner.
 C. Sub-county Director of Education.
 D. Teachers Service Commission.

19. Which one of the following areas is sparsely populated in Tanzania?
 A. Dar-es-Salaam.
 B. Areas around Arusha town.
 C. Moshi town.
 D. Miombo woodlands of Central Tanzania.
20. Which statement below is true about meridians?
 A. They are parallel to each other.
 B. They meet at the poles.
 C. They affect climate.
 D. The main meridian is the equator.
21. Which one of the following is **not** an element of a good map?
 A. Title
 B. Frame
 C. Scale
 D. Colour
22. Which crop below requires vast areas where machines can be used to plant and harvest the yields?
 A. Coffee
 B. Pyrethrum
 C. Wheat
 D. Tea
23. Which one of the following was the main duty of the council of elders?
 A. Appointing leaders.
 B. Hearing and settling disputes.
 C. Rewarding warriors.
 D. Choosing activities to be done in families.
24. Which one of the following is **not** a fresh water lake?
 A. Lake Magadi
 B. Lake Victoria
 C. Lake Turkana
 D. Lake Naivasha
25. When the Europeans came to Eastern Africa, they established colonial rule mainly because
 A. they wanted to spread Christianity
 B. they wanted to take Africans as slaves
 C. they wanted raw materials for their industries
 D. they wanted land to settle.
26. Which factor has influenced dense settlement around Lake Magadi?
 A. Agriculture.
 B. Fertile soil.
 C. Trading.
 D. Mining.
27. Which arm of the government implements government policies?
 A. Executive.
 B. Police.
 C. Judiciary.
 D. Parliament.
28. Who among the following is elected to represent a county in the senate?
 A. Governor.
 B. MCA
 C. M.P
 D. Senator.
29. Who makes laws in a county?
 A. MPS
 B. County representatives.
 C. Senators.
 D. Women representatives.
30. Which river does **not** drain into the Indian ocean?
 A. Ewaso Nyiro North
 B. Tana
 C. Athi
 D. Pangani
31. Which fishing method below is **not** recommended because of overfishing?
 A. Long lining
 B. Purse seining
 C. Net drifting
 D. Trawling
32. Which is the longest latitude?
 A. Tropic of capricorn
 B. Prime meridian
 C. Equator
 D. Tropic of cancer
33. Which one of the following is the **main** problem facing coffee farming in Kenya?
 A. Fluctuation of prices
 B. Harsh climate
 C. Strong winds
 D. Theft of berries
34. Which is the highest court in Kenya?
 A. High Court
 B. Supreme Court
 C. District magistrate Court
 D. Court of Appeal
35. Which is the fastest means of transport?
 A. Road
 B. Railway
 C. Air
 D. Water
36. Which country is to the North West of Kenya?
 A. Eritrea
 B. Uganda
 C. Sudan
 D. South Sudan
37. The council of elders among the Ameru was known as
 A. Njuri Ncheke
 B. Mugambi
 C. Mugwe
 D. Njuri Impere
38. Which one of the following is **not** among the nine sub-tribes of the Mijikenda?
 A. Jibana
 B. Digo
 C. Ribe
 D. Pokomo.
39. Which body below is incharge of conducting elections in Kenya?
 A. IEBC
 B. ECK
 C. EAC
 D. NCKK
40. In which climate is dairy faming best being carried out in Kenya?
 A. Cool and wet
 B. Cool and dry
 C. Hot and dry
 D. Hot and wet
41. When a criminal is caught, what should be done to him or her?
 A. Burn him to death.
 B. Beat him up.
 C. Take him to the police station.
 D. Fine him.

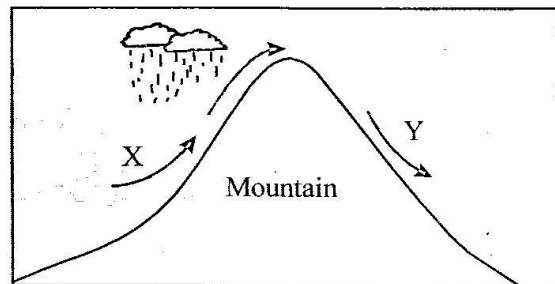
42. Which forest below is found at the coast?
 A. Mt Kenya B. Aberdare
 C. Arabuko Sokoke D. Mau
43. Which one of the following should **not** be done by a child?
 A. Provide food for the family
 B. Do the homework given
 C. Help in house chores
 D. Assist the aged people
44. Which group of these people displaced the Bantus from Shungwaya?
 A. Galla B. Rendile
 C. Somali D. Iraqw
45. Which one of the following is not a method that was used to teach the youths in the past?
 A. Songs B. Riddles
 C. Writing D. Stories
46. Why was the pipeline **mainly** constructed to transport oil from Mombasa?
 A. To avoid employing truck drivers
 B. To create employment
 C. To transport oil easily at night
 D. To prevent road damage by oil tankers
47. Which one of these statements is true about the Akamba?
 A. They were long distance traders
 B. They are nilotes
 C. They mainly settled in Rift Valley
 D. They were mainly fishermen
48. The weather instrument below is known as



- A. anemometer. B. hygrometer.
 C. barometer. D. thermometer.
49. Which was the **main** economic activity of the Arabs when they came to East African Coast
 A. Mining B. Fishing
 C. Farming D. Trade
50. Which type of a family consists of father, children, uncle and grandparents?
 A. Single parent B. Polygamous
 C. Extended D. Nuclear
51. Which of the following rivers form a confluence at Khartoum?
 A. White Nile and Blue Nile
 B. Tana and Athi
 C. Turkwel and Kerio

52. Which of the following mountains were formed through faulting and uplifting?
 A. Mt Ruwenzori, Mt Longonot
 B. Pare, Usambara
 C. Mt Kenya, Mt Elgon
 D. Mt Meru, Mt Kulal
53. Which one of the following communities settled at Pabungu-Pakwach?
 A. The Plain Nilotes
 B. The River Lake Nilotes
 C. The Semites
 D. The Highland Nilotes
54. In which one of the following areas are wildlife and game animals mostly found?
 A. Swampy areas. B. Highland areas.
 C. Desert areas. D. Savannah areas.

Use the map below to answer questions 55-57.



55. Which type of winds are found on the side marked X?
 A. Cool and moist B. Hot and dry
 C. Warm and moist D. Cool and dry
56. Which town can be on the part marked Y?
 A. Nyeri B. Kiambu
 C. Nanyuki D. Murang'a
57. Which crops are **mainly** grown on the side marked X?
 A. Cotton, tea B. Sisal, cotton
 C. Sisal, tea D. Tea, coffee
58. The following are seaports in Eastern Africa **except**
 A. Dar-es-Salaam. B. Massawa.
 C. Mogadishu. D. Arusha.
59. A structure where delicate weather instruments are kept is called
 A. Stevenson's screen B. weather station
 C. weather room D. weather chart
60. Which one of the following is **not** a source of government revenue?
 A. Taxes.
 B. Harambee contributions.
 C. Loans.
 D. Court fines.

SECTION 11

CHRISTIAN RELIGIOUS EDUCATION.

61. Which one of the following is true about creation?
A. God created and rested on the 6th day
B. God rested after creating everything
C. Man was created on the 7th day
D. God created the sun on the 5th day
62. Which among the following books of the bible means origin?
A. Revelation B. Malachi
C. Exodus D. Genesis
63. On which mountain was Moses given the ten commandments?
A. Mt Ararat.
B. Mt Sinai
C. Mt Carmel
D. Mt Olives
64. Who among the following persons led the Israelites out of Egypt?
A. Moses. B. Joshua.
C. Jacob. D. Caleb.
65. Which one of the following is reason why Noah was saved from the floods?
A. Hardwork
B. Righteousness
C. He was wealthy
D. He was responsible
66. Who among the following prophets prophesied about the birth place of Jesus?
A. Jeremiah
B. Ezekiel
C. Isaiah
D. Micah
67. After the death of Moses, who succeeded him?
A. Aaron B. Samuel
C. Joshua D. Jacob
68. What was sprinkled on people to seal the covenant on Mt. Sinai?
A. Milk B. Wine
C. Blood D. Water
69. Samuel was called by the Lord several times while in the temple. Who was also in the temple at that time?
A. Elikanah. B. Eli.
C. Eliezer. D. Judah.
70. Which prophet prophesied about the new covenant which was to be written in the people's heart?
A. Jeremiah
B. Hosea
C. Isaiah
D. Micah
71. At what age did Jesus attend the first passover festival in Jerusalem?
A. 13 years B. 30 years
C. 7 years D. 12 years
72. Which one of the following was not a miracle performed by Jesus?
A. Walking on water.
B. Feeding of the 5000 men.
C. Raising Lazarus.
D. Changing stones into bread.
73. Which parable below teaches about forgiveness?
A. The ten virgins
B. The prodigal son
C. The talents.
D. The good Samaritan.
74. What happened on the day of pentecost?
A. A dove appeared.
B. Apostles took wine.
C. Apostles spoke in tongues
D. The dead were raised.
75. How many books are in the new testament?
A. 39 B. 66
C. 27 D. 29
76. According to the African Traditional society, it is true to say that
A. God is the creator.
B. God sent Jesus Christ.
C. God rested on the 7th day.
D. God created animals only

77. What is the name of God among the Luo?
 A. Enkai
 B. Ngai
 C. Engoro
 D. Nyasaye
78. Which one of the following practices in traditional African societies is also found in Christianity?
 A. Pouring libation.
 B. Slaughtering animals.
 C. Giving of new names.
 D. Polygamy.
79. Which one of the following is not a fruit of the Holy spirit?
 A. Joy. B. Preaching.
 C. Peace. D. Love.
80. Which one of the following is **not** a rite of passage in traditional African society?
 A. Baptism. B. Birth.
 C. Circumcision. D. Death.
81. How can a christian best spend his leisure time?
 A. Playing football.
 B. Reading the Bible.
 C. Helping the aged.
 D. Watching videos.
82. Kamau is HIV positive, What is the **best** advice that you would give him?
 A. Take medicine for treatment.
 B. Create friends with many pupils.
 C. Ignore doctors.
 D. Go to the hospital.
83. Which one of the following was the **main** aim of education in the traditional African societies?
 A. Preparation for marriage.
 B. Instilling respect and building good character.
 C. Getting good jobs.
 D. Starting business.
84. In which of the following ways is creative thinking used?
 A. Coming up with new ways of solving the problem of lateness in school.
 B. Refusing to start drinking alcohol with your friends.
 C. Believing in yourself while doing assignment.
 D. Making good decision that will help you perform well in school.
85. Who among the following people were given the ability and knowledge to design the tabernacle for the ark of the covenant by God?
 A. Joshua and Caleb
 B. Bezalel and Oholiab
 C. Peter and James
 D. David and Jonathan
86. The **main** cause of child labour is
 A. poverty.
 B. peer pressure.
 C. drug abuse.
 D. lack of parents.
87. Which one of the following is not a virtue?
 A. Forgiveness
 B. Unselfishness
 C. Unkindness
 D. Love
88. Which one of the following happened on the day Jesus was baptized?
 A. Blood drops were seen.
 B. A voice was heard from heaven.
 C. Jesus was tempted.
 D. Jesus took wine.
89. Who was sold by his brothers?
 A. Reuben. B. Jonathan.
 C. Joseph. D. Caleb.
90. A person who speaks the truth always is said to be
 A. obedient. B. humble.
 C. brave. D. honest.

SECTION 11

ISLAMIC RELIGIOUS EDUCATION

61. How many acts of devotion are mentioned in surah AL-Bayyannah?
A. Four B. Three
C. Two D. One
62. The surah which describes the event of the day of Qiyamar is
A. Zilzala
B. Fatiha
C. Tiyn
D. Kaafirun
63. Allah (S.W) is kind and like kindness
A. in all people
B. to the young
C. in everything that we do
D. to the orphans
64. Which type of these animals is considered pure even when dead?
A. Snake
B. Fish
C. Horse
D. Antelope
65. Who among the following prophets of Allah (s.w) turned his walking stick into a snake?
A. Musa
B. Isa
C. Mohammad
D. Ibrahim
66. Who among the following values is emphasized in surah Asr?
A. Courage
B. Kindness
C. Patience
D. Honest
67. The holy Quran was given to prophet
A. Isa
B. Ibrahim
C. Musa
D. Mohammad
68. Belief in the last day is pillar of
A. Islam
B. Imaan
C. Ihsan
D. Prayer
69. Which of the following sins is not forgivable by Allah?
A. Shirk.
B. Fighting.
C. Stealing.
D. Backbiting.
70. We do Tayammum when
A. it is cold
B. we are sick
C. sand is hot
D. water is not available.
71. How many Muslims fought in the battle of Badr?
A. 1000 B. 313
C. 990 D. 3000
72. Hiribal's father was on a deathbed. Which one of the following should he encourage him to say?
A. Subhanallah
B. Ash-hadu anlaa ilaha
C. Inalillah
D. Wainnailil Rajiun
73. Which pillar of Islam was given to the prophet during isra-wal-miraj?
A. Zakat B. Shahada
C. Salat D. Saum
74. A muslim festival celebrated on the 10th of Dhul-hijja is called
A. Miraj
B. Iddul-ul-Adhan
C. Arafat
D. Idda-ul-fitr
75. The payment of zakat is a duty of
A. every rich person
B. every muslim
C. every poor person
D. all prophets

76. Three of the following are true about suratul-Dhuha. Which one is **not**?
- A. *The hereafter is better than the present world*
 B. *It reminds him of his childhood*
 C. *The first revelation*
 D. *Not to be harsh and rough to the orphans.*
77. The prophet (S.A.W) said paradise lies under the feet of
- A. *parents*
 B. *mothers*
 C. *people*
 D. *men*
78. Which of the following surahs talks about a great earthquake which will bring this world to an end?
- A. *Fiyl* B. *Zilzala*
 C. *Yasin* D. *Fatiha*
79. How many people met the prophet during the first pledge of Aqabah?
- A. *14* B. *75*
 C. *11* D. *65*
80. Which one of the following activities shows unity in Muslims?
- A. *Facing the Kaaba during the prayers*
 B. *Putting on robes during idd*
 C. *Breaking fast with dates*
 D. *Celebrating milad-unabi*
81. Which of the following faradh swalat has both sunnah Qabilyah and Baadiyah?
- A. *Maghrib*
 B. *Subh*
 C. *Asr*
 D. *Dhuhr*
82. On her way to school, Rayaana finds a puppy drowning in a stagnant pool. Which one of the following action should she take?
- A. *Leave the puppy to die*
 B. *Save the puppy from dying*
 C. *Push it deeper to die faster*
 D. *Rush to school and tell her friends*
83. The migration of the muslims from Makkah to Madina is referred to as
- A. *Hajj* B. *Hijrah*
 C. *Miraj* D. *Isra*
84. Ismail and Is-haq are both sons of Nabii
- A. *Ibrahim*
 B. *Nuh*
 C. *Adam*
 D. *Mohammad*
85. "Al-Muslim Akhul-Muslim" is the same as saying
- A. *A muslim is a friend of another muslim*
 B. *A muslim is a sister of another muslim*
 C. *Muslims are all related*
 D. *A Muslim is a brother to another muslim.*
86. Aqiqah in Islam is a ceremony for
- A. *birth of prophet Mohammad*
 B. *winning a battle*
 C. *marriage*
 D. *birth of a child.*
87. How many months of the Islamic calendar are Ash-hurul-hurum?
- A. *Three.* B. *Four.*
 C. *Two.* D. *Five.*
88. In which of the following surahs are we told that Allah is the best of all judges?
- A. *Alaq* B. *Tiyn*
 C. *Dhuh* D. *Asr*
89. The fear of Allah (SW) is referred to as
- A. *Tawakkul*
 B. *Ihsaan.*
 C. *Iman.*
 D. *Taqwa.*
90. Jumaa is also called
- A. *final day*
 B. *day of assembly*
 C. *day of prayers*
 D. *happiest day.*