

Class 5 mid term 1 August 2021

Social Studies & Religious Education

SECTION A:

SOCIAL STUDIES

1. The element of a map that shows the name of the area is the

2. Which element of a map can be used to show direction?

Use the words given in the box to fill in the following.

Hills	Bridges
Monuments	Valleys

Natural environment

3. _____

4. _____


Built environment

5. _____


6. _____

Draw the following physical features.


7. Mountain



8. Swamp



9. River



10. Murume, a Grade Five boy, works in a sugarcane farm for payment. How is Murume being abused as a child? _____

11. Name one activity that promotes peace at school.

12. What is the name of the children's president in your school?

13. When teachers allow pupils to choose their leaders in school, what do the teachers practise?

14. The method of trade whereby goods were exchanged with goods was known as _____ trade.

15. You and your friends passed through your local market and found it extremely dirty. As a good citizen, what should you do?

16. How much is the note with the lowest value in your county?

17. What do teachers use to facilitate daily activities in school?

Name the economic activities demonstrated below.

18.



19.



20. Below are descriptions of a certain community:

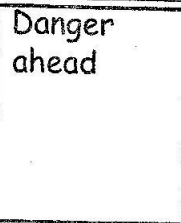
- i) They keep large herds of cattle.
- ii) Their main food is milk, meat and blood from the cattle.
- iii) They have maintained their culture for long.

Name the community described above.

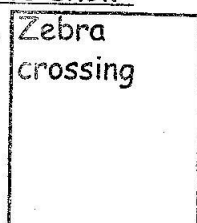
21. Why are music festivals held by schools every year?

Draw a road sign to show:

22.




23.




Describe the population distribution demonstrated below.

24.



25.



PART I: CHRISTIAN RELIGIOUS EDUCATION

26. Write down one of your talents.

27. The main moral lesson Christians learn from the story of Adam and Eve is

28. Name the king who asked God for wisdom.

29. Zebedee has a nice smart phone. Write one good thing he can do with it as a Christian.

30. Write one fruit of the Holy Spirit.

31. Write the first line of the Lord's prayer.

32. What is the other name of Simon the disciple of Jesus?

33. What do you do as a way of honouring the house of God?

34. In the parable of the lost coin, how many coins did the woman have altogether?

35. In which town did Jesus raise a widow's son? _____

36. What did the blind Bartimaeus say to Jesus according to Mark 10:47? _____

37. "Peace be with you! The Lord is with you and has blessed you!" Who told Mary the mother of Jesus these words? _____
38. How old was Abram when he was set out to go to a foreign land? _____
39. Who dreamt about seven fat cows and seven ears of corn? _____
40. What was the name of the short man who was a tax collector? _____


PART II: ISLAMIC RELIGIOUS EDUCATION.

26. Which surah must be recited in every swalah? _____
27. Complete the following verse: Bismillahi Ar-Rahman _____
28. Name the surah that must be recited every night before sleeping. _____
29. Bakari carries more snacks than he can finish but never shares them with anyone. We can say that Bakari is _____

30. In surah Al-Falaq, what does the word Falaq mean? _____
31. As a Muslim, what is the best time to repent? _____
32. What did the Quraish in Makkah worship instead of Allah (SW).

33. Which surah talks about the curse of Abu Lahab and his wife?

34. Abubakar worships Allah while Yuda worship idols. Who between them demonstrates shirk?

35. Name one character trait that made prophet Muhammad a role model. _____
36. What do Muslims say before eating? _____
37. When do Muslims say Alhamdulillahi? _____
38. Name the item drawn below according to hadith.


39. How many beautiful names does Allah have? _____
40. Angels were created from nuur. True or false? _____