

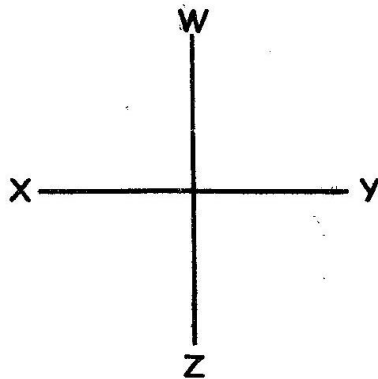
Grade 4 mid term 1 August 2021

Social studies

SECTION A

SOCIAL STUDIES

Name the compass directions indicated by letters.



1. W _____
2. X _____
3. Y _____
4. Z _____
5. North east direction lies between _____ and _____.
6. Which compass direction is found between south and west?


7. In which county is your school?

8. Name your neighbouring county.


9. How many counties are there in our country?

Name the following physical features.

10.



11.



12.



13. In which season do we expect floods? _____
14. Which season leads to famine?

15. During _____ seasons, we wear heavy clothes but not necessarily gumboots.
16. We expect a lot of mud during _____ seasons.
17. During _____ seasons, roofs can be blown away.
18. The act of depending on each other for different reasons is called _____

19. How do learners in your school depend on your teachers?

20. Citizens depend on police officers because police officers maintain

21. What is population?

Identify the following patterns of population distribution.

22. A few houses that are apart.

23. Houses are close to each other and are crowded in one place.

24. Houses are spread along the road. _____
25. Which settlement pattern is in your county _____

SECTION B:
PART I: CHRISTIAN
RELIGIOUS EDUCATION

26. _____ created us in His own image and likeness.
27. Feeling that your friends are better than you is a _____ feeling.

28. You have a 20 shilling coin with which you want to buy an exercise book. A hungry orphan asks you to help him with the coin to buy food. Which choice would you make?

Name members of a nuclear family.

29. _____
30. _____
31. _____
32. _____
33. The _____ is the word of God.
34. How do you handle your Bible?

35. How many books are there in the New Testament. _____
36. The short tax collector who climbed a tree to see Jesus was called _____
37. Which animal was Balaam riding on when an angel appeared to him?

38. Who interpreted Pharaoh's dream?

39. What did Samson find inside the body of the lion he had killed?

40. Abram's name was changed to

PART II: ISLAMIC RELIGIOUS EDUCATION

26. The only one worth worshipping is

27. In which surah in the Holy Quran do we ask Allah to protect us from all evil? _____

28. Surah An-Naas should be recited before _____

29. What do you do when you hear a Muslim sneeze?

30. Where was surah An-Nasr revealed? _____

31. Which character should you show when given home work by your teacher? _____

32. Naseeb always shares his snacks with his friends. The character Naseeb is demonstrating is

33. Which hand should Muslims use when eating? _____

34. What do Muslims do when they hear adhaan? _____

35. How many prophets are mentioned in the Quran? _____

36. What is the importance of playing among Muslim boys and girls?

37. Which attribute of Allah means the most gracious?

38. Which angels are responsible for keeping the records of our good and bad? _____

39. Which Holy book was prophet Mohammad given?

40. Angel _____ is in charge of paradise.