

Grade 4 mid term 1 August 2021

Mathematics

NUMBERS

1. Write 876 in words .


2. What is nine hundred and eighty eight in symbols?
3. Round off 466 to the nearest ten.
4. Write the multiple of 9 between 54 and 72.
5. What is the place value of digit 7 in 76 513?
6. A milk factory produce 5 684 packets of milk in the morning and 1 267 packets in the evening. How many packets of milk were produced that day?

7. There are 7 436 animals in Ole Macho's farm . Out of these 5 159 are cows and the rest are sheep. How many sheep are there in Ole Macho's farm?

8. Multiply: 30×73 .

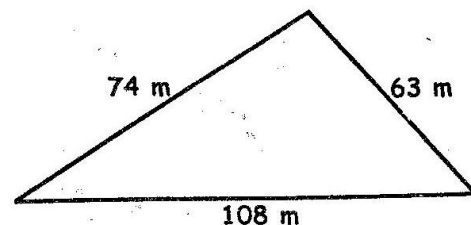
9. Divide: $4 \overline{)63}$

10. Shade $\frac{2}{3}$ of this group.



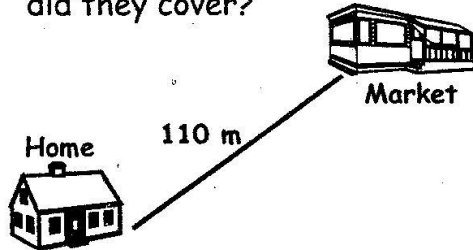
MEASUREMENT

11. Nzuki's plot of land is triangular in shape as shown below.



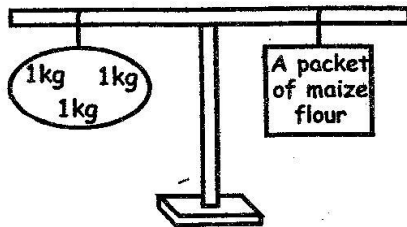
One day, he walked around the plot twice. What was the total distance covered?

12. Three girls, Wambui, Achieng and Karimi walked from home to the market. What distance did they cover?



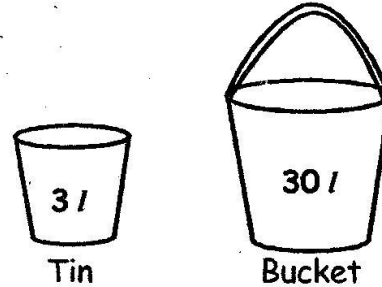
13. Mbuvi carried 20 kg of stones while Joshua carried 20 kg of papers. Who carried a lighter mass?

14. What is the mass of 5 packets of maize flour?



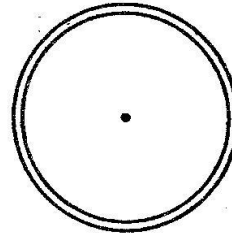
15. Mother had 47 litres of milk from her cows. She emptied 19 litres into container A, 18 litres into container B, 7 litres into container C and prepared tea with the rest. How much milk was used to prepare tea?

16. Mungai and Nyachae each had a tin like the one shown below.



- They wanted to fill the bucket. How many times will each of them empty the tin into the bucket?

17. Draw a clock face to show a quarter past ten.



18. A football match started at 2.15 pm. It took 45 minutes before halftime which lasted for 15 minutes. If the second half took 45 minutes, at what time did the match end?

19. How many 40 shilling coins can be obtained from 4-50 shilling notes?


20. Study the price list below:

<u>Item</u>	<u>Price</u>
Bread	Sh. 55
Milk	Sh. 50
Sugar	Sh. 100
Drinking chocolate	Sh. 120

John bought milk and sugar for his sister, drinking chocolate and sugar for his mother and bread and milk for his family. How much did he spend?

GEOMETRY

21. Join the dots using straight lines as shown




Which shape have you drawn?

Name the shapes drawn below

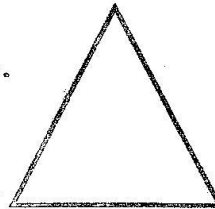
22.



23.



24.



25. Draw the next shape in the pattern below.

