


Grade 4 mid term 1 August 2021

Art & Craft

SECTION A
ART AND CRAFT

1. The item below can be used in smudging.




What is its name?

2. Create a tonal value on the strip drawn below.



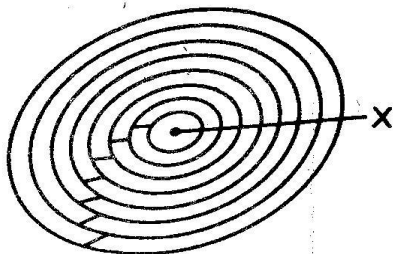
3. Draw a cylinder in the space provided.



4. What shade of red do we make by adding white to it?

SECTION B:
PHYSICAL HEALTH
EDUCATION

5. Below is an athletics track.





Name the part marked X.

6. Name one item you can use to improvise a hand ball.

7. In which pass is the ball held in both hands directly above the head?

SECTION C:
MUSIC

8. Musical instruments that produce sound when hit, shaken or scraped are called _____ instruments.
9. Colour an instrument that can be tuned.



10. Name the part marked Z.

