


GRADE 4 END TERM 1 AUGUST 2021 SOCIAL STUDIES

ART & CRAFT


1. What is the use of the material below in picture making?



2. Use smudging technique to draw a cylindrical tin.



3. Study the diagram below.



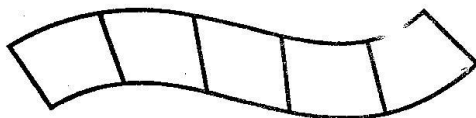
Why are some parts darker than others? _____

4. In which technique do we use oil-based ink and waxy crayons?

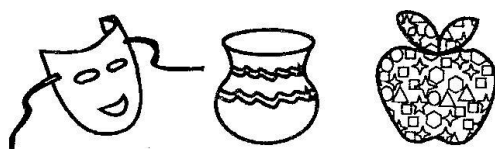
Name two materials we may need for crayon etching.

5. _____
6. _____

7. Create tonal variation in the strip drawn below.



8. Colour the picture demonstrating montage technique.

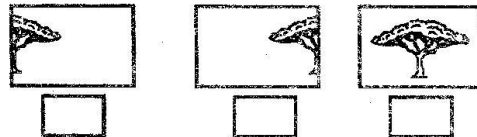


9. What do we call the process of adding different coloured paints to make a decoration? _____

The tools below can be used for cutting and pasting. Name them.

10. 11.

12. Tick the one that shows a balanced form.



13. Where can you get pictures when making a montage? _____

Draw and colour the following.

14. Hand 15. Classroom door

MUSIC

1. Percussion instruments are divided into _____ and _____
2. How is a descant recorder played?


3. Which part of a drum is commonly hit to produce sound?

4. Name one musical instrument that can be tuned for a better performance. _____
5. Sing one folk song from your community.
6. Write one good message we can get from a folk song.

7. Write one way you can observe safety when performing a folk song. _____

8. What does choral singing mean?

9. Colour the item that can be used when performing a folk song.



10. What are laces used for when making a drum? _____

11. Name the part of a drum that makes the sound louder.

Match the note with the correct pitch.

12. Note B Moderate pitch

13. Note A Low pitch

14. Note G High pitch


15. Write one element of a dance.

SOCIAL STUDIES

Name four seasons experienced in your county.

1. _____
2. _____
3. _____
4. _____


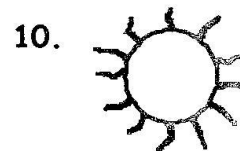
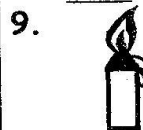
Name the physical features that provide the following.



7. What is a water reservoir?

8. What is the best place to dispose kitchen refuse?

Identify the following sources of heat.



12. Write one way of keeping a market place clean.

Name the uses of heat shown in each picture.



15. What do we call the point at which pedestrians cross a busy road?

16. On her way home, Saida meets a bodaboda rider who offers to give her a ride home. Saida does not know the bodaboda rider. What should she do?

17. Draw and colour traffic lights.



18. What does the road sign below mean?



19. Write one cultural event in your community.

20. How can you generate income from old newspapers?

CHRISTIAN RELIGIOUS EDUCATION

1. As Muli was finishing his homework, his sister asked him to join her in a computer game. Which choice should Muli make?

2. When Ananias and Sapphira lied to the Holy Spirit, which Christian value did they lack?

3. Name one member of your extended family.

4. How do you demonstrate responsibility while at home?

5. The Holy Spirit came to the disciples on the day of

6. What was the hometown of Jesus Christ? _____

7. As the wise men were guided by a star, where were they headed to?

8. In the story of the good Samaritan, who attacked the man who was travelling from Jerusalem to Jericho? _____

9. Before Jesus fed the five thousand men, where did He get the five loaves and the two fish?

10. When Jesus was walking on water, His disciples thought that He was a _____

ISLAMIC RELIGIOUS EDUCATION

1. According to surah Al-Kafirun, what freedom do we have?

2. Why did the Quraish refuse Islam? _____
3. What does shirk mean?

4. How many ayahs are there in surah Al-Kafirun? _____
5. What is the other name of surah Al-Lahab? _____
6. Latif always follows the character of prophet Muhammad (SAW) by speaking the truth every time. Which good character does he portray? _____
7. Who is a generous person?

8. Which hand are Muslims not allowed to use for eating?

9. What did prophet Muhammad (SAW) teach us to use for brushing our teeth? _____
10. Why should we practice physical fitness? _____