

GRADE 4 END TERM 1 AUGUST 2021 MATHEMATICS

NUMBERS

1. What is 888 in words?

Write the total value of digit

5 in:

2. 1 6 57

3. 1 5 90

4. 5 748

5. Write seven hundred and eleven in symbols.

6. A football match was attended by 1 346 men and 1 097 women. How many people attended the match altogether?

7. Write the smallest factor of 19.

8. Fill in the missing number

117, 144, 171, 198,

9. If I take away 4 from 24 four times, what will I remain with?

10. Mama Mboga had 3 baskets. If she put eight cabbages in each basket, how many cabbages did she have?

MEASUREMENTS

11. Subtract:
35m - 10m

12. Njoki and Koome have skipping ropes. Njoki's rope is 29 m while Koome's is 11 m shorter. What is the total length of their ropes?


13. Moha had 428 kg of tomatoes. If he sold 132 kg, how many kilograms of tomatoes was he left with?

14. A sufuria is 7 kg lighter than a superdrum. If the sufuria is 4 kg, what is the mass of the superdrum?

15. A school van uses 7 litres of petrol for every 5 km. How many litres will it consume for 15 km?

16. Take away 29 litres from 60 litres.

17. Use the clockface below to write the time.



18. Write the time in long form.

09:20

Write one example of:

A need

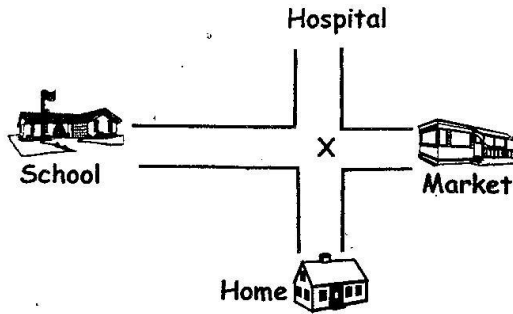
19. _____

A want

20. _____

GEOMETRY

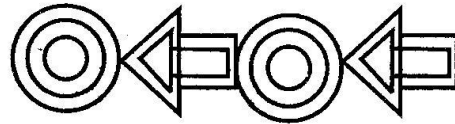
Study the diagram below and answer questions 21 and 22.



21. Mzuka stood at point X facing the school. If she turned to her left, what did she face?


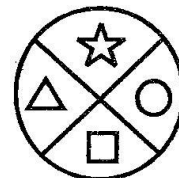

22. After turning to the right from X, Apolo faced the market. What was he facing before the turn?

23. Re-draw the pattern below.



24. Draw and colour a rectangle.

25. What is the next shape?



_____ ?