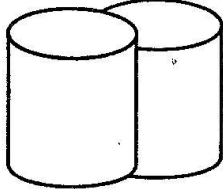


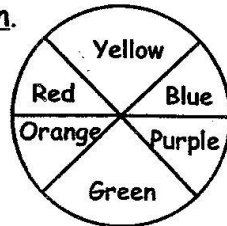
CLASS 5 END TERM 1 AUGUST 2021 SOCIAL STUDIES

ART & CRAFT


1. Shade the forms below using cross hatching technique to create light and dark effect.



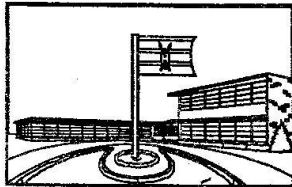
2. Colour as shown.



3. Draw and colour a glove puppet.



4. Colour the picture below.



5. Write the other name of a stick puppet. _____

6. Colour the drawing below.



7. Write down a title of a story that can be told using puppets.

8. Which part of your body can you use to manipulate a hand puppet?

Study the picture below.



9. What is the use of the item above? _____
10. What do we call the act of putting artwork into a frame before displaying it? _____
11. What are adhesives used for when mounting artworks?

12. Name one item that can be made using thonging technique.

13. Write the meaning of modelling.

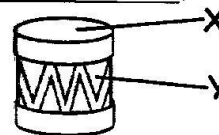
14. Write your name using block letters

15. Name one item we may need for picture making. _____

MUSIC


1. Sing the East African Community Anthem.

Name the parts of the musical instrument below.



2. X _____
3. Y _____
4. What do we call the traditional songs sung by a community?

5. Draw and colour a descant recorder.




6. Write the French rhythm name for crotchet. _____

7. Underline the French rhythm name for quaver.
(Taa, Ta-te, Ta)

8. What do we call the highness or lowness of sound? _____

Write the pitches represented by the hand signs below.

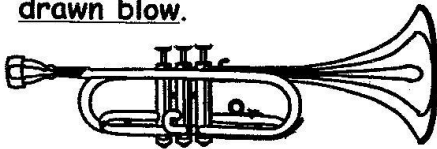


12. A good melody ends with pitch _____ (doh, re, mi)

13. How does listening to moral songs make you feel? _____

14. Name one musical instrument that can be played by blowing.

15. Colour the wind instrument drawn blow.



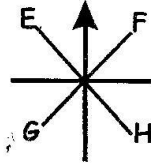
SOCIAL STUDIES

Name three elements of a map.

1. _____
2. _____
3. _____

4. From which physical feature do we get wood for construction?


Name the compass directions indicated by letters.



5. E _____ 6. F _____

7. G _____ 8. H _____

Give one benefit of each of the following physical features.



11. In which season are we likely to experience floods? _____

12. Name one historic built environment in your county.

13. How do your family members depend on traders in the market?

Describe the following population distribution patterns:

14. Dense population.

15. Sparse population.

16. People's way of life is their

17. What is the importance of a school routine?

Study the picture below.



18. Which economic activity is being carried out in the picture?

19. How does a school motto help learners?

20. What do we call the exchange of goods and services?

CHRISTIAN RELIGIOUS EDUCATION

1. Why did God create human beings? _____
2. What role do you play in your church? _____
3. What do we call the sub-divisions of the Bible? _____
4. Who was with Samson when he killed a lion? _____
5. What did Balaam's donkey see that made it stop walking?

6. "Remember your relative Elizabeth. It is said that she cannot have children but she herself is now six months pregnant, even though she is old." (Luke 1:36). Who was told these words? _____

7. Who was John the Baptist's father? _____

8. What lesson do Christians learn from the story of the healing of blind Bartimaeus? _____

9. What did Jesus compare the kingdom of God to?

10. What is revenge?

ISLAMIC RELIGIOUS EDUCATION.

1. Which surah in the Qur'an is a swalah? _____
 2. According to verse six of Suratul Fatiha, what do we ask God to show us? _____
 3. Who is the only one worth being worshipped? _____
 4. According to Suratul Ikhlas, what does Tawheed mean?

 5. Write one responsibility of your parent or guardian to you.

 6. Who worshipped idols in Makkah?

 7. Where did Islam begin?

- Name the three types of Najasaat.
8. _____
 9. _____
 10. _____