


CLASS 5 END TERM 1 AUGUST 2021 SCIENCE & TECHNOLOGY

3. I am a type of soil with large particles. My texture is rough and I hold very little water. Who am I? _____

4. What is the reason for sprinkling water on a compost heap? _____

5. Mr. Mkulima has banana peels, ash, maize stalks and pieces of broken plastic bottles. What doesn't he need to make a compost manure heap? _____

State the uses of water in each diagram.



Fill in the blanks with the given words.

Mango Tomato Guava Avocado

Fruits with one seed:

9. _____

10. _____

Fruits with many seeds:

11. _____

12. _____

13. What is a seedling?

Give one example in each case.

14. Vegetables: _____

15. Cereals: _____

HOME SCIENCE

1. State one healthy eating habit of a pre-teen. _____

Identify the play items drawn below.



5. Your uncle gave you a one hundred shilling note. Make a shopping list for supper for the two of you.

6. Wahome had ugali and cabbage for his lunch. Suggest one food he would have included to make his meal a balanced diet. _____



7. Maimuna has an egg, water and a source of heat. What is the most suitable method she can use to cook the egg? _____

8. What are fragile kitchen utensils?

State the best way of preserving the following food.

9. Milk _____
10. Cooked food _____
11. Dry maize _____
12. What is the use of buttons in clothes? _____

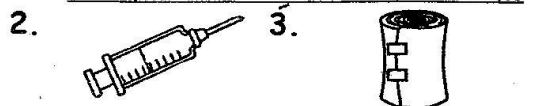
Identify the tools below.



PHYSICAL HEALTH EDUCATION

1. Name one item you can use to improvise a relay baton. _____

The items below are found in the first aid box. Name them.



4. Write the meaning of ABC in relation to First Aid _____
5. In which common injury do we apply a cold press? _____
6. Write one cause of nose bleeding. _____

7. Write down one safe way of applying bandage on a clean-cut wound. _____
8. How do you demonstrate teamwork in sportsmanship? _____
9. Write down one way of taking care of a swimming pool. _____

10. Name two types of dives.
a. _____
b. _____
11. Which playing item is used when playing the frisbee game? _____

12. A good sports person should avoid drugs. Name one harmful drug used in your community. _____

13. What does emotional well-being mean? _____

14. Draw one play item used for rounders.
-

15. Colour the picture below.

