

OPENER STD 4 TERM 2 2020 MATHEMATICS ACTIVITIES

NAME.....

Learner's Number

Gender Boy

Girl

County name County code

Sub county name Sub county code

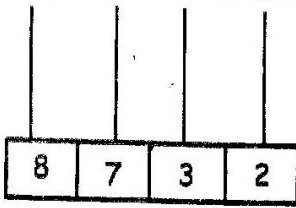
School name School code

The grid below is to be filled by the teacher after marking the learner's work

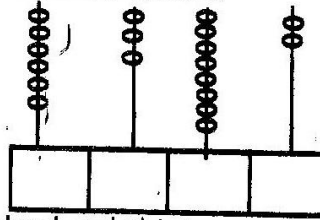
	Level 1	Level 2	Level 3	Level 4
Numbers 1-15				
Measurement 16-23				
Geometry 24-25				

NUMBERS

1. Complete the Abacus

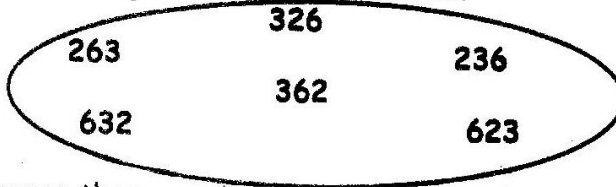


2. Fill the Abacus



3. A town has sixty thousand five hundred and thirty seven men. How many men are there in symbols? _____

4. The following are numbers in an oval.



Arrange these numbers in order from the largest to smallest

5. Kendi had these number cards 3 7 9

Which is the largest number he formed using the cards?

6. Write the first four multiples of 5

7. Write all the odd numbers between 1 and 8

Complete the numbers using an odd pattern

8. 3, 6, 9, _____, _____, _____

9. 55, 54, 53, 52, _____, _____

10. Agnes is reading a book in page X. Write the page number in Hindu Arabic numeral.

11. Add $6\,438 + 57 =$ _____

12. Add

6 572
<u>+ 1 825</u>

13. A shopkeeper bought 624 packets of flour. He bought 3 214 more packets. How many packets of flour did he buy?

14. Find the sum by first rounding off each number to the nearest 10 first.
 $75 + 31 =$ _____

15. Subtract $386 - 26 =$

MEASUREMENTS

16. Look at the strings.

13m

25m

What is the length of both strings altogether? _____?

17. Wangui had 57m long rope. She cut 25m rope from it and shared it to her sister. What length of rope did wangui remain with? _____

18. Look at the picture



The mass of the girl is _____ (same, heavier, lighter) than that of the boy.

19. What is $7\text{ kg} + 8\text{ kg} = ?$ _____

20. How many cups will fill this bottle? _____

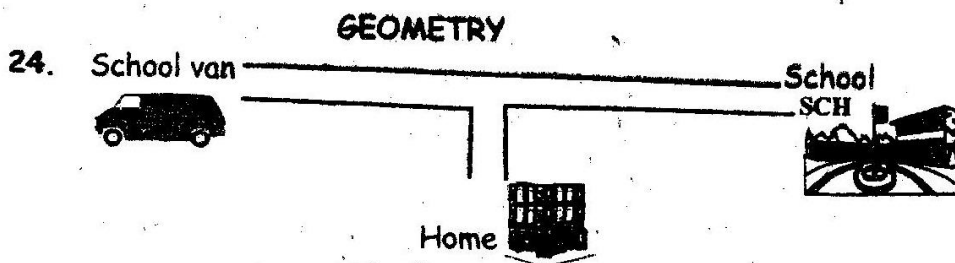


21. A boy was carrying 30 litres of milk in a bucket and then he fell down and 20 litres of milk spill out, how many litres of milk were left? _____

22. What is the time?



23. I had sh 300. I bought a book for sh 100. How much money was I left with? _____ min past _____



Which direction will the driver drive the van to go to the home? _____

25. Draw a pattern using these shapes

