

# OPENER STD 6 TERM 2 2020

## SOCIAL STUDIES & CRE

NAME.....

Learner's Number

Gender Boy

Girl

County name ..... County code

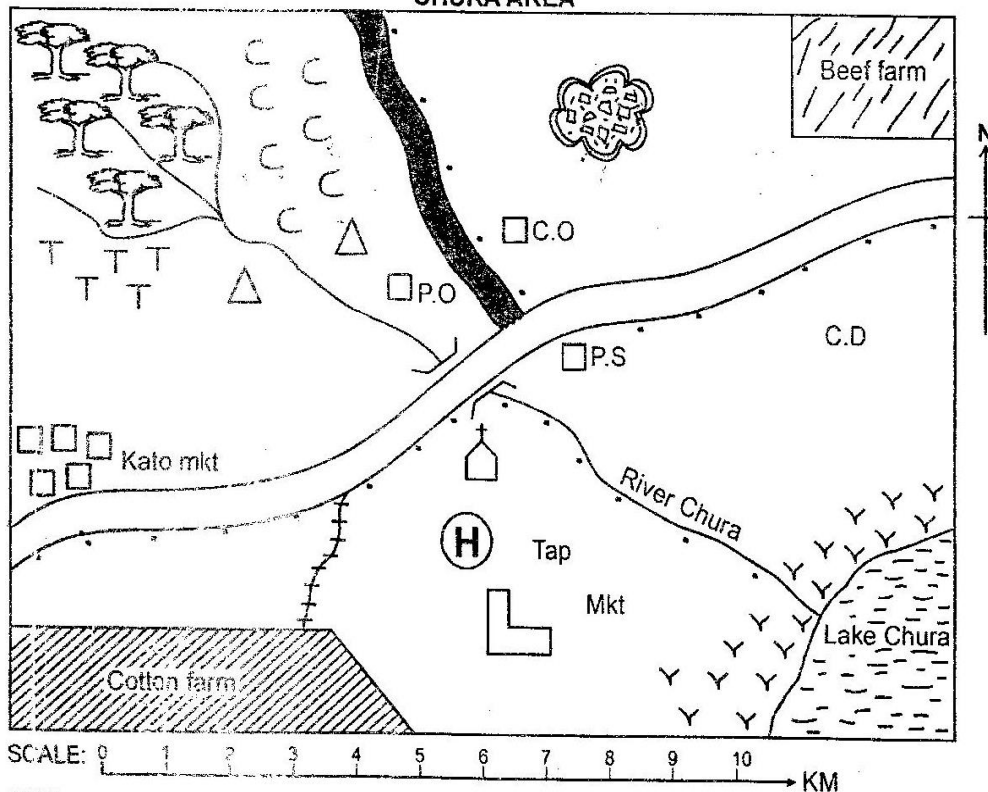
Sub county name ..... Sub county code

School name ..... School code

The grid below is to be filled by the teacher after marking the learner's work

	Level 1	Level 2	Level 3	Level 4
Numbers 1-15				
Measurement 16-23				
Geometry 24-25				

**PART I: SOCIAL STUDIES  
CHURA AREA**



**KEY**

	Tarmac road
	Murrum road
	School
	Tea
	Coffee
	Boundary line
	Cash office
	Police station
	Post office
	Hospital

	Grass
	Cattle dip
	Forest
	Church
	Settlement
	Market
	Hills
	River and Bridge
	Quarry

Study the map of CHURA area and use it to answer questions 1 to 7.

1. The direction of beef farm from cotton farm is \_\_\_\_\_.  
A. South West.                      B. North West.  
C. North East.                      D. South East.
2. People of Chura area practise a religion called \_\_\_\_\_.  
A. Christianity.                      B. paganism.  
C. traditionalism.                      D. Hinduism
3. Which type of climate is experienced in North Western part of Chura area?  
A. Hot and dry.                      B. Hot and wet.  
C. Cool and dry.                      D. Cool and wet.
4. The type of settlement in Chura area is **LIKELY** to be  
A. nucleated                      B. sparse.  
C. linear.                      D. clustered.
5. The **MAIN** source of River Chura is \_\_\_\_\_.  
A. at Lake Chura  
B. near the junction.  
C. at the cotton farm.  
D. near the forest.
6. The railway line in Chura area is **MOST LIKELY** to transport \_\_\_\_\_.  
A. beef animals.                      B. cotton.  
C. stones.                      D. people.
7. The **MAIN** administrative leader in Chura area is \_\_\_\_\_.  
A. Governor.  
B. Chief.  
C. Police.  
D. County commissioner.
8. People in traditional communities interacted **MAINLY** through \_\_\_\_\_.  
A. education.  
B. games and sports.  
C. wars and raids.  
D. trade.
9. The following are human basic needs **EXCEPT**  
A. clothing.                      B. education.  
C. food.                      D. shelter.
10. The arm of the government which makes laws is \_\_\_\_\_.  
A. Judiciary.                      B. Executive.  
C. Parliament.                      D. Cabinet.
11. Windvane is an instrument of weather which is used to measure \_\_\_\_\_.  
A. strength of wind.                      B. direction of wind.  
C. air pressure.                      D. speed of wind.
12. The Abukuria settled in the highlands during migration **MAINLY** because of  
A. good climate.                      B. plenty of grass.  
C. proper trading routes.                      D. plenty of water.
13. Which of the following the method used to mine salt in Kenya?  
A. Dredging.                      B. Evaporation.  
C. Deep shaft.                      D. Open cast.
14. The **MAIN** problem facing fishing in Lake Victoria is \_\_\_\_\_.  
A. lack of funds.  
B. lack of market.  
C. presence of water weeds.  
D. lack of proper roads to the market.
15. The country with the highest population density in Eastern Africa is \_\_\_\_\_.  
A. Tanzania.                      B. Somalia.  
C. Sudan.                      D. Uganda.
16. The colour that is used to represent vegetations in the map is  
A. green.                      B. blue.  
C. purple.                      D. brown.
17. Who was the religious leader among the Nandi communities?  
A. Oleibon.                      B. Orkoiyot.  
C. Koitalel.                      D. Lenana.
18. Who among the following people was the second prime minister in the republic of Kenya?  
A. Jomo Kenyatta.  
B. Daniel Moi.  
C. Raila Odinga.  
D. Kalonzo Musyoka.
19. Members of the county assembly are elected to represent \_\_\_\_\_.  
A. county.                      B. constituency.  
C. district.                      D. ward.
20. The **MAIN** tourist attraction along the Coast is **LIKELY** to be \_\_\_\_\_.  
A. wildlife.                      B. sandy beaches.  
C. pre-historical sites.                      D. cultural practices.



21. Which one of the following minerals is used to make cement?

- A. Limestone.                      B. Soda ash.  
C. Diatomite.                        D. Flourspar.

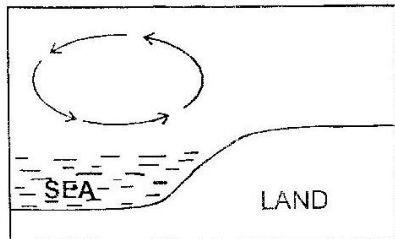
22. Which one of the following crops below **DOES NOT** require cool and wet climate during its growth?

- A. Tea.                                B. Coffee  
C. Pyrethrum.                        D. Sisal

23. Which one of the following groups of communities belong to the Highland Nilotes in Eastern Africa?

- A. Dahalo, Sanye and karamanjong.  
B. Luo, Shillock and Anuak.  
C. Nandi, Keiyo and Tugen.  
D. Turkana, Maasai and Njemps.

24. The feature below occur during the \_\_\_\_\_



- A. night.                              B. day.  
C. afternoon.                        D. evening.

25. The **MAIN** inland fishing ground in Eastern Africa is

- A. Uganda.                            B. Kenya  
C. Tanzania                            D. Sudan.

26. The original homeland of bantus communities was

- A. Bar-el Ghazel.  
B. Horn of Africa.  
C. South Sudan.  
D. Congo forest


27. Which one of the following political parties below led Kenya to the attainment of independence?

- A. KADU                                B. KPU  
C. KANU                                D. JUBILEE

28. Which one of the following is the staple food in Uganda? \_\_\_\_\_

- A. Potatoes.                            B. Bananas.  
C. Wheat.                                D. Maize.

29. The fishing method below is \_\_\_\_\_



- A. trawling.                            B. net drifting.  
C. use of basket.                        D. long lining.

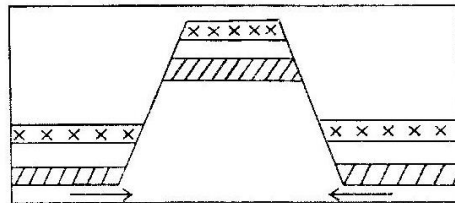
30. Lake Natron was formed through \_\_\_\_\_

- A. volcanicity.  
B. downwarping.  
C. faulting and sinking.  
D. lava flow.

31. The capital city of Rwanda is \_\_\_\_\_

- A. Bujumbura.                        B. Kigali.  
C. Asmara.                              D. Kampala.

Use the diagram below to answer questions 32 and 33.



32. The diagram above shows formation of \_\_\_\_\_

- A. the block mountains.  
B. the rift valley.  
C. volcanic mountains.  
D. fold mountains.

33. Which one of the following mountains was formed through the above process?

- A. Mt. Kenya.                        B. Mt. Pare.  
C. Mt Ruhondo.                        D. Mt Suswa.

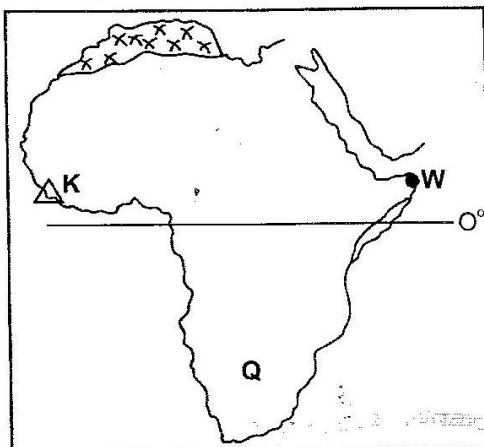
34. Building of gabions is the **BEST** way of controlling \_\_\_\_\_

- A. rill erosion                            B. Sheet erosion.  
C. gulley erosion.                        D. Splash erosion.

35. Who among the following people was the leader of Mau Mau movement in Kenya?

- A. James Gichuru.                        B. Jomo Kenyatta.  
C. Oginga Odinga.                        D. Dedan Kimathi.

Use the map below to answer questions 36 -40.



36. The MAIN cash crop produced in the country marked Q is \_\_\_\_\_  
 A. sisal. B. coffee.  
 C. sugarcane. D. tea.
37. The mountain marked K in the map is \_\_\_\_\_  
 A. Mt. Pare.  
 B. Mt. Ruwenzori.  
 C. Mt. Danakil Alphas.  
 D. Mt. Kenya.
38. Which one of the following countries is NOT crossed by the line marked 0°?  
 A. Somalia. B. Uganda.  
 C. Kenya. D. Burundi.
39. The region marked xxxxx in the map represent \_\_\_\_\_  
 A. River Nile. B. Nubian desert.  
 C. Ogarden desert. D. Sudd swamp.
40. The MOST Easterly point of Eastern Africa marked W is \_\_\_\_\_  
 A. Cape Guardafui.  
 B. Red sea.  
 C. Strout of Babel Madeb.  
 D. Gulf of Eden.
41. The MAIN factor that influence population distribution of people in Eastern Africa is \_\_\_\_\_  
 A. rainfall. B. soil.  
 C. vegetation. D. climate.
42. Which one of the following is the second LARGEST industrial town in Kenya?  
 A. Nairobi. B. Kisumu.  
 C. Thika. D. Mombasa.


43. Which one of the following allows school programs to be carried out without any difficult? School \_\_\_\_\_  
 A. motto.  
 B. badge  
 C. board of management  
 D. routine
44. The MAIN means of communication where information reaches many people in rural areas is through \_\_\_\_\_  
 A. radio. B. television.  
 C. newspaper. D. internet.
45. The MAIN reason why natural forests are preserved is because they are \_\_\_\_\_  
 A. homes for wild animals.  
 B. source of rivers.  
 C. sources of hardwood trees.  
 D. sources of timber.
46. Which of the following is an example of service industry?  
 A. Fruit canning.  
 B. Cement making.  
 C. Transport and communication.  
 D. Shoe making.
47. Which one of the following crop is grown under irrigation MAINLY in Mwea Tebere Irrigation Scheme?  
 A. Seed maize. B. Water melon.  
 C. Onions. D. Rice.
48. The LARGEST game park in Kenya is \_\_\_\_\_  
 A. Tsavo B. Sibiloi.  
 C. Maasai Mara. D. Maika Mari.
49. The state of emergency in Kenya was declared by Sir Barring in the year \_\_\_\_\_  
 A. 1964 B. 1963  
 C. 1957 D. 1952
50. Which relief region in Eastern Africa lies within the highest attitude?  
 A. Rift valley.  
 B. Coastal plains.  
 C. Highlands.  
 D. Lake Victoria basin.
51. The LARGEST country in Eastern Africa is \_\_\_\_\_  
 A. Sudan. B. Tanzania.  
 C. Ethiopia. D. Rwanda.

52. What is patriotism? Love for one's  
 A. family members.  
 B. country and willingness to defend it.  
 C. tribe members.  
 D. race and ready to protect it.

53. Three of the following practices should not be preserved **EXCEPT**  
 A. Wife inheritance.  
 B. Female genital mutilation.  
 C. Use of herbal medicine.  
 D. Early marriage to small girls.

54. Bantus left Shungwaya **MAINLY** because they \_\_\_\_\_  
 A. wanted to search for fertile soil for farming.  
 B. wanted to get trading partner.  
 C. wanted to get water and pasture for animals.  
 D. were attacked by hostile Galla people.

55. The road sign below means \_\_\_\_\_



- A. danger ahead.      B. round about ahead.  
 C. bumps ahead.      D. road closed.

56. Laws governing a country are found in a document called \_\_\_\_\_  
 A. hansard.      B. manifesto.  
 C. constitution.      D. book of law.

57. The person in charge of the body of election in Kenya is \_\_\_\_\_  
 A. Speaker.      B. Secretary.  
 C. Vice-chairperson.      D. Chairperson.

58. The **BEST** way to prevent drug abuse in Kenya is through \_\_\_\_\_  
 A. taking to prison drug users.  
 B. educating people on dangers of drug abuse.  
 C. arresting drug users.  
 D. making drugs illegal.

59. 1st June every year Kenyans celebrate \_\_\_\_\_  
 A. Madaraka day.      B. Mashujaa day.  
 C. Jamuhuri day.      D. Labour day.

60. The official counting of people by the government after ten years is called \_\_\_\_\_  
 A. counting.      B. inheritance.  
 C. census.      D. prediction.

## PART II: RELIGIOUS EDUCATION

### SECTION A:

#### CHRISTIAN RELIGIOUS EDUCATION

61. The **MAIN** reason why Adam and Eve were punished is because they  
 A. ate the fruit.  
 B. obeyed the serpent.  
 C. stayed naked.  
 D. disobeyed God.

62. The sign of the covenant between God and Noah was  
 A. flood      B. rainbow  
 C. circumcision      D. the ark

63. Samuel lived with priest Eli at a place called  
 A. Peniel      B. Bethel  
 C. Shiloh      D. Ramah

64. Among the following patriarchs, who is referred to as the father of faith?  
 A. Moses      B. David  
 C. Abraham      D. Isaac

65. Which one of the following is **NOT** among the ten commandments given to Moses on Mt. Sinai?  
 A. Respect your father and mother.  
 B. Do not steal.  
 C. Pray so that you may not enter into temptations.  
 D. Do not accuse anyone falsely.

66. Who among the twelve people was sold by his brothers because of their hatred but he forgave them?  
 A. Reuben      B. Benjamin  
 C. Jacob      D. Joseph

67. "Saul, Saul, why do you persecute me" The words were spoken by  
 A. God      B. Jesus  
 C. Stephen      D. Abraham



68. Who among the following was the father of Racheal?  
 A. Abraham                      B. Isaac  
 C. Laban                         D. Nahor
69. The wife of King Ahab was known as  
 A. Delilah                        B. Queen Jezebel  
 C. Queen Bethsheba         D. Queen Tamar
70. On the day of Pentecost how many disciples were present?  
 A. Twelve                        B. Hundred and twenty  
 C. Three thousand            D. Eleven
71. Ananias and his wife Sapphira died because of  
 A. selling the plot.  
 B. keeping some money.  
 C. cheating the Holy Spirit.  
 D. cheating Peter the Apostle.
72. Abraham was asked to sacrifice his son on Mt.  
 A. Carmel                         B. Moriah  
 C. Sinai                            D. Olive
73. Who among the following people doubted the resurrection of Jesus?  
 A. Judas Iscariot                B. Peter  
 C. Thomas                         D. James
74. King Saul disobeyed God when he spared the life of King \_\_\_\_ of the Amalekites.  
 A. David                          B. Agag  
 C. Darius                          D. Nebuchadnezzar
75. Which disciple of Jesus preached the good news on the day of Pentecost?  
 A. Peter                            B. Thomas  
 C. Mathew                         D. Paul
76. What did Peter do in Joppa? He  
 A. healed the blind beggars.  
 B. raised Dorcas from death.  
 C. baptised the Ethiopian Eunuch.  
 D. had a dream.
77. Which among the following was NOT an item during the passover?  
 A. Bitter herbs.  
 B. Roasted meat.  
 C. Leavened bread.  
 D. Unleavened bread.
78. The first four books of the New Testament RESPECTIVELY are  
 A. Mathew, Luke, Mark, John  
 B. Mathew, Mark, Luke, John  
 C. Mathew, Mark, John, Luke  
 D. Genesis, Exodus, Leviticus, Numbers
79. The mother of John the Baptist was known as  
 A. Hannah                         B. Zechariah  
 C. Peninah                        D. Elizabeth
80. During the last supper, what did the bread represent?  
 A. The church.  
 B. The body of Christ.  
 C. The blood of Jesus Christ.  
 D. Peoples hearts.
81. The first passover took place in  
 A. Jerusalem                      B. Mt. Olives  
 C. Egypt                            D. Bethlehem
82. Zacchaeus did all the following after his sins were forgiven EXCEPT  
 A. gave half of his belongings to the poor.  
 B. paid four times back to those he had cheated.  
 C. he got saved.  
 D. he collected more tax from people.
83. Abraham build alters to worship God. In which of the following places did Abraham NOT build an alter?  
 A. Shechem                        B. Bethel  
 C. Mt. Carmel                      D. Mt. Moriah
84. Who among the sons of Adam had his sacrifice refused by God?  
 A. Abel                              B. Jacob  
 C. Seth                              D. Cain
85. Which of the following prophets was sent to King Ahab to condemn his act of taking Naboths' vineyard? Prophet  
 A. Nathan                         B. Jeremiah  
 C. Elijah                          D. Hosea
86. What did Jesus use to teach the word of God?  
 A. Parables                        B. Songs  
 C. Textbooks                      D. Blackboard
87. Jesus ascended into heaven at a place called  
 A. Antioch                         B. Bethany  
 C. Jerusalem                      D. Nazareth
88. When King Saul did not get response from God, he decided to visit a Medium at a place called  
 A. Endor                            B. Philistine  
 C. Ramah                          D. Shunem
89. What should Christians do when they are disappointed?  
 A. Disappoint other people too.  
 B. Tell everyone they see:  
~~C. Pray to God.~~  
 D. Cry for help.
90. Who among the following people was NOT thrown into a furnace by Nebuchadnezzar?  
 A. Meshack                        B. Shadrack  
 C. Abednego                        D. Daniel